



AI TONG SCHOOL

2005

YEAR-END EXAMINATION

PRIMARY 1

MATHEMATICS

DURATION : 1 h 30 min

DATE: 25 October 2005

INSTRUCTIONS

Do not open the booklet until you are told to do so.

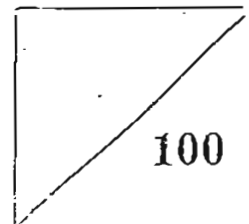
Follow all instructions.

Answer all questions.

Name : _____

Class : Primary 1 _____

Marks:

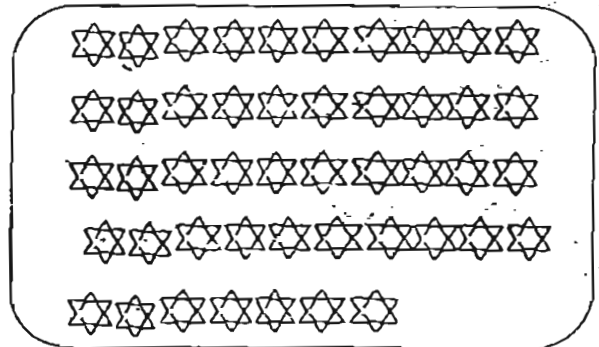



Parent's Signature : _____

Date : _____

Section A (28 x 2 marks)

1. Count carefully and write the number in the box.



2. Circle the biggest number.

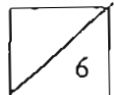
Thirty-eight

53

2 tens 7 ones

3. Write in words:

49: _____



4. Write in number.

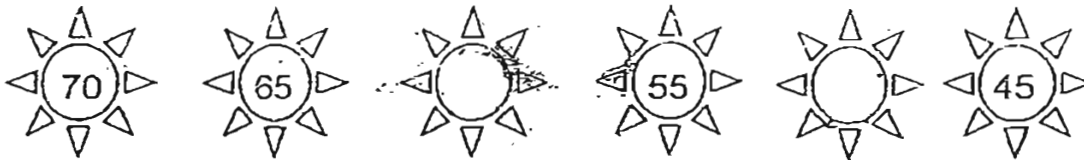
Eighty- three: _____

Fill in the missing numbers for question 5 and 6.

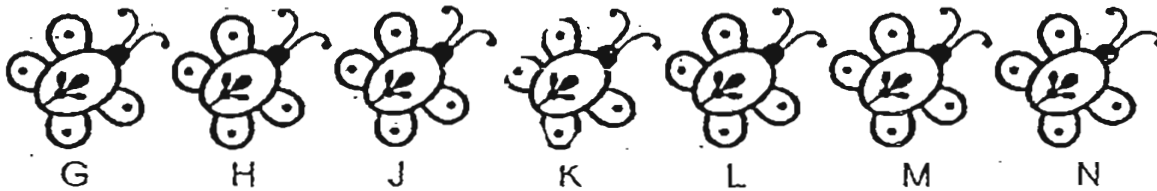
5.



6.

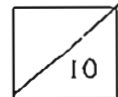


Look at the pictures and answer questions 7 and 8.



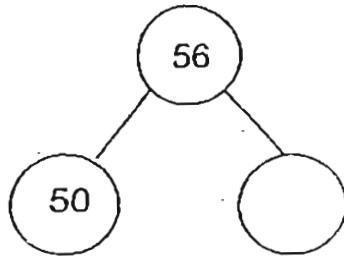
7. Butterfly _____ is 5th from the left.

8. Circle the 4th butterfly from the right.

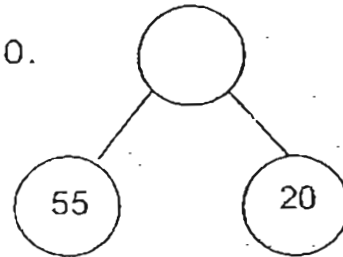


Fill in the missing number for questions 9 and 10.

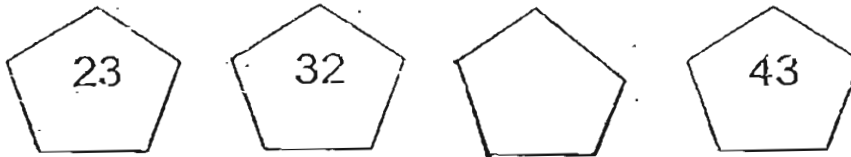
9.




10.



11. Colour the answer for $26 + 8$.



12.

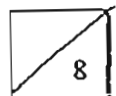


chicks

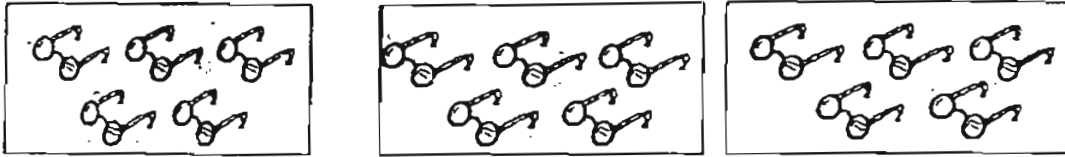


sheep

There are _____ more chicks than sheep.



13.




The above picture shows _____ groups of _____.

14. Complete the multiplication sentence.

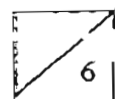


$$\square \times \square = \square$$

15. Ring the bees into groups of 3.



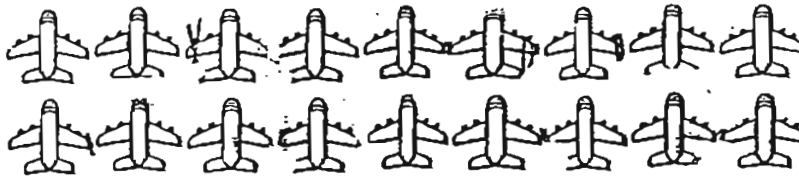
There are _____ groups of 3.



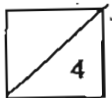
16. Put 20 apples equally into 5 plates.
Draw the apples on the plates.



-
17. Put 18 aeroplanes equally in 6 groups.

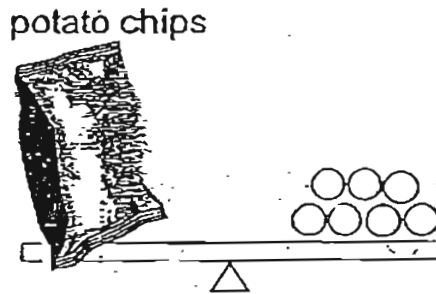



There are _____ aeroplanes in each group.



Look at the pictures and answer questions 18 and 19.


Use ○ as 1 unit.



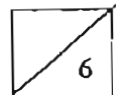
18. The cookies weigh _____ units.

19. The cookies are _____ the potato chips.
(heavier than lighter than as heavy as)

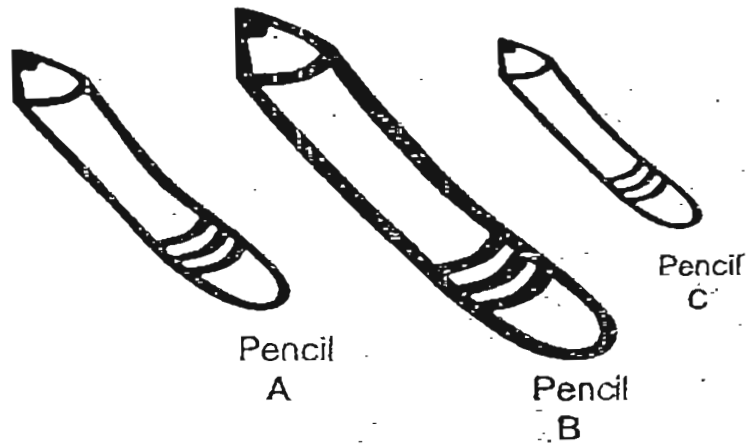
Look at the pictures and answer the question below.



20. The _____ is the lightest.

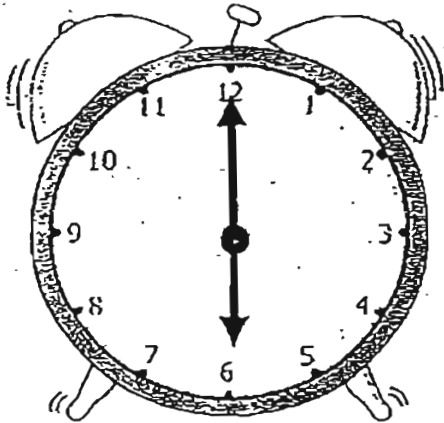


21.



Pencil A is longer than Pencil _____.

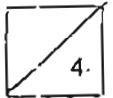
22. Colour the correct time shown on the clock face.



12 o'clock

half past 6

half past 12



23. Write the time shown on the clock face.



The time is _____

24. Write the correct answer in the blank.

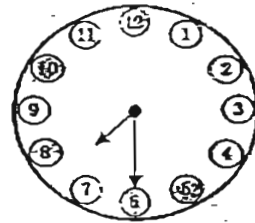

10 o'clock

12 o'clock

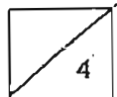
2 o'clock

half past 3

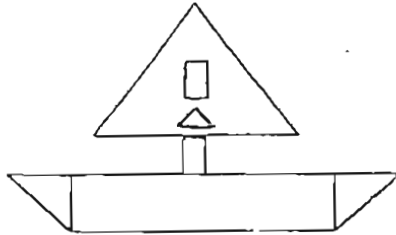
half past 7



We have dinner at _____



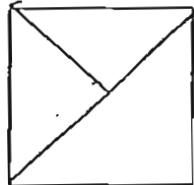
25. Colour the smallest triangle blue.



26. Draw the missing shape.



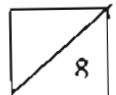
27. Draw 2 lines to make 3 triangles.



28. One 50¢ coin = _____ 5¢ coins ,



= ?



Section B (13 x 2 marks)

Do the sums carefully.

29. The number between 89 and 91 is _____.

30. 8 more than 54 is _____.

31. 6 less than 7 tens 9 ones is _____.

32. $64 + 5 =$ _____.

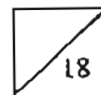
33. $89 =$ _____ tens _____ ones

34. $78 -$ _____ $=$

35. $93 - 8 =$ _____

36. 3 groups of 2 = _____

37. $6 + 6 + 6 + 6 =$ _____ $\times 6$

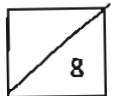


38. 5 nines = _____ x _____

39. 3 groups of 8 = _____ + _____ + _____

40. \$16 + \$8 = \$ _____

41. 3 twenty-cent coins and 1 five-cent coin = _____ ¢



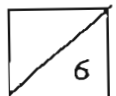
Section C (6 x 3 marks)

42. Mother buys 34 oranges and 5 mangoes from the supermarket.
How many fruits does she buy altogether?

Mother buys _____ fruits altogether.

-
43. Jane plants 8 green beans, 5 red beans and 6 black beans into a flower pot.
How many beans are there in the flower pot?


There are _____ beans in the flower pot.



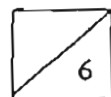
44. Bala has 48 toy aeroplanes.
He has 9 more toy aeroplanes than Ali.
How many toy aeroplanes does Ali have?

Ali has _____ toy aeroplanes.

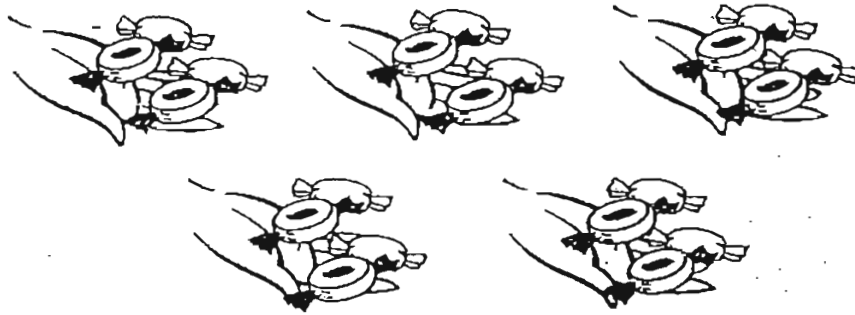
-
45. There are 33 children and 12 adults on a bus.
How many more children than adults are there on the bus?



There are _____ more children.



46. There are 5 children at a party. Each child gets 4 sweets. How many sweets do they get altogether?



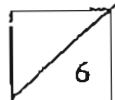
They get _____ sweets altogether.

-
47. Mark and John have 90 cents altogether. Mark has 50 cents. How much does John have?



John has _____¢.

- End of paper -
Have you checked your work?



Answer Sheets

- 1) 54, 47 2) 53 3) forty-nine 4) 83 5) 80, 82, 84, 86, 88
6) 70, 65, 60, 55, 50, 45 7) L




- 8) K
9) 6 10) 75
11) 34
12) 5
13) 3 groups of 5 14) $4 \times 2 = 8$ 15) 4 groups of 3



- 16)
17) 3 18) 5 units 19) lighter than
20) ball 21) C 22) 6 O'clock 23) half past 9
24) half past 7 26)



- 27)  28) 10 29) 90 30) 62 31) 73 32) 69
33) 8 tens 9 ones 34) 6 35) 85 36) 6 37) 4
38) 5×9 39) $8 + 8 + 8$ 40) \$24 41) 65¢ 42) $34 + 5 = 39$ 43) $8 + 5 + 6 = 19$
44) ~~48~~ - 9 = 39 45) $33 - 12 = 21$ 46) $5 \times 4 = 20$ 47) 40¢