

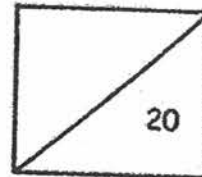
Anglo-Chinese School (Junior)

Mathematics
Bite-sized Assessment 1 (2017)
Primary 2

Name : _____ ()

23 February 2017

Class : P 2. _____



Parent's Signature : _____

Questions	Skills and Concepts
1, 2, 3, 4	Counting to 1000, Place Values
5, 8	Comparing Numbers, Order and Patterns
6	Even and Odd Numbers
7, 9, 10	Addition / Subtraction Within 1000

Write your answers in the boxes provided. (10 x 2 marks)

1. (a) In the number 960, the digit is in the tens place.

(b) What is the value of 5 hundreds and 8 ones?

2. $300 = \square$ hundreds.





3. (a) 30 more than 257 is \square

(b) 100 less than 486 is \square

4. Write in words.

842 _____

5. Arrange the numbers below.
Begin with the greatest number.

			
\square	\square	\square	\square

Greatest

6. (a) Use all the digits below to form the smallest 3-digit number. (do not begin with 0)

3, 8, 0

- (b) Use the digits below to form the greatest 3-digit odd number.

2, 6, 5

7.(a)

$$\begin{array}{r} 3 \ 7 \ 5 \\ + 2 \ 4 \ 9 \\ \hline \end{array}$$

(b)

$$\begin{array}{r} 6 \ 4 \ 4 \\ - 2 \ 1 \ 6 \\ \hline \end{array}$$

8. Complete the number pattern below.

163, 166, 169, , , 178

9. (a) $\square + 123 = 458$

(b) $\square - 246 = 682$

10. (a) Write in the missing numbers.

$$\begin{array}{r} 7 \quad 3 \quad 5 \\ + \square \quad \square \quad 5 \\ \hline 9 \quad 0 \quad 0 \end{array}$$

(b)

$$\begin{array}{r} 8 \quad \clubsuit \quad 2 \\ - 1 \quad 8 \quad \clubsuit \\ \hline 6 \quad 5 \quad 8 \end{array}$$

The value of \clubsuit is

\square

EXAM PAPER 2017(P2)

SCHOOL : ACS

SUBJECT : MATHEMATICS

TERM : CA1

- 1)a)6 b)508 2)3 3)a)287 b)386
4)eight hundred and forty-two 5)825 , 582 , 528 , 285
6)a)308 b)625 7)a)624 b)428 8)172 , 175
9)a)335 b)928 10)a)16 b)4

