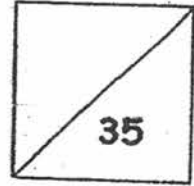




HENRY PARK PRIMARY SCHOOL  
 2017 PRIMARY 2  
 MATHEMATICS QUIZ 3  
 MULTIPLICATION TABLES OF 2, 3, 4, 5 & 10  
 MONEY  
 SHAPES



Name: \_\_\_\_\_ (     )     Date: \_\_\_\_\_

Class: Primary 2 \_\_\_\_\_ Parent's Signature: \_\_\_\_\_

Duration: 45 minutes

**Section A: Multiple-choice Questions (4 x 1 mark)**

Choose the correct answer and write its number (1, 2, 3 or 4) in the brackets provided.

1. How many ten-cent coins make 50¢?

(1) 1

(2) 5

(3) 3

(4) 4

(     )

2. \$49 and \_\_\_\_\_ make \$100.

(1) \$49

(2) \$50

(3) \$51

(4) \$61

( )

3. Look at the pictures below.




Cupcake

\$2



Sundae

\$3



Hamburger

\$4



Pizza

\$5

Mr Lee bought 4 of the same item for \$16. Which item did he buy?

(1) Pizza

(2) Sundae

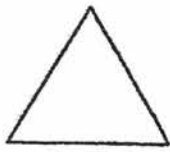
(3) Cupcake

(4) Hamburger

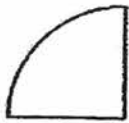
( )

4. Which one of the following figures is a quarter circle?


(1)




(2)



(3)



(4)



( )

**Section B: Open-ended Questions (15 marks)**

Fill in the correct answers in the spaces provided. Questions 5 to 13 carry 1 mark each and Questions 14 to 16 carry 2 marks each.

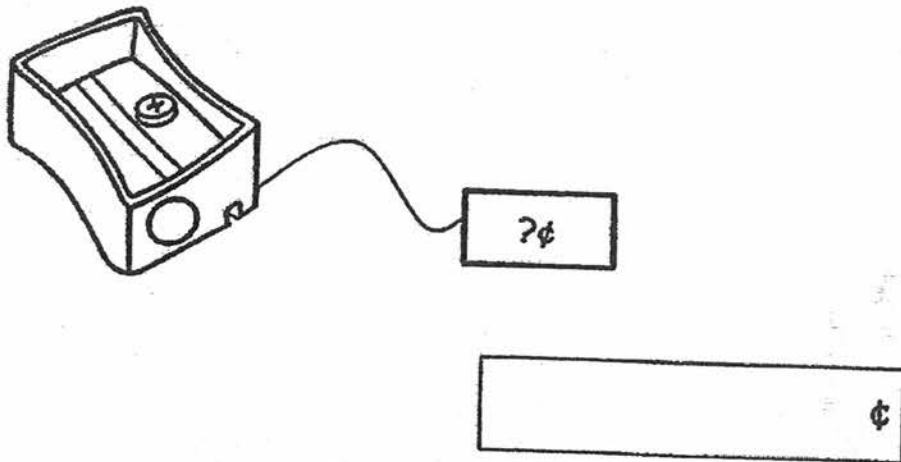
5. The toy car costs \$45.



Shade the notes and coins that make \$45.

\$50	\$10	\$1	50¢
\$10	\$5	\$1	5¢
\$10	\$5	20¢	5¢
	\$2	20¢	5¢

6. Jerry used one 50-cent coin and two 20-cent coins to buy a sharpener. How much does the sharpener cost?



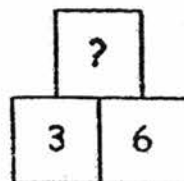
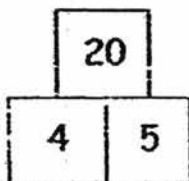
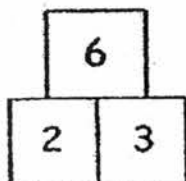
7. Three boys saved some money from their allowance. Jake saved \$28.30. Darren saved \$53.20. Brendan saved \$23.80. Arrange the amount of their savings from the smallest to the greatest. Begin with the smallest amount.

\_\_\_\_\_ , \_\_\_\_\_ , \_\_\_\_\_  
Smallest

8. What is the missing number?

$5 \times 8 =$  \_\_\_\_\_ tens

9. Study the pattern below. What is the missing number?

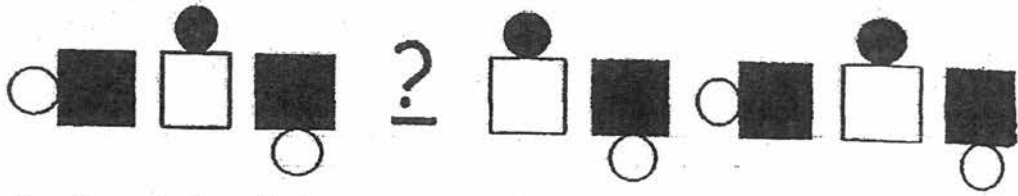


10. I have 3 sides and 3 corners. All my sides are straight lines.


I am a triangle / square / rectangle. (Circle the correct answer.)


11. How many circles does 6 semicircles make?

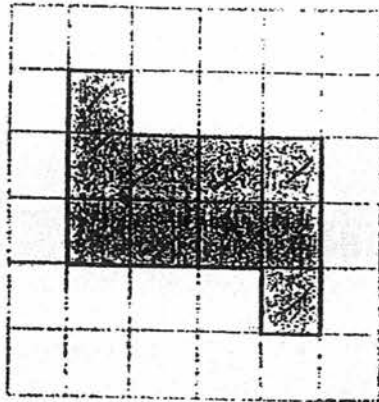
12. Study the pattern below.



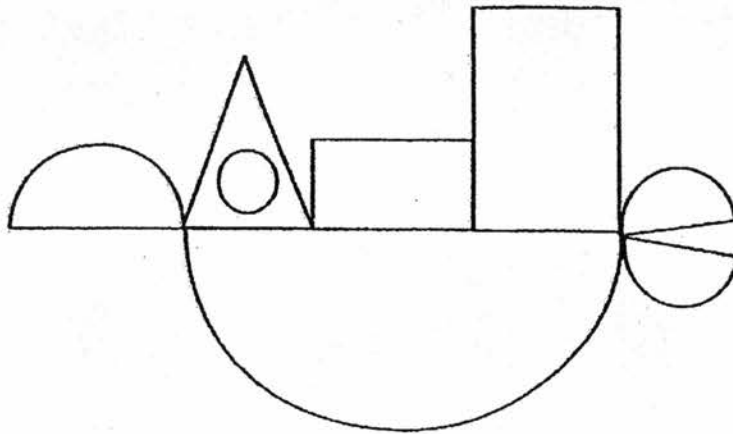
Circle the missing shape.



13. How many  are needed to form the figure below?



14. Count the number of semicircle(s) and rectangle(s) used to form the picture below.



semicircle(s)

rectangle(s)

15. Fill in the blanks.

(a)  $\$74.05 =$  \_\_\_\_\_ dollars \_\_\_\_\_ cents

(b)  $\$6 =$  \_\_\_\_\_ cents



16. I am thinking of two numbers.  
The two numbers add up to 10.  
The bigger number can be divided by 4 exactly.  
What are the two numbers?

and

**Section C: Problem Sums (4 × 4 marks)**

Do these sums carefully. You may use models to help you. Show all your equations, workings and word statements clearly in the spaces provided.

17. The cost of an adult movie ticket is \$14.  
The cost of a child movie ticket is \$8.

- a) Four children went to watch a movie.  
How much did they pay altogether?

Working

- b) Mrs Tan brought her child to watch a movie.  
How much did they pay altogether?

Working

18. Benny and Danish are painters. Each day, Benny can paint 4 rooms and Danish can paint 3 rooms.

a) How many rooms can Benny paint at the end of 6 days?

Working

b) How many days does Danish need to paint 21 rooms?

Working

19. A teddy bear cost \$55.

A toy aeroplane cost \$16 less than the teddy bear.

a) How much did the toy aeroplane cost?

Working

b) Robert bought the teddy bear.

He gave the cashier \$100.

How much change did he receive?

Working

20. Vivian wants to buy 5 bags of oranges.

There are 6 oranges in each bag.

a) How many oranges does she buy altogether?

Working

b) Each bag of oranges costs \$2. How much does Vivian have to pay altogether?

Working

- End of paper -

Setters: Ms Iris See, Ms Norasikin and Ms Rajesheela



EXAM PAPER 2017(P2)

SCHOOL : HENRY PARK

SUBJECT : MATHEMATICS

TERM : CA2

Q1	Q2	Q3	Q4
2	3	4	2

5) \$10, \$10, \$10, \$5, \$5, \$2, \$1, \$1, 50c, 50c, 5c, 5c

6) 90c      7) \$23.80, \$28.30, \$53.20      8) 4      9) 18      10) triangle

11) 3      12)       13) 10      14) 4 semicircle (s) / 2 rectangle (s)

15) a) \$74.05 = 74 dollars 5 cents      b) \$6 = 600 cents      16) 8 and 2

17) a)  $4 \times \$8 = \$32$

They paid \$32 altogether

b)  $\$14 + \$8 = \$22$

They paid \$32 altogether.

18) a)  $6 \times 4 = 24$

Benny can paint 24 rooms at the end of 6 days.

b)  $21 \div 3 = 7$

Danish needs 7 days to paint 21 rooms.

19)a)  $\$55 - \$16 = \$39$

They toy aeroplane cost \$39.

b)  $\$100 - \$55 = \$45$

He received \$4

20)a)  $5 \times 6 = 30$

She buy 30 oranges altogether.

b)  $5 \times 2 = \$10$

Vivian has to pay \$10 altogether.