

**NANYANG PRIMARY SCHOOL
MATHEMATICS
PRIMARY TWO
2017 COMBINED TOPICAL TEST 2
PRACTICE PAPER 2**

Name: _____ () Marks: / 30

Class: Primary 2 () Parent's Signature: _____

Date: _____

Duration: 45 minutes

Section A

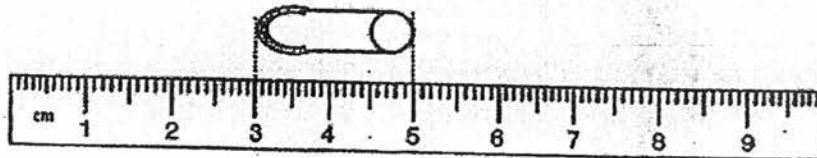
Questions 1 to 8 carry 1 mark each.

For each question, four options are given.

One of them is the correct answer.

Choose the correct answer and write its number (1, 2, 3 or 4) in the brackets () provided. (Total: 8 marks)

1. What is the length of the safety pin?



- (1) 5 cm (2) 2 cm
(3) 3 cm (4) 4 cm ()

2. The length of Amy's string is 12 cm.
The length of David's string is 24 cm.
What is the total length of both strings?

- (1) 16 cm (2) 26 cm
(3) 36 cm (4) 46 cm ()

3. Renee has 3 packets of sweets.
Each packet contains the same number of sweets.
There are 27 sweets altogether.
How many sweets are there in each packet?

(1) 6
(3) 8

(2) 7
(4) 9

()

4. Geetha bought 36 pieces of cakes.
She packed 4 pieces of cake into one box.
How many boxes did she use to pack all her cakes?

(1) 6
(3) 8

(2) 7
(4) 9

()

5. A bus can ferry 10 people.
How many people can 4 buses ferry?

(1) 40
(3) 10

(2) 14
(4) 4

()

6. 8 groups of 4 is the same as _____.

(1) $8 + 4$
(3) $4 + 4$

(2) 8×4
(4) 4×4

()

7. Karen's lego block tower is 78 cm tall.
Her lego block tower is 13 cm taller than Shiva's lego tower.
What is the height of Shiva's lego block tower?

(1) 38 cm
(3) 91 cm

(2) 65 cm
(4) 92 cm

()

8. Lucian gave 24 strawberries equally to 4 friends.
How many strawberries would each of them get?

(1) 6
(3) 3

(2) 8
(4) 4

()

Section B

Questions 9 to 13 carry 2 marks each.

Show your working clearly in the space provided for each question and write your answer in the blank provided.

(Total: 10 marks)

9. What is the answer when 7 tens is added to 7 groups of 3?

Ans: _____

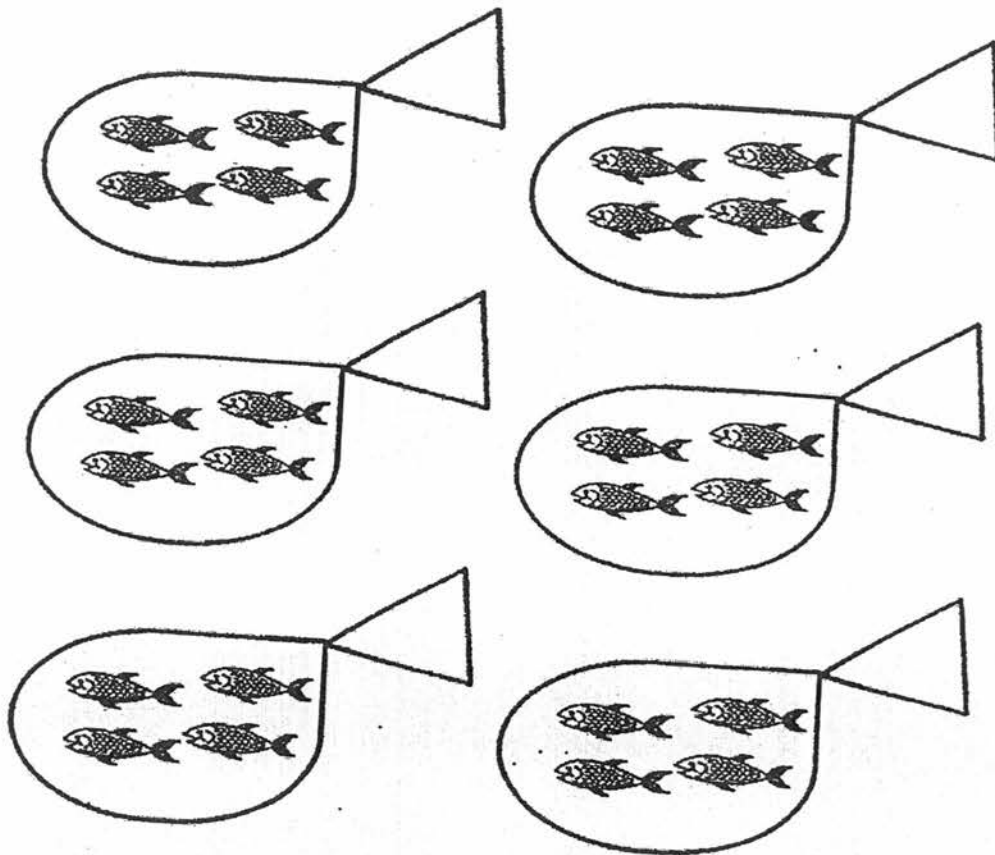
10. Thaman has 26 marbles.
He has 4 bags.
He wants to have 7 marbles in each bag.
How many more marbles does he need?

Ans: _____

11. Jenny's height is between 130 and 145 cm.
It is an odd number.
The sum of the digits are 7.
What is Jenny's height?

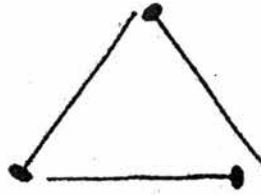
Ans: _____ cm

12. Casey bought 6 packets of fish from the fish shop.
There are 4 fish in each packet.
How many fish did he buy in total?



Ans: _____

13. Mohammad made a total of 7 squares and triangles.
He used 4 toothpicks to make a square and 3 toothpicks to
make a triangle.
He used 25 toothpicks altogether.
How many triangle did he make?



Ans: _____

Section C

Questions 14 to 16 carry 4 marks each.

Do these word problems carefully.

Show your number equations and workings clearly in the space provided for each question.

(Total: 12 marks)

14-20. En Hui bought 3 packs of pen. Each pack contained 6 pens.

(a) How many pens did she buy altogether?

She bought _____ pens altogether.

(b) Jeremy bought 40 pens and packed them in 10 bags.
How many pens were there in each bag?

There were _____ pens in each bag.

15
~~21~~

Mrs Tan bought 526 cm of string on Monday and 296 cm of string on Tuesday.

(a) What is the length of the string she bought?

She bought _____ cm of string.

(b) Mr Tan bought 700 cm of ribbon. He had 378 cm left after using some of it to tie a box. What is the length of the ribbon he used to tie the box?

He used _____ cm to tie the box.

16
~~22~~

Siti cuts a piece of cloth into 2 pieces, Cloth A and Cloth B.
Cloth A is 127 cm long.
Cloth B is 55 cm longer than Cloth A.

(a) What is the length of Cloth B?

Cloth B is _____ cm long.

(b) Siti buys another 405 cm of cloth and used 296 cm of it to make curtains. What is the length of cloth she is left with?

She is left with _____ cm of cloth.

☺ End of Paper ☺
Please Check Carefully

EXAM PAPER 2017(P2)

SCHOOL : NANYANG

SUBJECT : MATHEMATICS

TERM : SA1

Q1	Q2	Q3	Q4	Q5	Q6	Q7	Q8
2	3	4	4	1	2	2	1

9) $70 + 21 = 91$

10) $4 \times 7 = 28$

11) 133 cm

12) 24

13) 3

$28 - 26 = 2$

14) a) pen = $3 \times 6 = 18$

She bought 18 pens altogether.

b) each bag = $40 \div 10 = 4$

There were 4 pens in each bag.

15) a) Monday = 526 cm

Tuesday = 296 cm

In total = $526\text{cm} + 296\text{cm} = 822\text{cm}$

She bought 822 cm of string.

