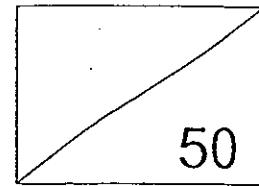


Red Swastika School
Primary 1
Review Test 1
Mathematics



Name: _____ ()

Date: 25 Sep 2013

Class: Pr 1/ _____


Duration: 1 hour

Parent's Signature: _____

Section A: 10 marks (2 marks each)

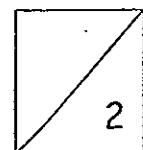
Choose the correct answer and write its number in the brackets provided.

1) Arrange the animals from the tallest to the shortest.

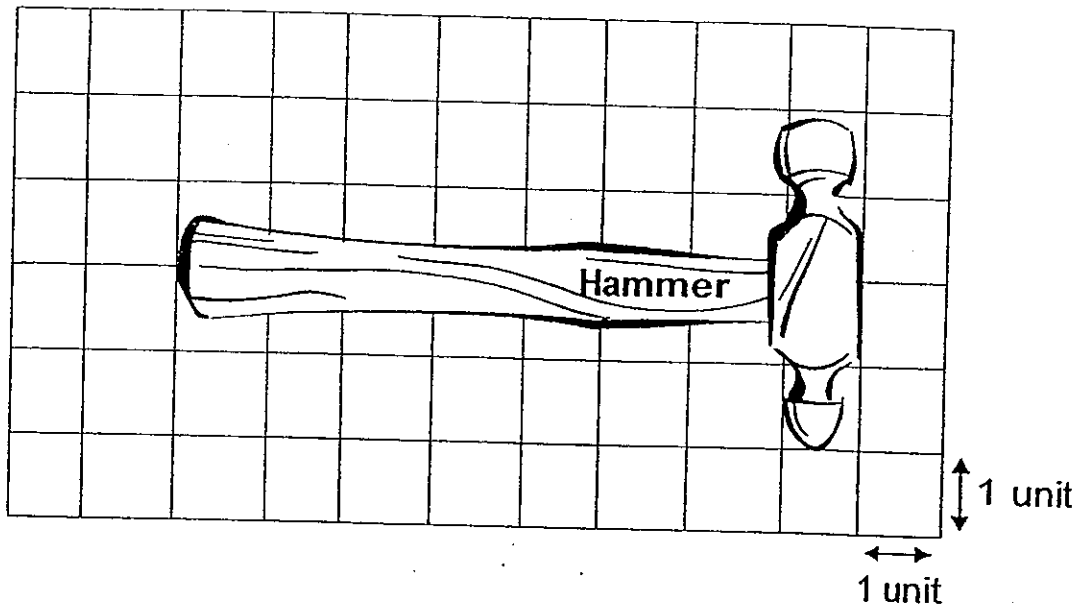


- (1) Giraffe, Otter, Zebra
- (2) Otter, Zebra, Giraffe
- (3) Zebra, Giraffe, Otter
- (4) Giraffe, Zebra, Otter

..... ()



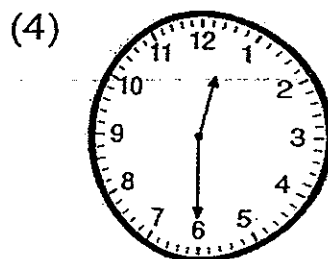
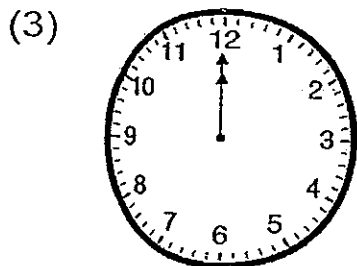
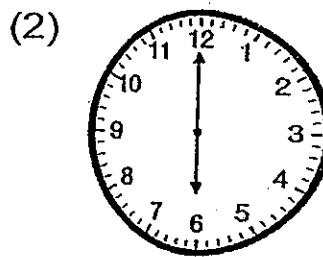
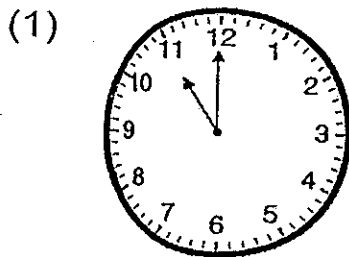
2) How long is the hammer?



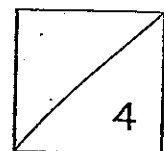
- (1) 8 units
- (2) 9 units
- (3) 10 units
- (4) 11 units

()


3) Which clock below shows 12 o'clock?



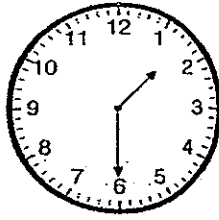
()



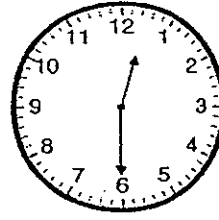
4) Which clock shows the correct time?



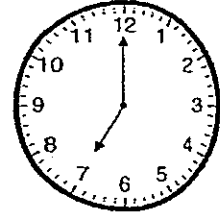
Clock A
half past 6



Clock B
6 o'clock



Clock C
half past 12

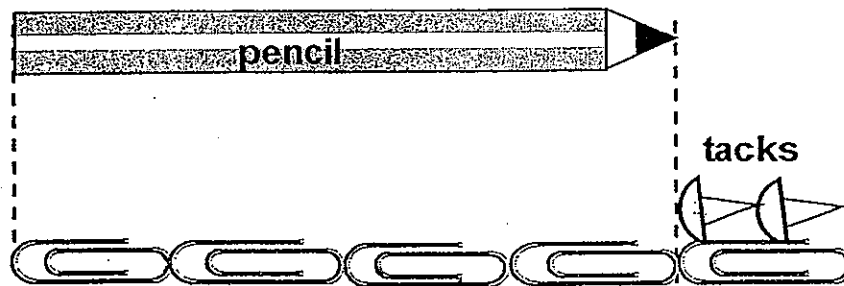


Clock D
12 o'clock

- (1) Clock A
- (2) Clock B
- (3) Clock C
- (4) Clock D

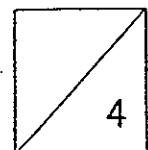
()

5) The pencil below is _____ long.



- (1) 8
- (2) 2
- (3) 5
- (4) 4

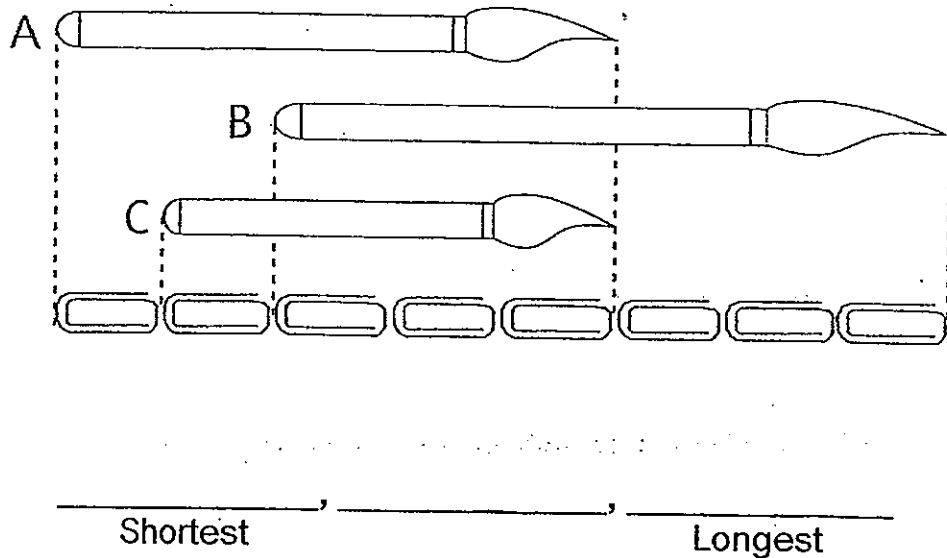
()



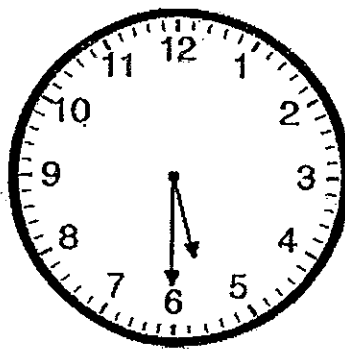
Section B: 24 marks (2 marks each)

Work out the following sums. Show all your workings and write the answers in the spaces provided.

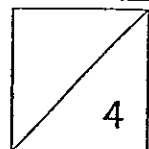
- 6) Arrange the paint brushes in order starting from the shortest.



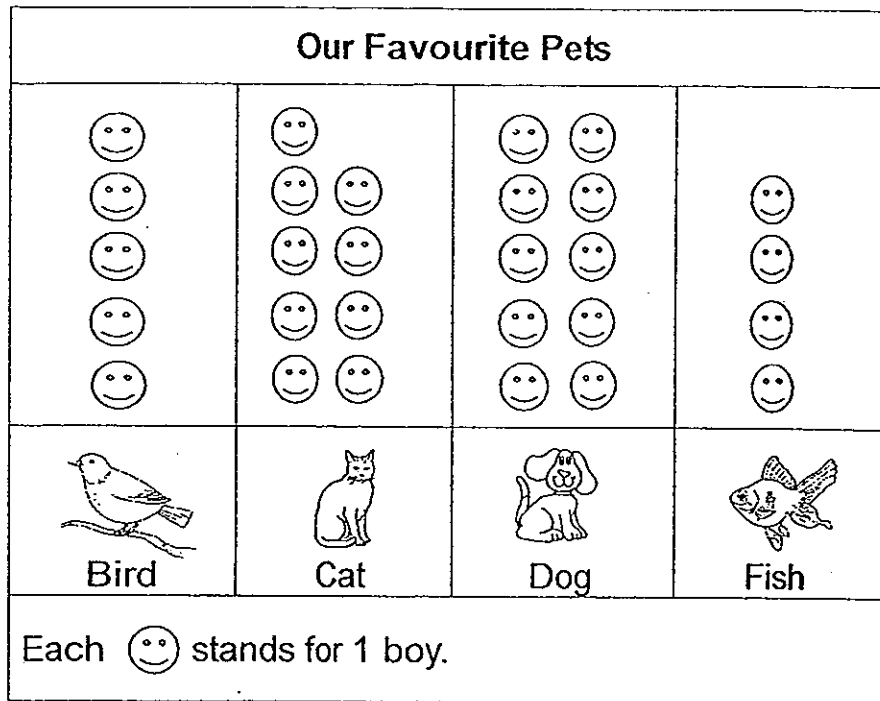
- 7) What is the time shown in the clock?




The time is _____

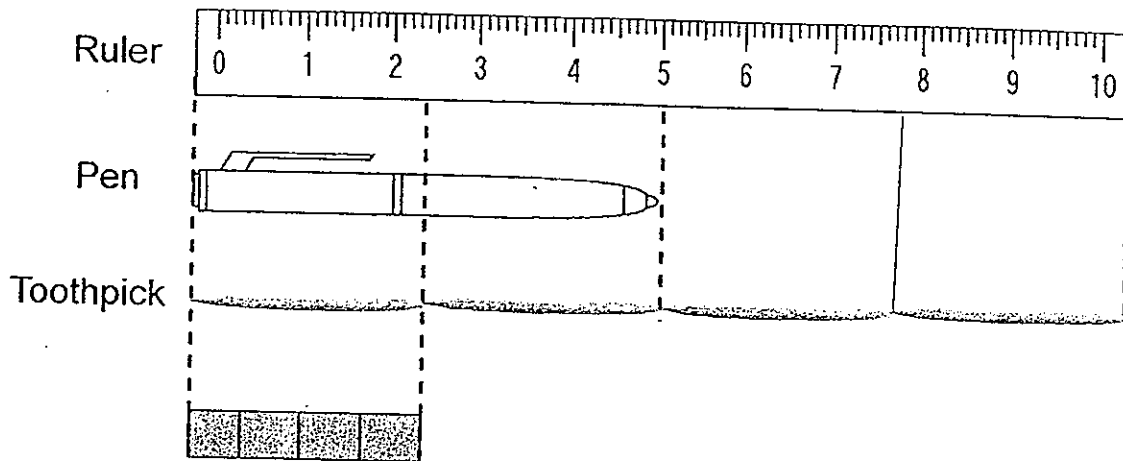


The picture graph below shows the favourite pets of a group of boys. Study it carefully and answer Questions 8 to 11.




- 8) _____ boys like cats.
- 9) The least popular pet is _____.
- 10) _____ fewer boys like fish than dogs.
- 11) The total number of boys who like birds and cats is _____.

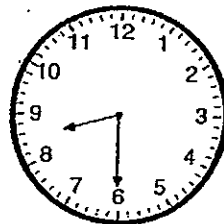
12) The total length of the ruler and the pen is _____  long.



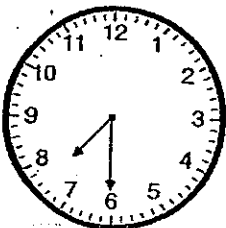
13) The following clocks show the time of activities that Lucy participates every Saturday morning. Write 1, 2, 3 and 4 in the boxes provided to show the correct order.




Watch cartoons



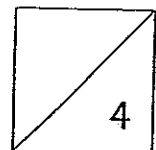
Go swimming



Eat breakfast




Read a book



The picture graph below shows the number of beads in a box.
Study it carefully and answer Questions 14 to 16.

Beads in a box



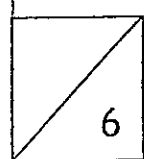
14) There are _____ more red beads than blue beads.

15) There are _____ beads altogether.


16) Sandy puts in some more green beads into the box.

There are 12 green beads now.

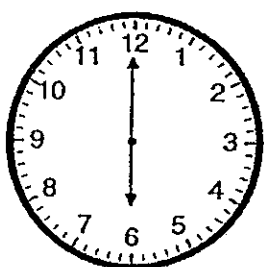
How many green beads does Sandy put in? _____



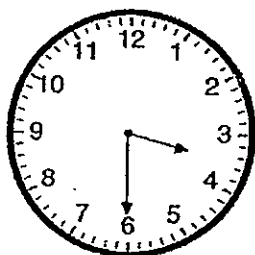
17) Match the clock to the correct time.



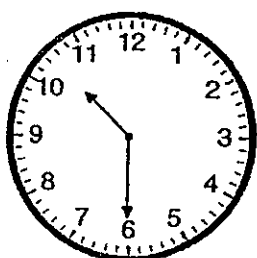
6 o'clock



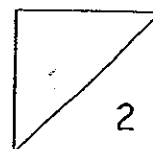
half past 3



half past 10



3 o'clock



Section C : 16 marks (4 marks each)

Do the following sums. Show your workings and statements clearly.

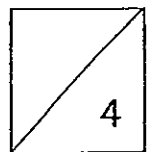
- 18) A toy soldier is 17 units tall.
A stool is 23 units tall.

(a) How much taller is the stool than the toy soldier?

The stool is _____ units taller than the toy soldier.

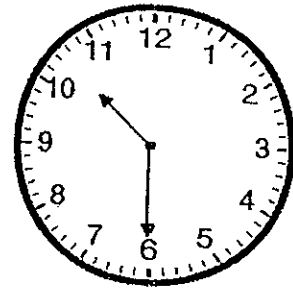
(b) Anson puts the toy soldier standing on the stool.
What is the total height now?

The total height is _____ units now.




19) Every Sunday, Alice has ballet lesson at 10 o'clock in the morning.

(a) Last Sunday, she overslept and woke up at the time shown on the clock. What time did she wake up?

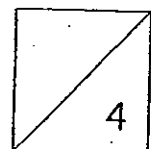


She woke up at _____.








(b) After the ballet lesson, Alice and her parents went to have lunch at the time shown on the clock. At what time did they have their lunch?



They had their lunch at _____.



20) The table below shows the animal show times at a bird park.

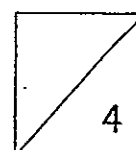
Animal Shows	Afternoon Showtime	
Birds of the Sky Show 		
Seal Show 		
Night Birds Show 		

- (a) Timmy wants to watch the Seal Show.
What time is the show?

The Seal Show is at _____

- (b) Timmy reaches the bird park at 4 o'clock in the afternoon.
Which two animal shows could he watch?

He could watch the _____
and _____



21) Mary had a ribbon which was 36 units long.
She cut 18 units of the ribbon to tie a present and cut 9 units of the
ribbon to give to her friend.

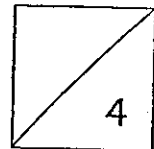
(a) How many units of ribbon did Mary cut in all?

She cut _____ units of ribbon in all.

(b) How many units of ribbon had she left?

She had _____ units of ribbon left.

— End of paper —



Have you checked
your work?



ANSWER SHEET

EXAM PAPER 2013

SCHOOL : RED SWASTIKA SCHOOL

SUBJECT : PRIMARY 1 MATHEMATICS

TERM : TEST 1 (REVIEW TEST 1)

Section A

Q1	Q2	Q3	Q4	Q5
4	1	3	3	1

Section B

Q6) C, D, B

Q7) half past 5/ 5:30

Q8) 9

Q9) fish

Q10) 6

Q11) 14

Q12) 24

Q13) 1 – eat breakfast

2 – Go swimming

3 – Read a book

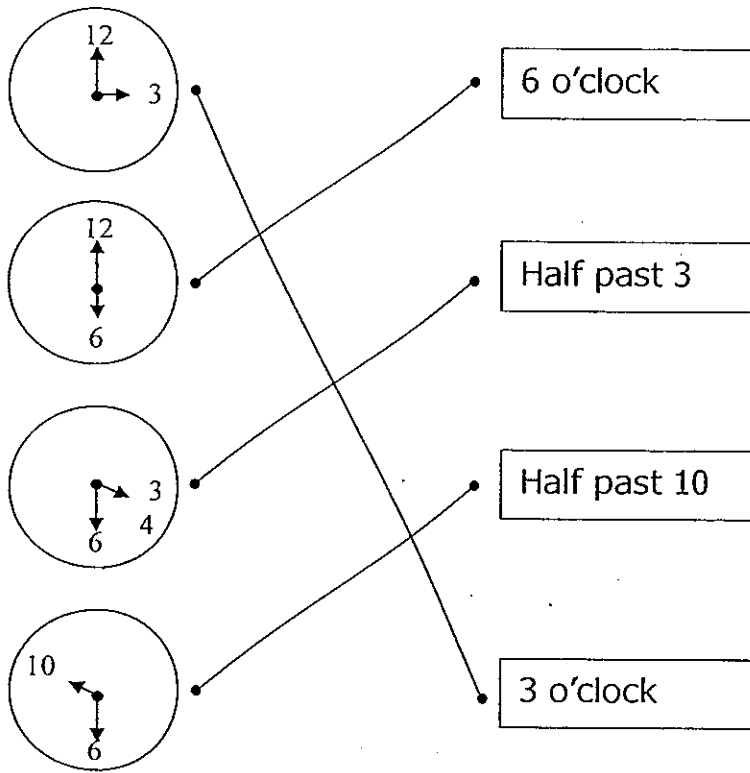
4 – Watch cartoons

Q14) 5

Q15) 20

Q16) 8

Q17)



Section C

Q18) a) $23 - 17 = 6$ units taller
b) $23 + 17 = 40$ units now

Q19) a) 10:30/ half past 10
b) 1 o'clock

Q20) a) half past 1
b) Birds of Sky show and Night Birds show

Q21) a) $18 + 9 = 27$ units of ribbon
b) $36 - 27 = 9$ units of ribbon