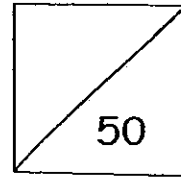




HENRY PARK PRIMARY SCHOOL
MATHEMATICS
2013 PRIMARY 2
TOPICAL REVIEW 2



Name: _____ ()

Parent's Signature _____

Class: Pr 2 _____

Date: _____

Section A: Multiple Choice Questions (5 x 2 marks = 10 marks)

Choose the correct answer and write its number in the brackets provided.

1. The length of a pupil's desk in a classroom is

about

(1) 5 cm

(2) 56 cm

(3) 5 m

(4) 56 m

()

2. $2 \div 2 =$

1) 1

2) 2

3) 0

4) 4


()

3. 9, , 15, 18, 21

- 1) 10
- 2) 11
- 3) 12
- 4) 13

()

4. Look at the diagram below.



The difference in mass between the bag of rice and the packet of sugar is .

- 1) 1 kg
- 2) 2 kg
- 3) 3 kg
- 4) 4 kg

()

5. $3 \times$ $= 24$

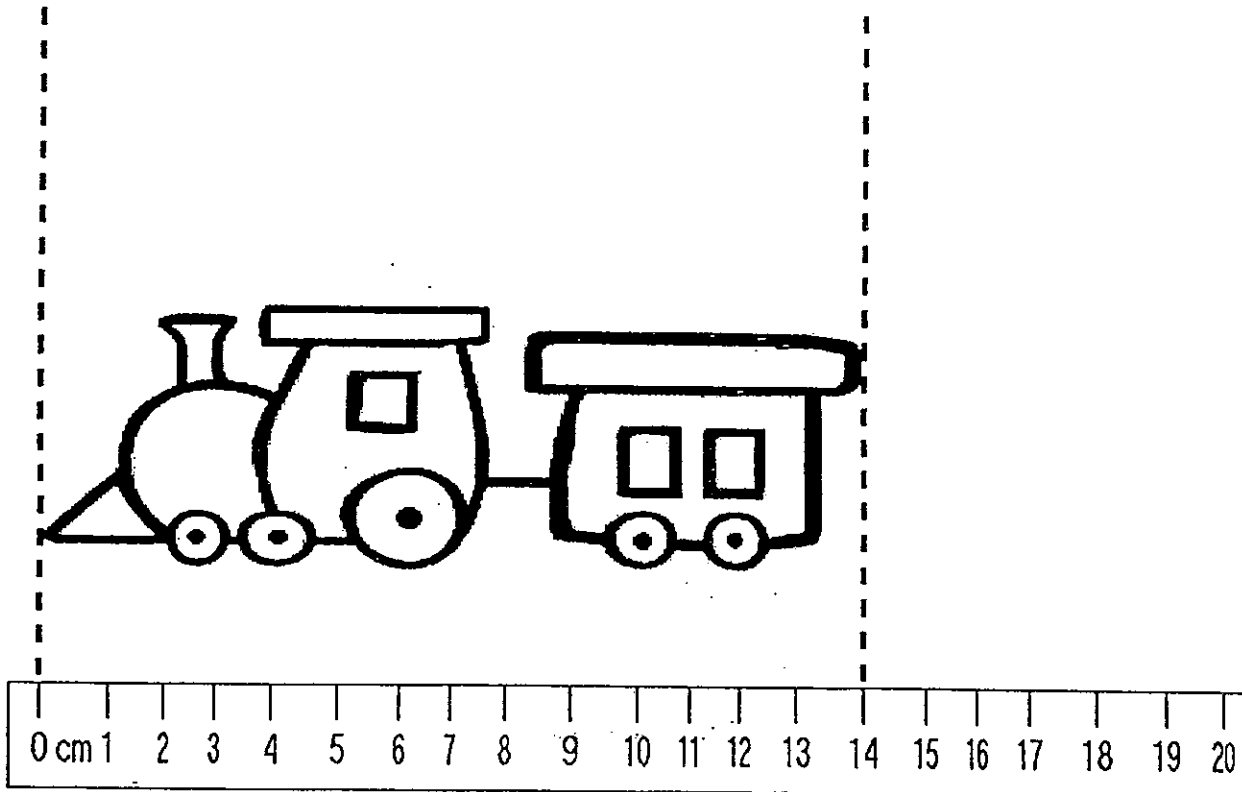
- 1) 7
- 2) 8
- 3) 9
- 4) 12

()

Section B: Open - Ended Questions (14 x 2 marks = 28 marks)

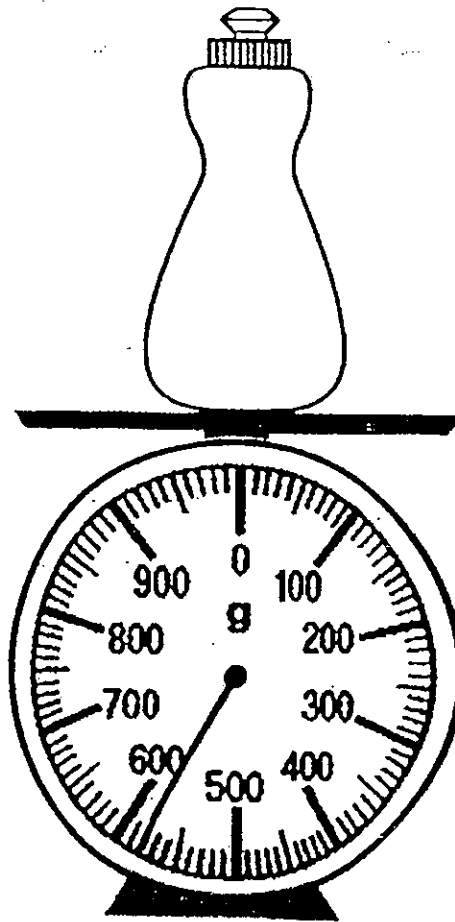
Fill in your answers in the blanks provided.

6. Look at the picture below.



The length of the toy train is cm.

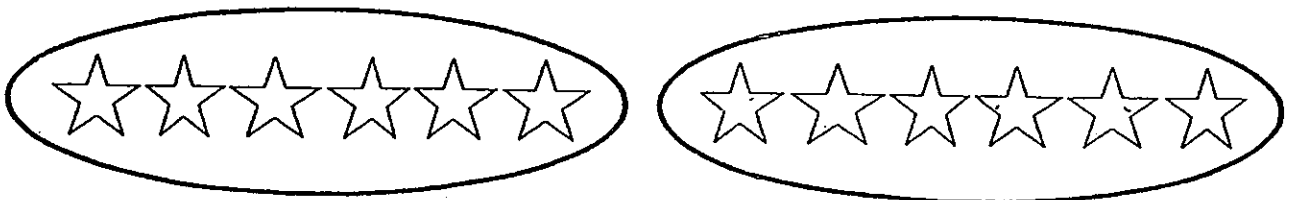
7. Look at the picture below.



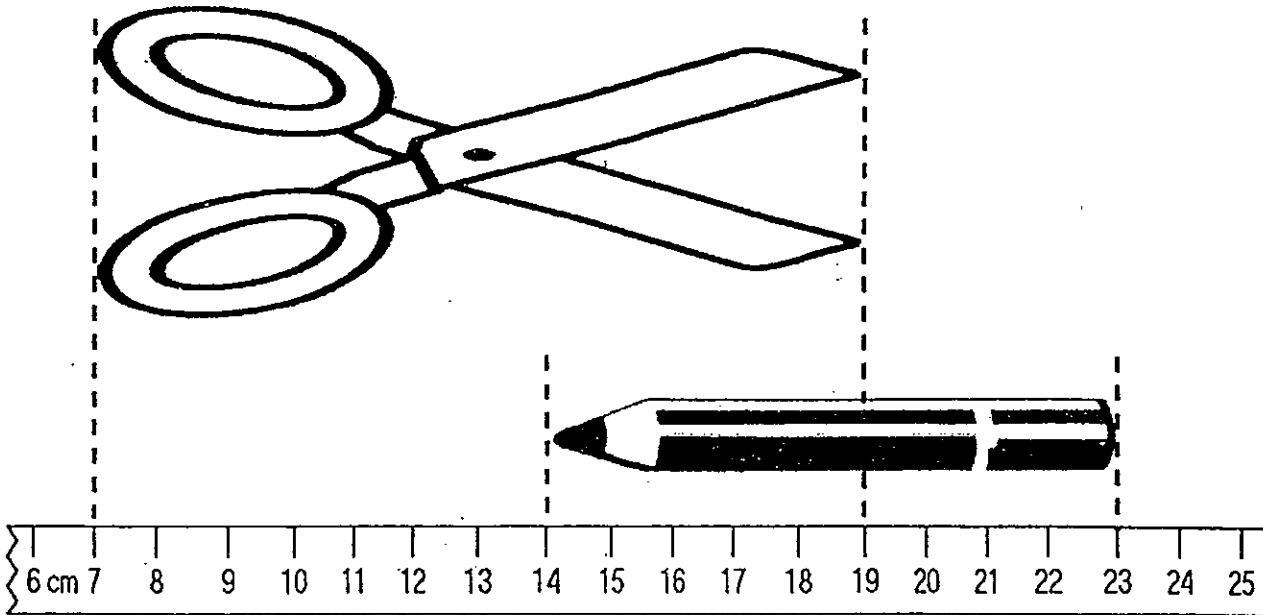
The mass of the bottle is g.

8. 5 twos is the same as groups of 2.

9. The picture below shows $2 \times$.




Look at the picture below and answer Questions 10 and 11.



10. The length of the pencil is cm.

11. The pair of scissors is cm longer than the pencil.

Look at the picture below and answer Questions 12 and 13.

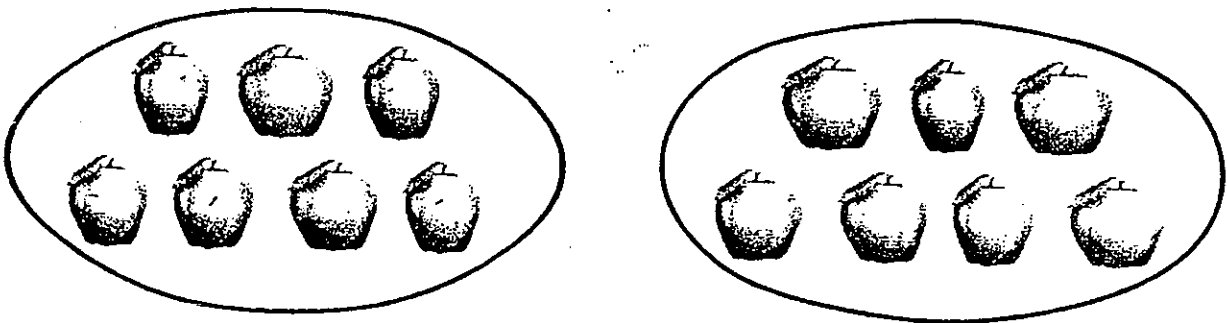


12. The lightest object is Object


13. The heaviest object is Object

14. 10×3 is more than 9×3 .

15. Write a division sentence for the picture below.

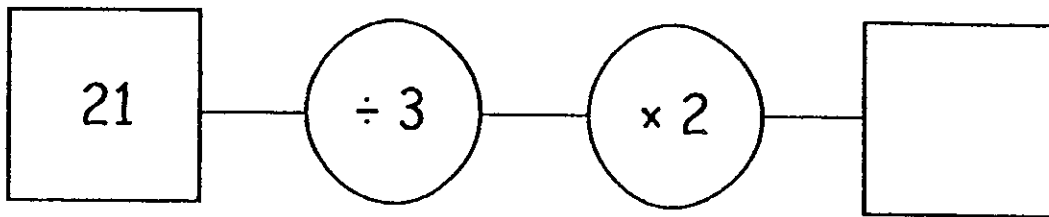


16. A bicycle has 2 wheels.

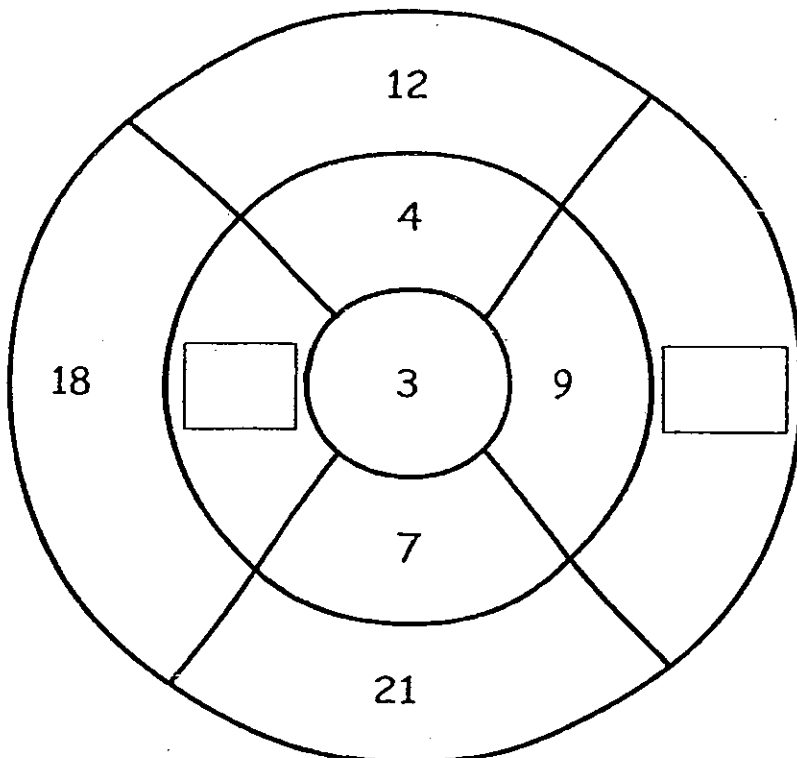


9 bicycles have wheels.

17. Write the correct number in the box.



18. Study the pattern. Fill in the blanks with the correct answer.



19.

$$2 \times \text{heart} = 6$$

$$5 \times \text{heart} = \boxed{}$$

Section C: Problem Solving Questions (3 x 4 marks = 12 marks)

Read each question carefully. Show your working, number and final word statements clearly in the spaces provided.

20. Father has a mass of 79 kg.
Mother has a mass of 55 kg.
What is the total mass of Father and Mother?

Working

-
21. There are 8 tables in a room.
John needs to put 2 chairs at each table.
How many chairs does he need altogether?

Working

22. Mary has 15 mangoes.
She puts 3 mangoes into each box.
How many boxes does she need?

Working

-END OF PAPER-

Setters: Mdm Norhayati and Mr Saiful

ANSWER SHEET

EXAM PAPER 2013

SCHOOL : HENRY PARK PRIMARY SCHOOL

SUBJECT : PRIMARY 2 MATHEMATICS

TERM : SA1 - TOPICAL REVIEW 2

Q1	Q2	Q3	Q4	Q5
2	1	3	2	2

Section B

Q6) 14

Q7) 580g

Q8) 5

Q9) 6

Q10) 9cm

Q11) 3cm

Q12) A

Q13) C

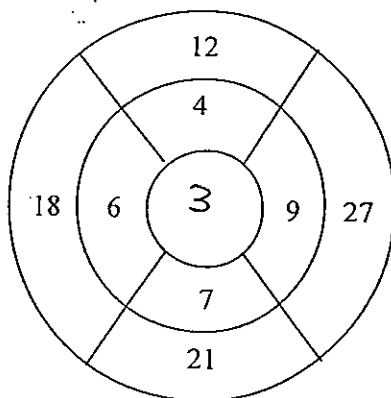
Q14) 3

Q15) $14 \div 2 = 7$

Q16) 18

Q17) 14

Q18)



Q19)15

Section C

Q20) $79 + 55 = 134\text{kg}$

Q21) $8 \times 2 = 16$ chairs

Q22) $15 \div 3 = 5$ boxes