



Pei Hwa Presbyterian Primary School

First Semestral Assessment – 2008

Mathematics

Primary 1

(Time: 1 hour 30 min)

Total	
	100

Name: _____ ()

Class: _____ (1)



Date: _____

Parent's Signature: _____

Section A : Multiple Choice Questions (10 x 2 = 20 marks)

Choose the correct answer and write its number(1,2,3 or 4) in the brackets provided.

1) How many stars are there in the 2 boxes below?

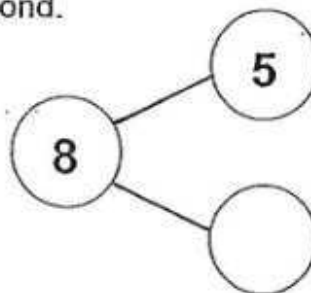


- (1) 7
- (2) 8
- (3) 9
- (4) 10



()

2) Complete the number bond.

- (1) 13
- (2) 2
- (3) 3
- (4) 4



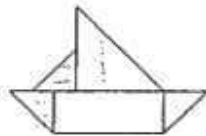
()

3)  +  = _____

- (1) 1
- (2) 5
- (3) 3
- (4) 4

()

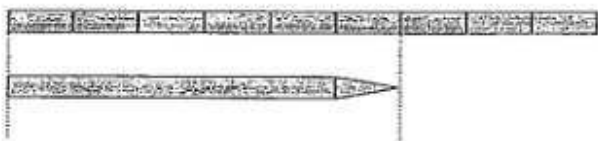
4) How many triangles are there in the figure below ?




- (1) 5
- (2) 2
- (3) 3
- (4) 4

()

5)



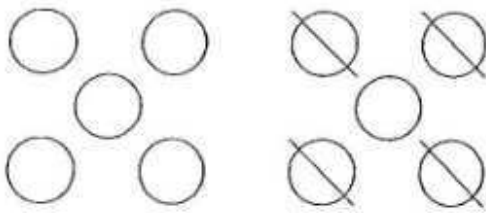
 is one unit

The length of the pencil is _____ units.

- (1) 7
- (2) 6
- (3) 5
- (4) 4

()

6) Complete the number sentence: $\square - \square = \square$



(1) $10 - 3 = 7$

(2) $10 - 4 = 6$

(3) $9 - 4 = 5$

(4) $9 - 5 = 4$

()

7) $2 + \square = 9$

(1) 6

(2) 7

(3) 8

(4) 11

()

8) 9 less than 17 is _____

(1) 26

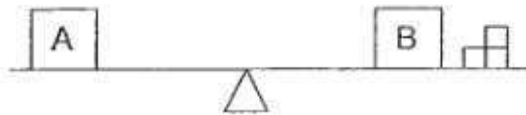
(2) 10

(3) 9

(4) 8

()

9)



is one unit

A is _____ B.

- (1) lighter than
- (2) heavier than
- (3) as heavy as
- (4) as light as

()

10) Which are the missing numbers in the boxes?

8, , 14, 17,

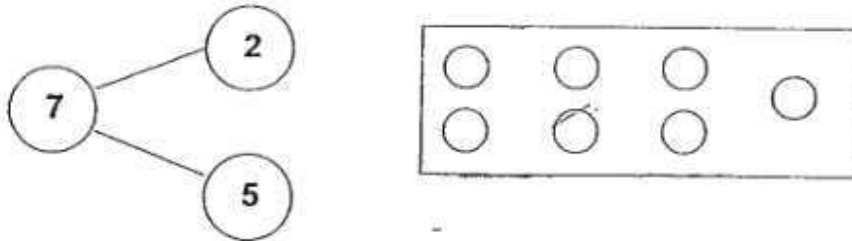
- (1) 10, 20
- (2) 11, 20
- (3) 10, 19
- (4) 11, 19

()

Section B : Write your answers in the blanks provided. (30 x 2 = 60marks)

11) Write 8 in words.

12) Draw a line in the box to show the number bond.



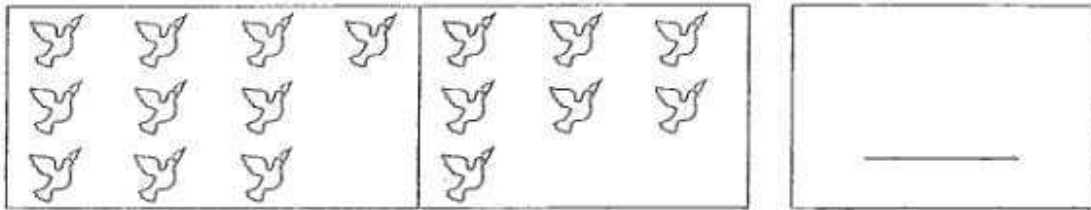
13) 2 and 6 make _____

14) Subtract 6 from 9.

The answer is _____

15) $10 + \underline{\quad\quad} = 18$

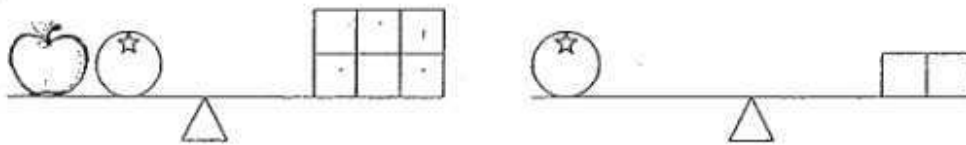
16) Count and write the correct number in the blank.



17) Complete the number pattern.

15 , 16 , , 18 , 19 , 20

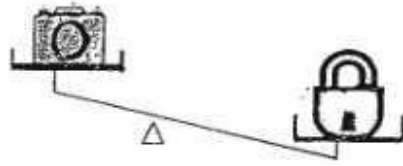
18)



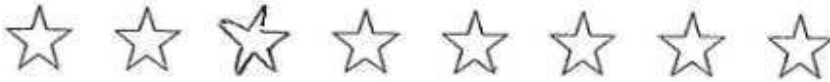
is one unit

The apple weighs units.

19) Colour the lighter object.



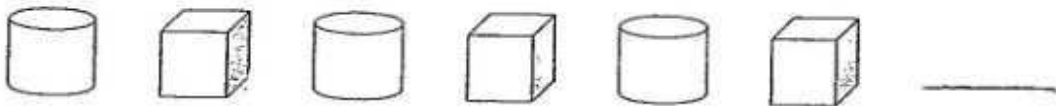
20) Colour the third star from the left.




21) Colour the three squares below.



22) What comes next ?





Circle the correct answer.



23) Circle the longest object.



24) Count the cats in the 2 boxes below. Fill in the missing number and circle the correct word in the sentence below them.



A has cats (more / (less) than B.

25) Circle two numbers that make 10.

1 4 6 5 8 7

26) There are 4 oranges.

There are 2 apples.

There are _____ fruit altogether.

27) Write a subtraction sentence using these numbers:

9, 5, 4

$$\square \bigcirc \square = \square$$

28) Ben is 3rd from the left and 4th from the right.

How many children are in the line?

Answer : _____

29) **Cross out** the set that does not belong.

$$\boxed{4 + 4}$$

$$\boxed{17 - 5}$$

$$\boxed{6 + 2}$$

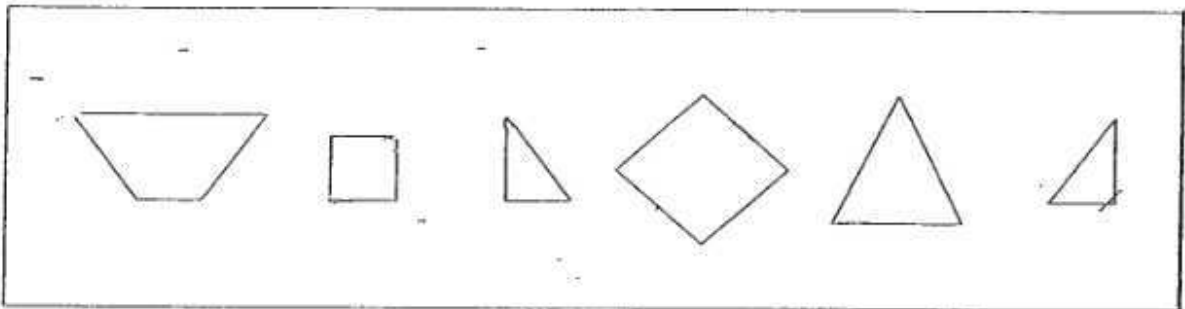
$$\boxed{18 - 10}$$

30) Arrange these numbers from the greatest to the smallest.

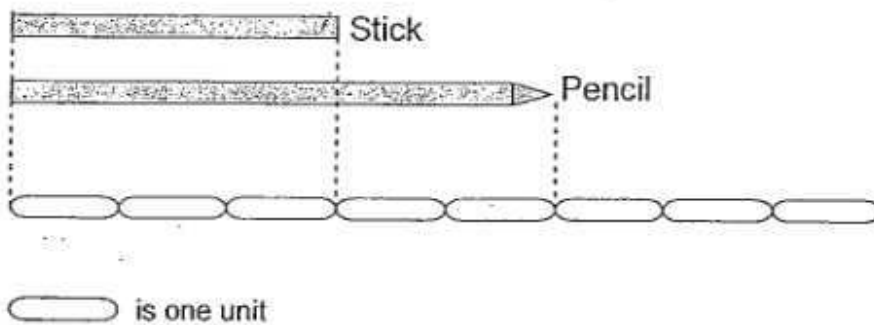
17 12 13 18 20

greatest

31) Circle 3 cut-out pieces which can be used to form a rectangle.

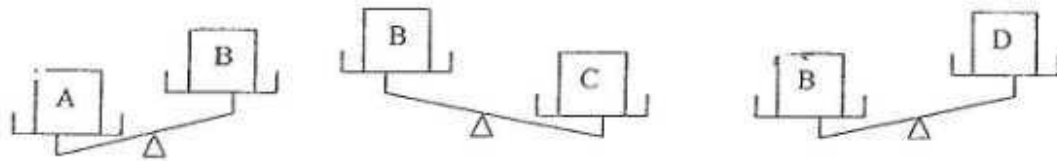


32)



The pencil is _____ units longer than the stick.

33)



Box _____ is the lightest.

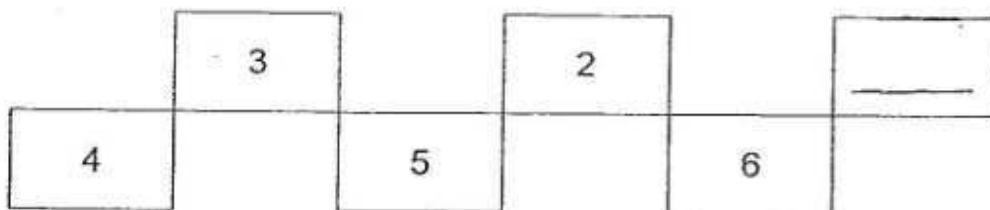
34) May gives away 5 stickers.

She has 15 stickers left.

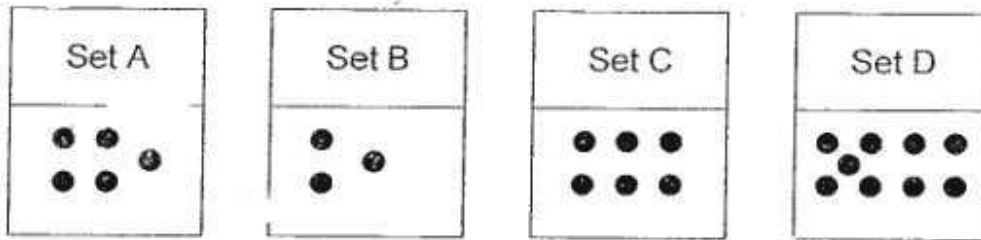
How many stickers did May have at first?

Answer : _____

35) Complete the number pattern. Write the missing number in the blank below.



36)



Set _____ has 6 more beads than Set _____.

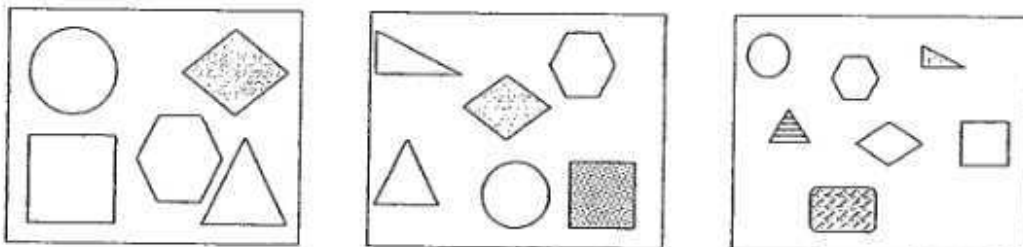
37)

$2 + 9$ is _____ less than $20 - 7$.

38) How are the shapes grouped?

They are grouped by (~~size~~, shape, number).

(Underline the correct answer.)



- 39) Raj is taller than Mark but shorter than Ali.
Ali is shorter than Luke.
Who is the tallest?

Answer : _____

- 40) Mrs. Tan needs 14 eggs to bake a cake.
She has 8 eggs.

How many more eggs does she need to bake the cake?

Answer : _____

Section C (5 x 4 = 20 marks)

Show your working clearly in the space provided below each question .

41) Mrs. Lee bakes 10 cookies.

Ah Mei eats 3 cookies.

How many cookies are left?

A visual equation for subtraction: a square, a circle, a square, an equals sign, and a square.

There are _____ cookies left.

Working

42) There are 8 marbles in a box.

John puts 1 more marble into the box.

How many marbles are there in the box now?

A visual equation for addition: a square, a circle, a square, an equals sign, and a square.

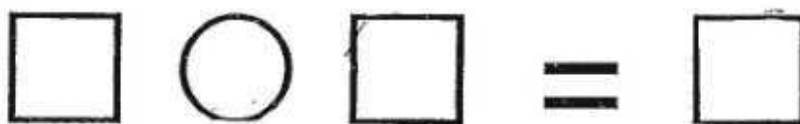
There are _____ marbles in the box now.

Working

43) Tang has 15 stamps.

Ling has 7 stamps.

How many more stamps does Tang have than Ling?



Tang has _____ more stamps than Ling.

44) There are 7 balls in the box.

Some balls are green and some balls are white.

There is 1 fewer green ball than white ball.

How many white balls are there?

(You may draw or write number sentence as your working.)



There are _____ white balls

45) Sumei has 6 sweets.

John has 3 more sweets than Sumei.

Ann has 4 fewer sweets than John.

How many sweets does Ann have?



Ann has _____ sweets.

End of Paper

☺ Have you checked your work?



ANSWER SHEET

EXAM PAPER 2008

SCHOOL : PEI HWA PRIMARY SCHOOL

SUBJECT : PRIMARY 1 MATHEMATICS

TERM : SA 1

Q1	Q2	Q3	Q4	Q5	Q6	Q7	Q8	Q9	Q10
3	3	2	4	2	2	2	4	2	2

11) eight



13) 8

14) 3

15) 8

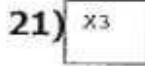
16) 17

17) 17

18) 4 units

19) bag

20) ☆☆☆★☆☆☆☆



23)

24) A has 2 cat less than B

25) 4, 6

26) 6 fruits

27) $9-5=4$

28) 6

29) $17-5$

30) 20, 18, 17, 13, 12

31)

32) 2

33) D

34) $15+5=20$

35) 1

36) D, B

37) 2

38) size

39) Luke

40) $14-8=6$

41) $10-3=7$

There are 7 cookies left.

42) $8+1=9$

There are 9 marble in the box now.

43) $15-7=8$

Tang has 8 more stamps than Ling.

44) $7-3=4$

There are 4 white balls.

45) $3+6=9$

$9-4=5$

Ann has 5 sweets.