



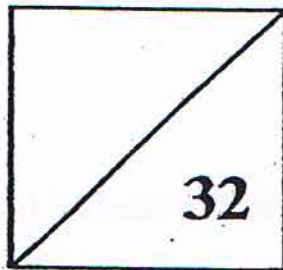
Established since 1930

RULANG PRIMARY SCHOOL

A Gallery of Scholars, A Vibrant Community of Wholesome Individuals

Name : _____ ()
Level : Primary One
Class : Primary 1 _____
Date : 4 May 2011
Setter : Mr Surajkumar Natchinarkinian

SEMESTRAL REVIEW 1 MATHEMATICS PART 1



TOTAL TIME: 30 minutes

16 questions

32 marks

- DO NOT OPEN THIS BOOKLET UNTIL YOU ARE TOLD TO DO SO.
- READ ALL THE INSTRUCTIONS CAREFULLY.
- ANSWER ALL THE QUESTIONS.

Questions 1 to 16 carry 2 marks each. For each question, four options are given. One of these is the correct answer. Choose the correct answer and write its number (1, 2, 3 or 4) in the bracket provided. (32 marks)

1. How many triangles are there in the box below?

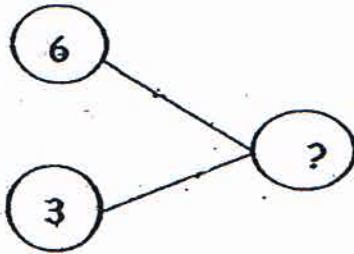


- (1) five
- (3) seven

- (2) six
- (4) eight

()

2.



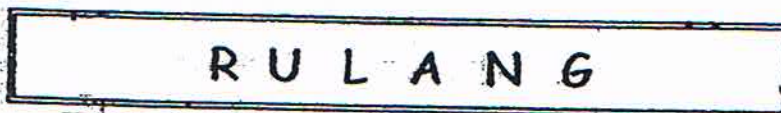
What is the missing number in the number bond above?

- (1) 10
- (3) 3

- (2) 9
- (4) 8

()

3. Which letter is 4th from the left?



- (1) A
- (3) U

- (2) L
- (4) N

()

4. There are 6 plates. Each plate has 2 cookies on it.

How many cookies are there in all?

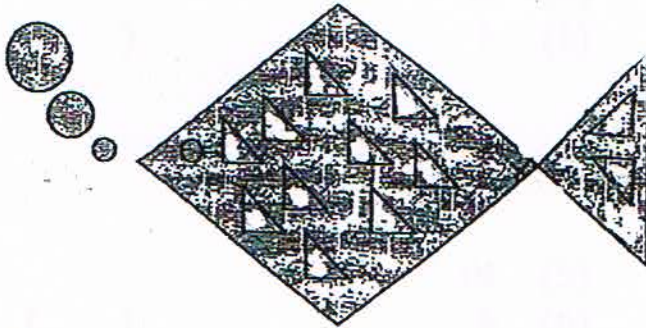


- (1) 8
- (3) 12

- (2) 11
- (4) 13

()

5.



How many triangles are there in the above figure?

- (1) 10
- (3) 13

- (2) 12
- (4) 14

()

6. 2 more than 4 is .

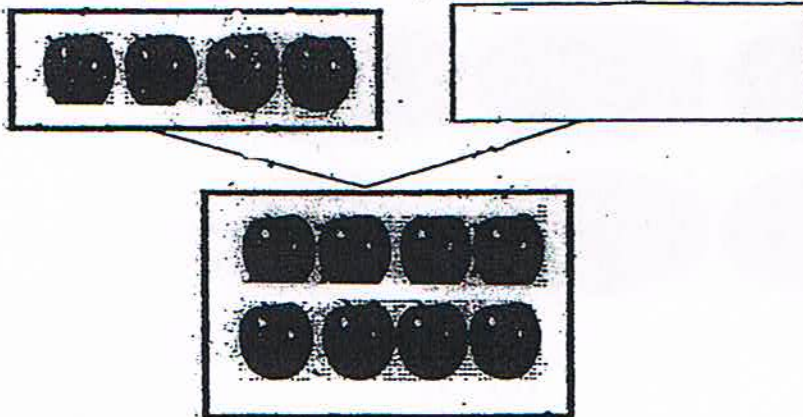
What is the missing number in the box above?

- (1) 5
- (3) 3

- (2) 2
- (4) 6

()

7. What is the missing number in the box below?



- (1) 12
- (3) 5

- (2) 11
- (4) 4

()

8. What is 3 more than 7?

- (1) 11
- (3) 5

- (2) 10
- (4) 4

()

9.



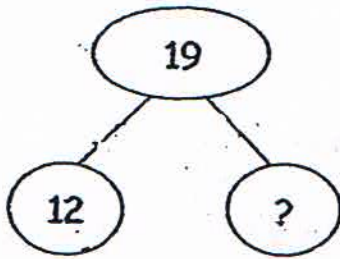
Tom has to draw 10 stars in the box. He has drawn 6 stars.
How many more stars must he draw in the box?

- (1) 7
- (3) 5

- (2) 6
- (4) 4

()

10.



What is the missing number in the number bond above?

(1) 6


(2) 7

(3) 11

(4) 20

()

11. How many squares are there in this figure?



(1) 6

(2) 7

(3) 8

(4) 9

()

12.

$$\boxed{?} - 3 = 5$$

What is the missing number in the box above?

(1) 8

(2) 7

(3) 3

(4) 4

()

13. @ @ @ @ @ @ @

Which number sentence is shown above?

(1) $7 - 2 = 5$

(2) $7 + 2 = 9$

(3) $5 - 2 = 3$

(4) $3 + 2 = 5$

()

14. Matthew has 17 cans. Luke has 9 cans. How many more cans does Matthew have than Luke?

(1) 7


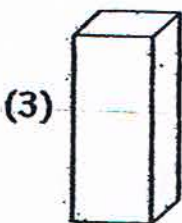
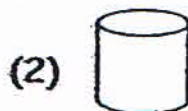
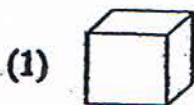
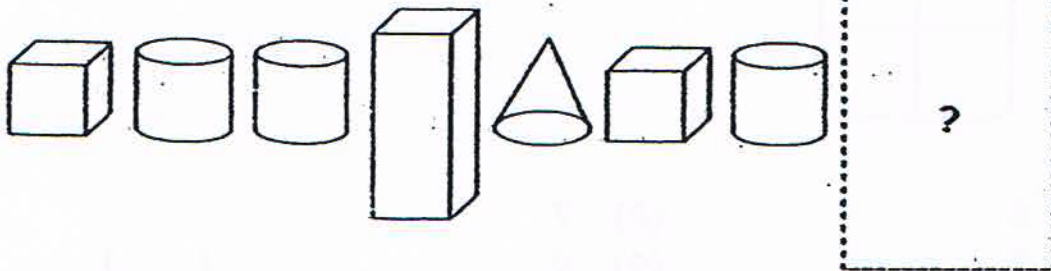
(2) 8

(3) 12

(4) 16

()

15. Study the following pattern. What comes next?



()

16. Ali and Ben have a total of 12 stickers. If Ben has 3 stickers, how many stickers does Ali have?


- (1) 9
(3) 11

- (2) 10
(4) 15

()

– End of Paper –





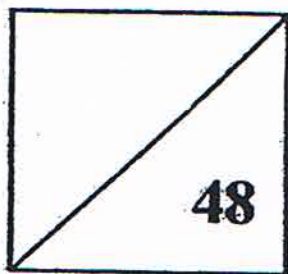
Established since 1930

RULANG PRIMARY SCHOOL

A Gallery of Scholars, A Vibrant Community of Wholesome Individuals

Name : _____ ()
Level : Primary One
Class : Primary 1 _____
Date : 12 May 2011
Setter : Mr Surajkumar Natchinarkinian

SEMESTRAL REVIEW 1 MATHEMATICS PART 2



TOTAL TIME: 45 minutes

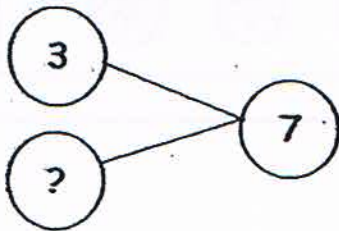
21 questions

48 marks

- **DO NOT OPEN THIS BOOKLET UNTIL YOU ARE TOLD TO DO SO.**
- **READ ALL THE INSTRUCTIONS CAREFULLY.**
- **ANSWER ALL THE QUESTIONS.**

Questions 1 to 16 carry 2 marks each. For each of the questions, write the correct answer in the box provided. (32 marks)

1. Study the number bond below.
What is the missing number?




2. Study the number sentence carefully.



$$19 - \text{😊} = 6$$

What is the value of 😊?

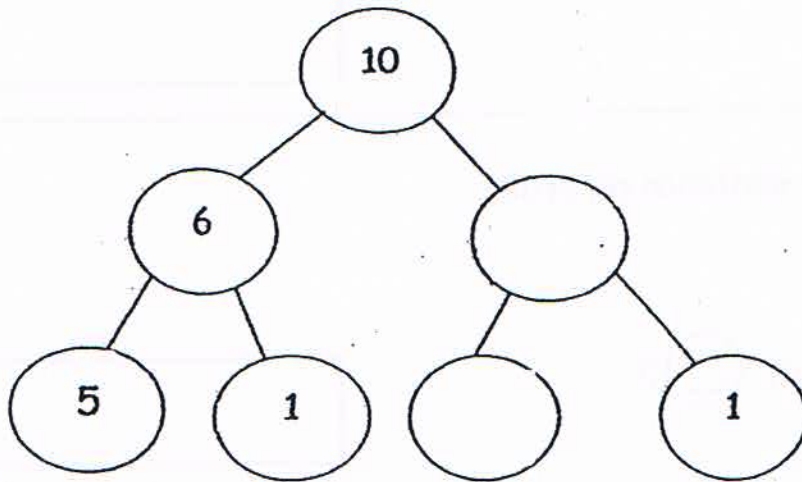
3. Name the shaded shape in the diagram below.



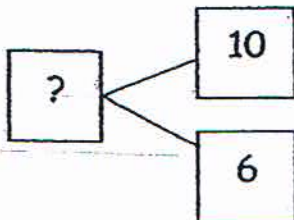
4. Tick (✓) the set that has more objects.

5. Fill in the missing numbers.



6. What is the missing number in the box below?




7. Circle the second pair of scissors from your right.

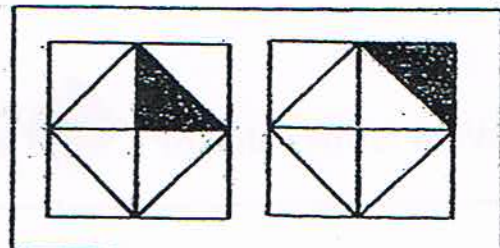


8. Gabriel has 14 toy guns. He has 8 more toy guns than Joel. How many toy guns do Gabriel and Joel have altogether?

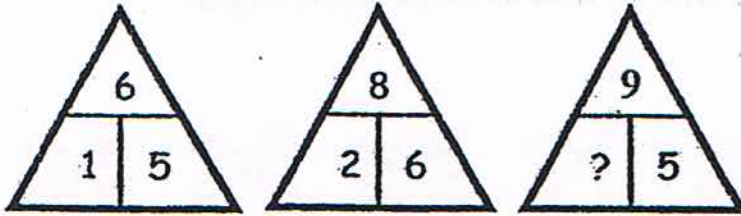
9. Look at the following pattern.



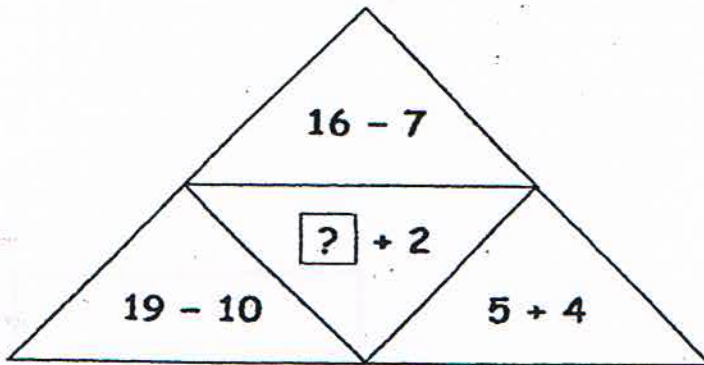
What comes next? Circle the correct shape below to continue the pattern.



10. Study the diagrams below carefully. What is the missing number?




11. What is the missing number in the box?

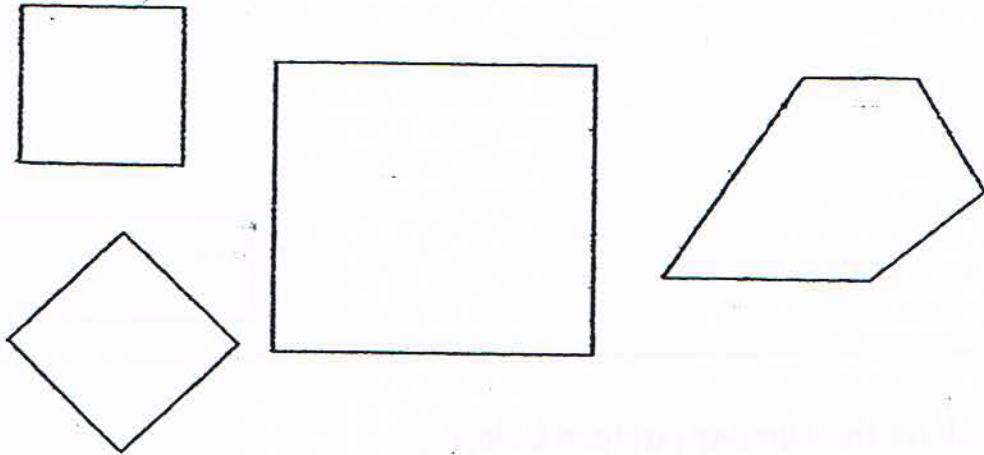


12.




What is the value of  ?

13. The figures below are to be grouped according to their shapes. Cross out the one that does not belong.



-
14. Mother has baked some cream puffs and durian puffs. She wants to put 8 puffs into a box. In how many ways can she put the puffs in order to have at least one of each kind of puffs in the box?



15. I am a 2-digit number. The number in my tens place is 4 less than 5.
The number in my ones place is 2 more than 4. What number am I?

16. Look at the number pattern below:

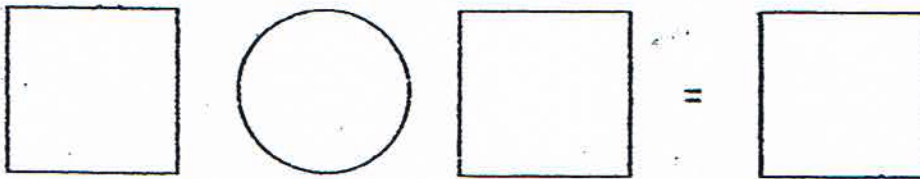
17, 16, 15, 14, , 12

What is the missing number in the box above?

Questions 17 to 20 carry 3 marks each and Question 21 carries 4 marks. Answer each question in the space provided. Show your working clearly as marks will be awarded for relevant statements and correct answers.

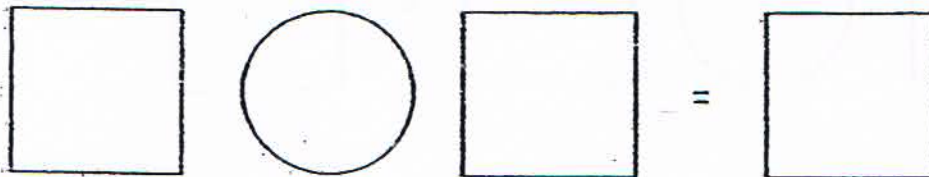
(16 marks)

17. Andy has 3 stickers. Sam has 5 more stickers than Andy. How many stickers does Sam have?




Sam has _____

18. Jack bought 7 paper clips. He lost 5 paper clips. How many paper clips had he left?



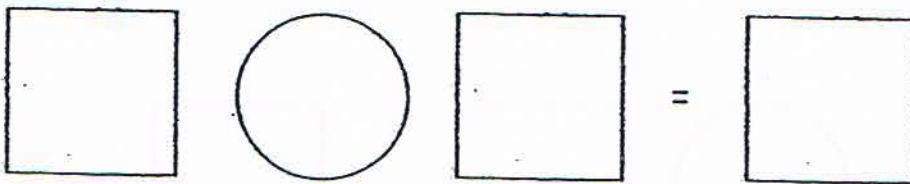
Jack had _____ left.

19. Tom bought 6 bananas, 4 oranges and 5 apples. How many fruits did he buy?



He bought _____

20. Steven gave 6 marbles to Peter and has 13 marbles left. How many marbles did Steven have at first?



Steven had _____ at first.

21. Chloe is queuing to buy food during recess. She is 7th from the front and 8th from the back. How many children are there in the queue?

There are _____ in the queue.

End-of-Paper



ANSWER SHEET

EXAM PAPER 2011

**SCHOOL : RULANG
SUBJECT : PRIMARY 1 MATHEMATICS**

TERM : SA1

Q1	Q2	Q3	Q4	Q5	Q6	Q7	Q8	Q9	Q10	Q11	Q12	Q13	Q14	Q15	Q16
1	2	1	3	3	4	4	2	4	2	3	1	1	2	2	1

Part II

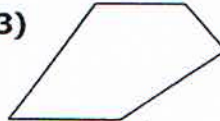
1)4 2)13 3)rectangle 4)

	✓

5)4, 3 6)16 7)  8)20



10)4 11)7 12)15 13)



14)7 15)16 16)13

17) $3 + 5 = 8$
Sam has 8 stickers.

18) $7 - 5 = 2$
Jack had 2 paper clips left.

19) $6 + 4 + 5 = 15$
He bought 15 fruits.

20) $13 + 6 = 19$
Steven had 19 marbles at first.

21) There are 14 children in the queue.