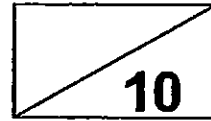


SINGAPORE CHINESE GIRLS SCHOOL (PRIMARY)
PRIMARY 1 MATHEMATICS
TOPICAL TEST
TIME AND MONEY

Name _____ ()

Class Primary 1 SY

Date _____



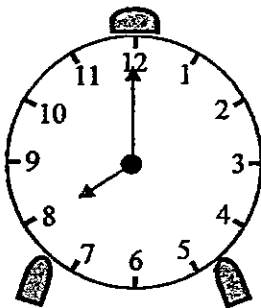
Parent's Signature

Section A

For each question four options are given

Choose the correct answer and write its number in the brackets provided

(1)



Ms Wong went to work at _____

- 1) half past 7
- 2) 7 o'clock
- 3) half past 8
- 4) 8 o'clock

()



(2) The total value of the notes shown above is _____

- 1) \$10
- 2) \$55
- 3) \$57
- 4) \$60

()

(3)



Which of the following has the same value as the coin shown above?




Section B

Read the questions carefully


(4) Colour the correct amount of money

(a)




Teddy Bear

\$65




(b)




Eraser

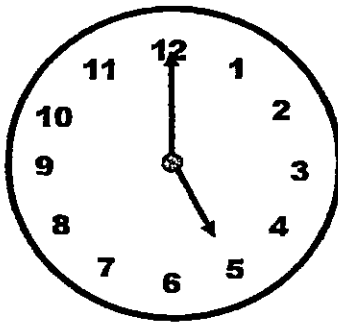
70¢



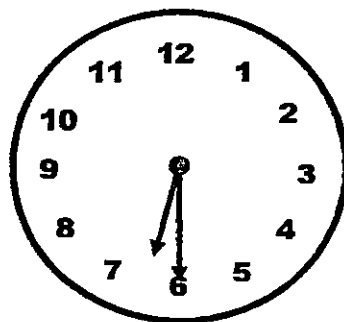
(5)



Joy



Wendy




Helen

Joy Wendy and Helen woke up at different times on Friday morning

_____ woke up the **earliest** for school

(6)




sandwich

\$4



cake

\$7



pizza

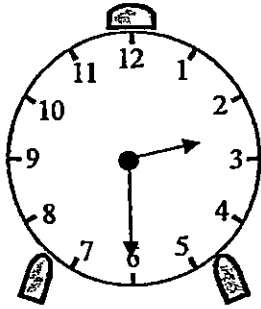
\$5

Janice has \$10

She can buy a _____ and

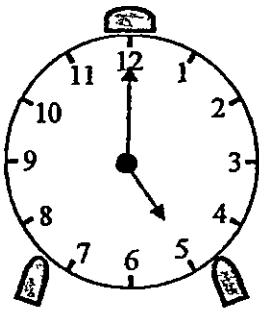
a _____

(7)



Desiree does her homework at _____

(8)



Joe cycles at _____

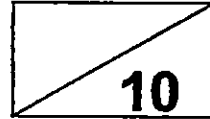
Check your work

SINGAPORE CHINESE GIRLS SCHOOL (PRIMARY)
PRIMARY 1 MATHEMATICS
TOPICAL TEST
MULTIPLICATION AND DIVISION

Name _____

Class Primary 1 SY

Date _____





Section A

Read the questions carefully

Write the correct answers in the space provided

(1)



Write a *multiplication* equation for the pictures above


$$\square \circ \square = \square$$

(2) Circle groups of 4



There are _____ groups of 4

(3) Put 12 oranges onto 2 trees



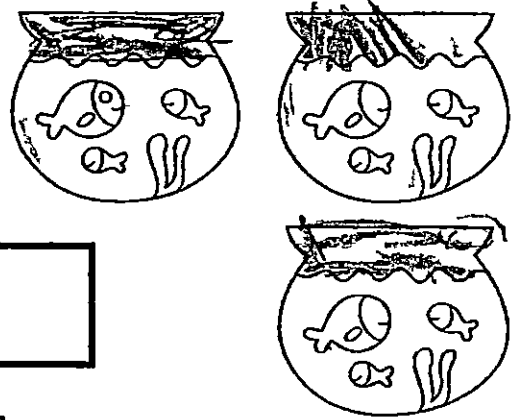
There are _____ oranges on each tree

Section B

Read the questions carefully

Write the correct answers in the space provided

- (4) There are 3 fishbowls
There are 3 fish in each fishbowl
How many fish are there?



$$\square \circ \square = \square$$

There are _____ fish altogether


- (5) Faith read 3 books in a month
How many books did she read in 5 months?

Months	Jan	Feb	Mar	Apr	May
Books					

$$\square \circ \square = \square$$

She read _____ books in 5 months

- (6) Jeremy has 10 toys His two brothers have 2 toys
They share the toys equally between themselves
How many toys will each boy get?



Each boy will get _____ toys

Check your work

SINGAPORE CHINESE GIRLS SCHOOL (PRIMARY)
PRIMARY 1 MATHEMATICS
TOPICAL TEST
NUMBER BONDS

Name _____

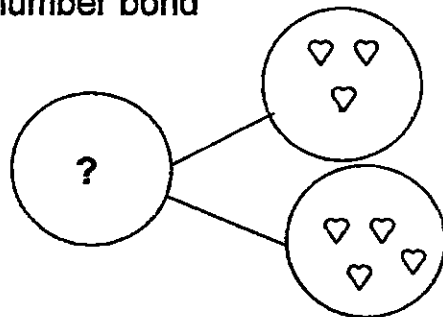
Date _____

Class Primary 1 SY



For each question four options are given
Choose the correct answer and write its number in the brackets provided

1 Study the number bond



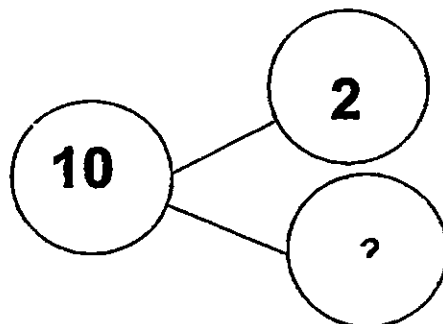
What is the missing number?

- 1) 1
- 3) 3

- 2) 6
- 4) 7

()

2 Study the number bond



What is the missing number?

- 1) 12
- 3) 7

- 2) 6
- 4) 8

()

3 _____ and 1 make 6

- 1) 7
- 3) 3

- 2) 5
- 4) 4

()

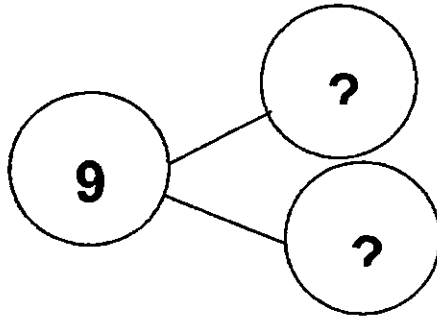
4 3 and _____ make 3

- 1) 0
- 3) 3

- 2) 6
- 4) 4

()

5 What are the missing numbers in the number bond?

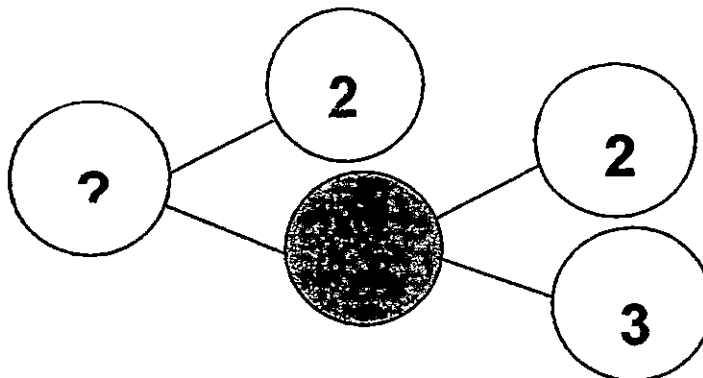


- 1) 1 and 7
- 3) 4 and 4

- 2) 2 and 5
- 4) 3 and 6

()

6 What is the missing number?



- 1) 8
- 3) 7


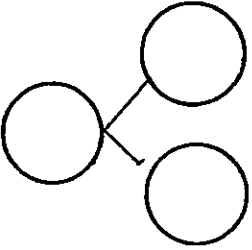
- 2) 5
- 4) 4

()

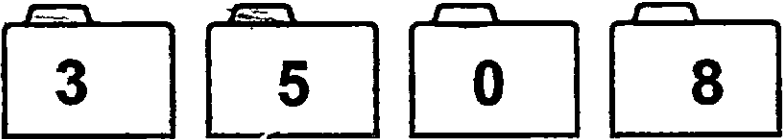
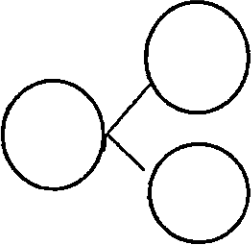
Read the questions carefully

Write the correct answers in the space provided


7 **Colour two items** that **make 10** Then complete the number bond

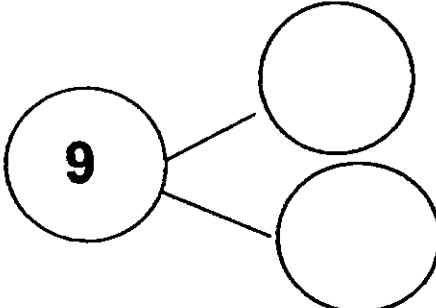
	
--	---

8 **Colour two items** that **make 8** Then complete the number bond

	
---	--

9 **Draw more stars** to **make 9**
Then complete the number bond below


--



SINGAPORE CHINESE GIRLS SCHOOL (PRIMARY)
PRIMARY 1 MATHEMATICS
TOPICAL TEST
SUBTRACTION WITHIN 10

Name _____ () Date _____

Class Primary 1 SY



Parent's Signature

For each question four options are given
Choose the correct answer and write its number in the brackets
provided

1 _____ = 10 - 1

What is the missing number?

1) 11

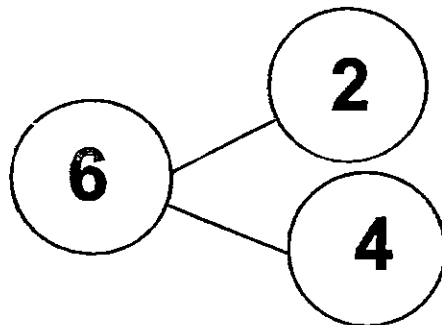
2) 9

3) 8

4) 7

()

2 Study the number bond



Which of the following number sentence is not correct?

1) $2 + 4 = 6$

2) $4 + 2 = 6$

3) $4 - 2 = 6$

4) $6 - 4 = 2$

()

3 2 less than 9 is _____

What is the missing number?

1) 11

2) 8

3) 7

4) 6

()

4 $8 - \underline{\hspace{2cm}} = 2$

1) 10

2) 6

3) 5

4) 4

()

5 $7 = 4 + \underline{\hspace{2cm}}$

What is the missing number?

1) 11

2) 2

3) 3


4) 4

()

Read the questions carefully


Write the correct answers in the space provided

6 Write a subtraction sentence for the pictures below

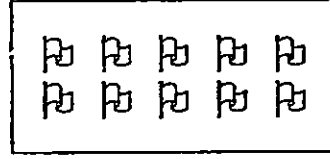


7 Match


$$7 - 4$$



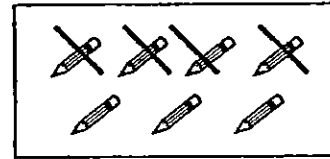
$$8 - 3$$




$$10 - 0$$



$$4 - 1$$



8



$$\square \bigcirc \square = \square$$


There are _____ more women than men

SINGAPORE CHINESE GIRLS SCHOOL (PRIMARY)
PRIMARY 1 MATHEMATICS
PERFORMANCE TASK – NUMBERS TO 10

Name _____ ()

Date _____

Class Primary 1 SY



Look at the things displayed in front of you
Then answer all the questions below

Parent's Signature

- 1 There are _____ red cubes
- 2 There are _____ blue cubes
- 3 There are _____ yellow cubes
- 4 There are _____ green cubes
- 5 There are _____ black cubes
- 6 There are _____ white cubes
- 7 There are _____ **more** red cubes than blue cubes
- 8 There are _____ **fewer** yellow cubes than green cubes
- 9 There are _____ black cubes and white cubes **altogether**
- 10 There are _____ blue cubes and yellow cubes **altogether**



EXAM PAPER 2015

LEVEL PRIMARY 1

SCHOOL SINGAPORE CHINESE GIRLS SCHOOL MATH

TERM T OPICAL TEST

DIVISION

(TIME AND MONEY)

Q1	Q2	Q3
4	3	4



SECTION B


Q4 a b) SEE PICTURE

Q5 Wendy woke up the earliest for school

Q6 She can buy a sandwich and a pizza

Q7 Desiree does her homework at half past 2

Q8 Joe cycles at 5 o'clock.




(MULTIPLICATION AND DIVISION)

SECTION A

Q1 $10 \div 2 = 5$

Q2 3. SEE PICTURE




SECTION B

Q4 $9 \div 3 = 3$

Q5 $15 \div 3 = 5$


Q6 $4 \rightarrow 10 + 2 = 12$ $12 - 3 = 9$




(NUMBER BOND)

Q1	Q2	Q3	Q4	Q5	Q6
4	4	2	1	4	3

Q7 $10 < 9 + 1$ Q8 $8 < 5 + 3$ Q9 $9 < 5 + 4$



PAGE 1



$$\begin{array}{r} 10 \\ - 1 \\ \hline 9 \end{array}$$

$$\begin{array}{r} 5 \\ - 3 \\ \hline 2 \end{array}$$

$$\begin{array}{r} 9 \\ - 4 \\ \hline 5 \end{array}$$



(ADDITION WITHIN 10)

Q1	Q2	Q3	Q4	Q5
4	2	3	3	2

Q6 $3+5=8$ Q7 $4+3=7$

Q8 $4+5 \times$

Q9 $6+1=7$

(SUBTRACTION WITHIN 10)

Q1	Q2	Q3	Q4	Q5
2	3	3	2	3

Q6 $2 \rightarrow 5-3=2$

Q7 SEE PICTURE

Q8 $1 \rightarrow 6-5=1$

M h

$7 - 4$		☆ ☆ ☆ ☆ ☆
$8 - 3$		~ ~ ~ ~
$10 - 0$		⊗ ⊗ ⊗ ⊗ ⊗ ~ ⊗ ~
$4 - 1$		✂ ✂ ✂ ✂ ✂ ✂ ✂ ✂ ✂

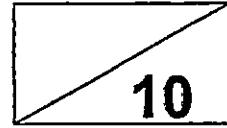
THE END

SINGAPORE CHINESE GIRLS SCHOOL (PRIMARY)
PRIMARY 1 MATHEMATICS
PERFORMANCE TASK – NUMBERS TO 10

Name _____

Date _____

Class Primary 1



Look at the things displayed in front of you
Then answer all the questions below

Parent's Signature _____

- 1 There are 5 red cubes
- 2 There are 2 blue cubes
- 3 There are 6 yellow cubes
- 4 There are 8 green cubes
- 5 There are 3 black cubes
- 6 There are 4 white cubes
- 7 There are 3 **more** red cubes than blue cubes
- 8 There are 2 **fewer** yellow cubes than green cubes
- 9 There are 7 black cubes and white cubes **altogether**
- 10 There are 8 blue cubes and yellow cubes **altogether**

END