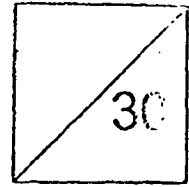


Al Tong School
Primary One Mathematics
Term 4 Mini Test 1 – 2018



Name: _____ ()

Marks: _____

Class: P1 _____

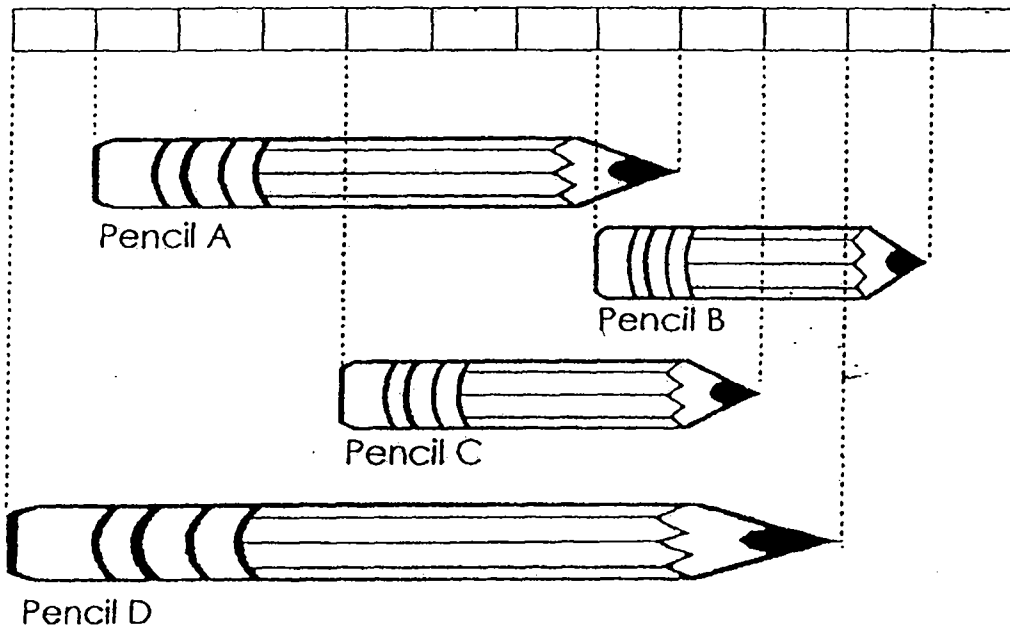
Date: _____

Duration: 40 minutes

Parent's Signature: _____

Section A (20 marks)

- Look at the picture. Fill in the blanks with the correct letters.
(2 marks)



(a) Pencil _____ is the longest.

(b) Pencil _____ is longer than Pencil B but shorter than Pencil A.


2. Look at the picture. Fill in the blanks. (2 marks)



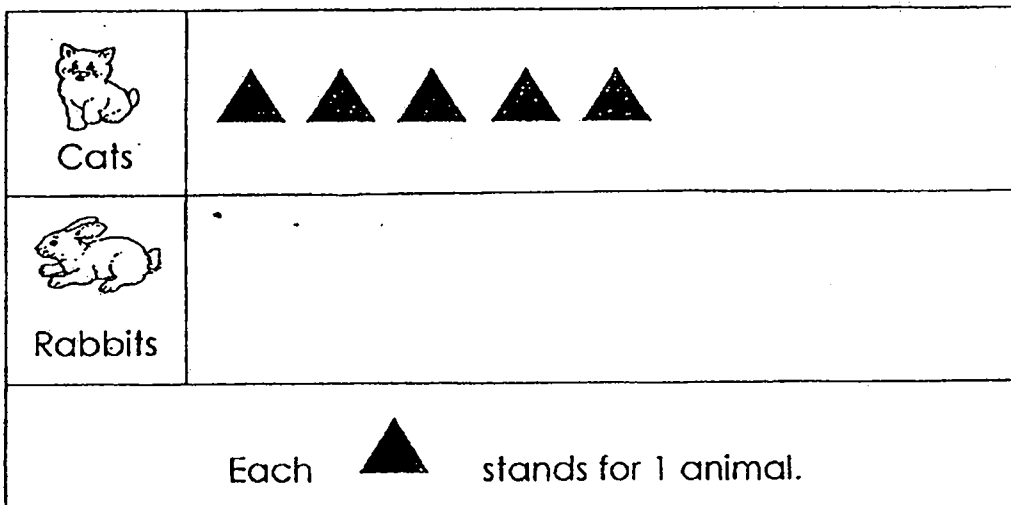
(a) $\underline{\quad} + \underline{\quad} + \underline{\quad} = \underline{\quad}$

(b) $\underline{\quad}$ twos = $\underline{\quad}$

3. Look at the picture below.



(a) Complete the picture graph by drawing . (1 mark)




(b) Fill in the blank with more or fewer. (1 mark)

There are _____ cats than rabbits.

4. The pictures below show what the students do in school.
 Look at the time on each clock.
 Fill in the blanks with the correct time using o'clock or half past.
 (2 marks)



(a) They have PE lesson at _____.





(b) They have Music lesson at _____.

5. Fill in the blank. (1 mark)

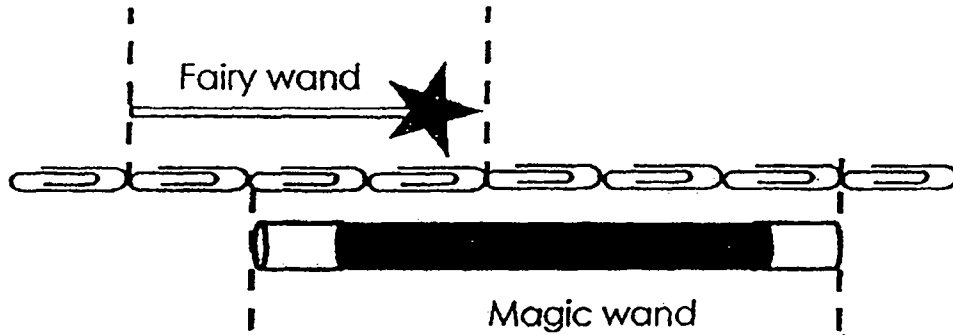
(a) $4 \times 2 =$


(b) The equation above represents the picture below.

Draw  in each bag to show the correct number of sweets. (1 mark)



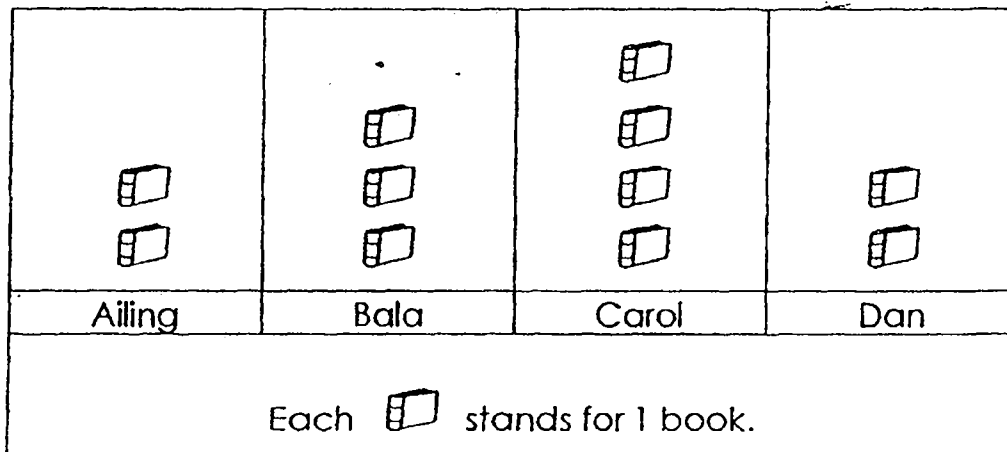
6. Look at the picture and fill in the blanks. (3 marks)



Each  stands for 1 unit.

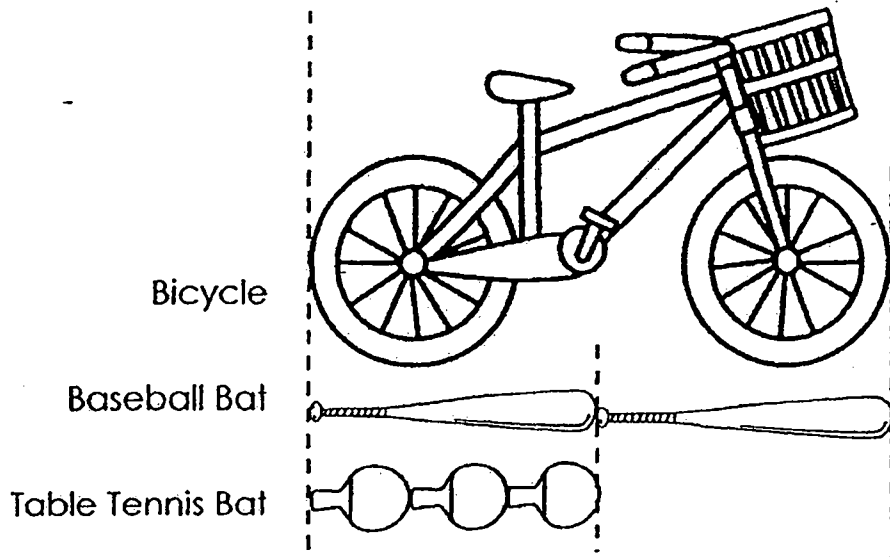
- (a) The length of the Fairy wand is _____ units.
- (b) The length of the Magic wand is _____ units.
- (c) The total length of the Fairy wand and the Magic wand is _____ units.


7. The picture graph below shows the number of books each child reads. Study it carefully and fill in the blanks. (2 marks)




_____ and _____ read the same number of books.

8. Look at the pictures and fill in the blanks. (2 marks)




(a) A baseball bat is about _____  long.

(b) A bicycle is about _____  long.

9. There are 15 teddy bears.

(a) Circle the teddy bears in groups of 3. (1 mark)




(b) Fill in the blank. (1 mark)

There are _____ groups of 3 teddy bears.


10. The clocks show the time each child gets up every morning.



Linda



Sue



Andy

Circle the correct answer for each sentence. (2 marks)

(a) Linda gets up before

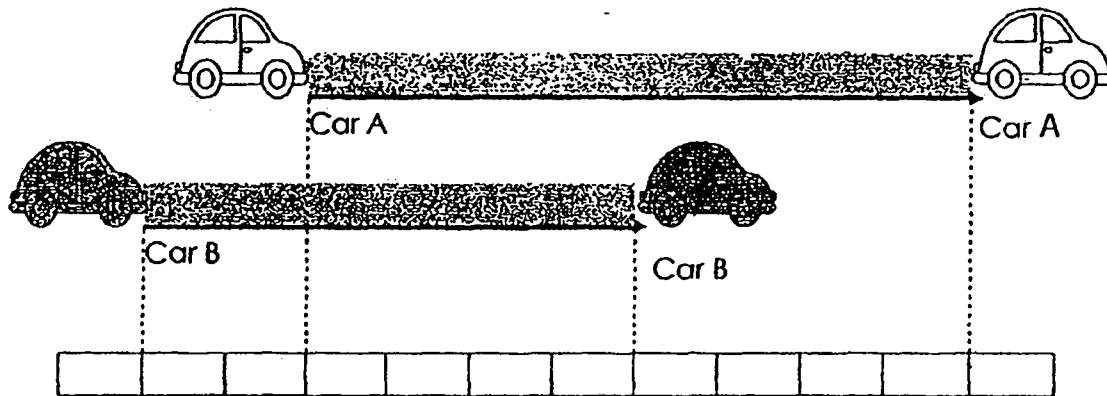
(b) gets up the earliest.

Section B (10 marks)

11. Car A and Car B moved from one place to another.

The picture below shows how much each of them had moved.

How many more units did Car A move than Car B? (2 marks)




Each stands for 1 unit.

$$\square \bigcirc \square = \square$$

Car A moved _____ units more than Car B.

12. Kate sews 4 buttons on each shirt.

How many buttons are there on 5 shirts? (2 marks)




$$\square \times \square = \square$$

There are _____ buttons on 5 shirts.

13. John puts 16 apples equally into 8 boxes.

Circle to show how many apples there are in each box.

(2 marks)




There are _____ apples in each box.

14. 3 girls had their heights taken.

Alice is taller than Carol but shorter than Beth.

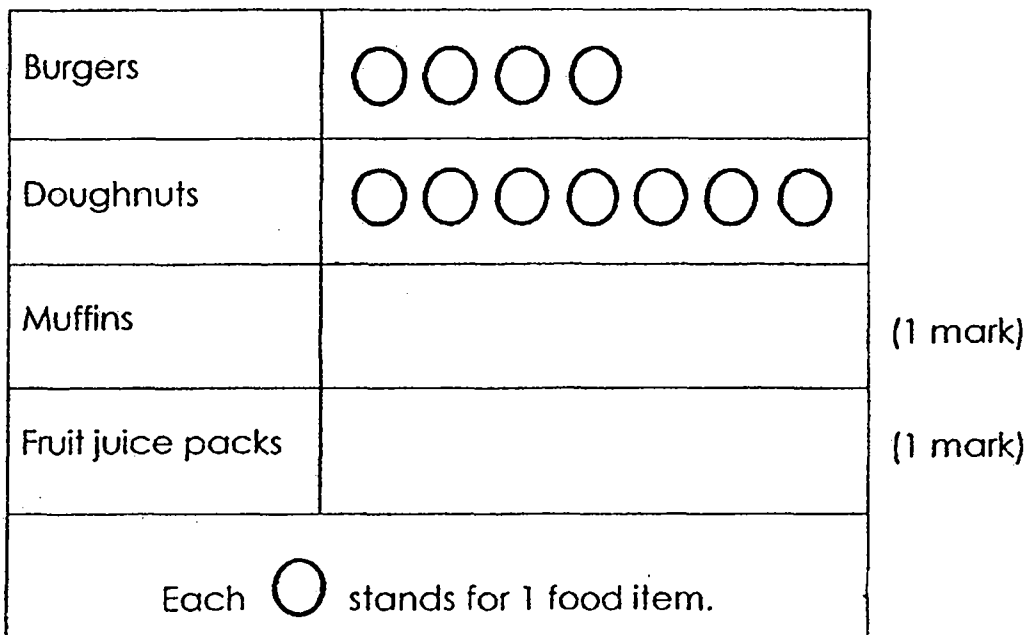
Write the name of each girl in the boxes provided. (2 marks)



15. Mrs Lim prepared some food and drinks for a picnic.

- The number of burgers is 1 more than the number of fruit juice packs.
- There are a total of 12 doughnuts and muffins.

Complete the picture graph by drawing ○ to show the number of food items she prepared.



End-of-Test

Have you checked your work?

EXAM PAPER 2018 (P1)

SCHOOL : AI TONG

SUBJECT : MATHEMATICS

TERM : TERM 4 MINI TEST 1

Q1) a) D

b) C

Q2) a) $2 + 2 + 2 = 6$

b) 3 twos = 6

Q3) a) Rabbits :




b) more

Q4) a) half past

b) 10 o'clock

Q5) a) 8

b)



Q6) a) 3

b) 5


c) 8

Q7) Ailing and Dan read the same number of books.

Q8) a) 3

b) 6

Q9) a)



b) 5

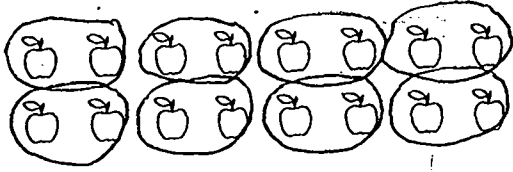
Q10) a) Andy

b) Sue

Q11) $8 - 6 = 2$

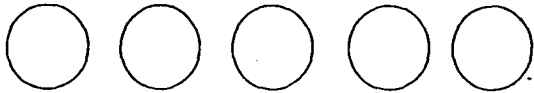
Q12) $5 \times 4 = 20$

Q13) 2



Q14) Carol , Alice , Beth

Q15) Muffins :



Fruit juice packs :

