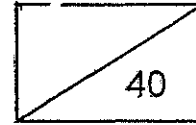


CHIJ ST NICHOLAS GIRLS' SCHOOL
 PRIMARY ONE
 TERM 4 TOPICAL REVIEW 3
 MATHEMATICS
 2018



Duration: 50 minutes

Name : _____ ()

Date : 23 October 2018

Class : Primary 1 _____

Parent's Signature: _____

	Topics Assessed	Level 4 All the time	Level 3 Most of the time	Level 2 Some of the time	Level 1 Seldom or Not at all
1	Division a) Able to use objects or pictures to find the number of items in each group when sharing equally b) Able to relate sharing equally to division c) Able to use objects or pictures to show division as finding the number of equal groups				
2	Time a) Able to use the term 'o'clock' to tell the time by the hour b) Able to read the time to the hour on a clock c) Able to use the term 'half past' to tell the time to the half hour d) Able to read the time to the half hour on a clock e) Able to relate time to daily activities				
3	Numbers to 100 a) Able to read and write numbers from 41 to 100 in numerals and words b) Able to compare numbers up to 100 c) Able to arrange numbers in ascending / descending order				

	Topics Assessed	Level 4 All the time	Level 3 Most of the time	Level 2 Some of the time	Level 1 Seldom or Not at all
4	Addition Within 100 a) Able to add a 2-digit number and a 1-digit number without regrouping b) Able to add two 2-digit numbers without regrouping c) Able to add a 2-digit number and a 1-digit number with regrouping d) Able to add two 2-digit numbers with regrouping				
5	Subtraction Within 100 a) Able to subtract a 1-digit number from a 2-digit number without regrouping b) Able to subtract a 2-digit number from another 2-digit number without regrouping c) Able to subtract two 2-digit numbers with regrouping				
6	Money a) Able to count money in dollars and in cents b) Able to add and subtract money in dollars (up to \$100) and in cents (up to \$1) c) Able to add to find the cost of two items d) Able to subtract to find change				

Section A (5 x 1 mark and 2 x 2 marks – Total 9 marks)

Read each question carefully and choose the correct answer.
Write the number of the correct answer (1, 2, 3 or 4) in the brackets provided.

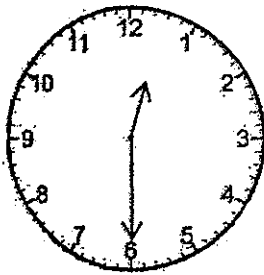
1. Susie has 20 strawberries.
She puts 2 strawberries on each cake.
How many cakes are there?



- (1) 40
(2) 22
(3) 18
(4) 10

()

2. Koko had her lunch at the time shown below.
What time did she have her lunch?

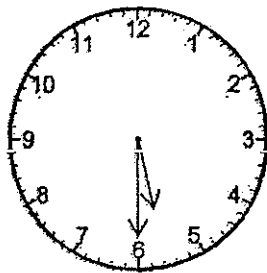


- (1) 12 o'clock
(2) half past 12
(3) half past 1
(4) 6 o'clock

()

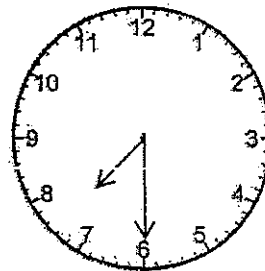
3. Which clock below shows the incorrect time?

(1)



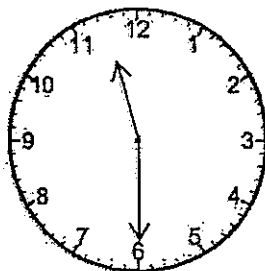
half past 5

(2)



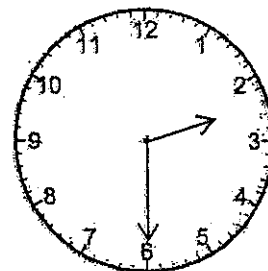
half past 7

(3)



half past 6

(4)



half past 2

()

4. Amy used all the coins below to buy a bun.

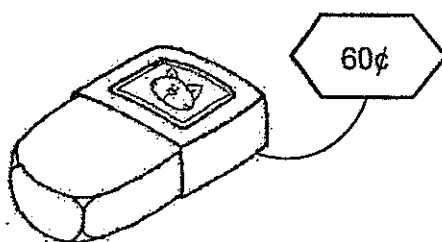


How much did the bun cost?

- (1) 50 cents
- (2) 70 cents
- (3) 80 cents
- (4) 90 cents

()

5. An eraser costs 60¢. Yasmin has only 15¢.
How much more money does she need to buy the eraser?



- (1) 45¢
- (2) 50¢
- (3) 55¢
- (4) 75¢

()

6. $48 - 2 \text{ tens} = \boxed{?}$

(1) 28


(2) 46

(3) 50

(4) 68

()

7. Peter and his 2 brothers share 12 apples equally.
How many apples does each child get?



(1) 14

(2) 10

(3) 6


(4) 4

()

Section B (11 x 2 marks = 22 marks)

Write your answers in the spaces provided.
Show all mathematical workings clearly.

8. Look at the picture below and fill in the blanks.



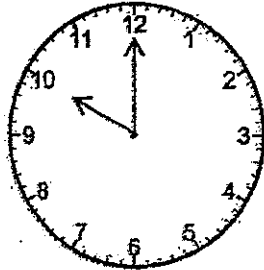
There are _____ boxes of pizzas.

Each box has _____ slices of pizzas.

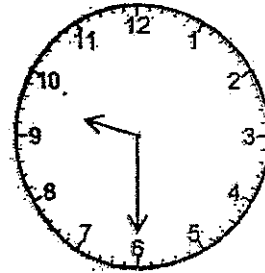
There are 30 slices of pizzas altogether.

9. Ravi and Gopal go to bed at different times at night. The clocks below show the times they go to bed. Who goes to bed earlier?

Put a ✓ in the correct



Gopal



Ravi

10. Fill in the boxes with the correct numbers.

(a) 2 more than 89 is

(b) 10 less than 52 is

11. Look at the number pattern below. Fill in the blanks with the correct numbers.

52 , 54 , 56 , 58 , _____ , 62 , _____

12. Fill in the blanks with the correct numbers.

(a) $25 + 30 = \underline{\hspace{2cm}}$

(b) $57 + 43 = \underline{\hspace{2cm}}$

13. Match.

$66 + 17$

7 tens 3 ones

8 tens 3 ones

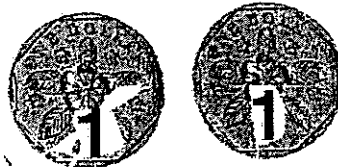






$50 + 48$

9 tens 8 ones


14. Write the missing number in the box.

$62 - \square = 24$

15. Jane wants to buy a cake for her mother's birthday.
Circle the coins and notes she needs to pay for the cake.

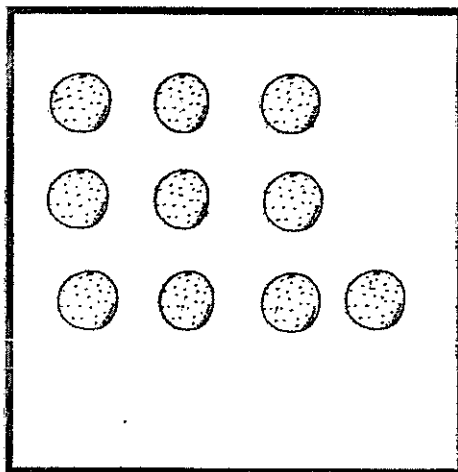


16.

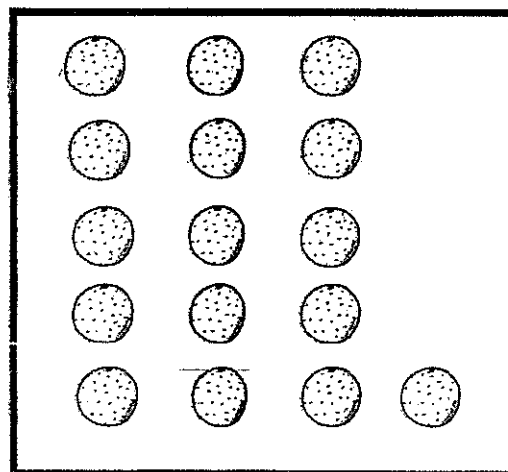


17.

Look at the picture below.
Which box of oranges can be divided equally into 4 groups?



Box A

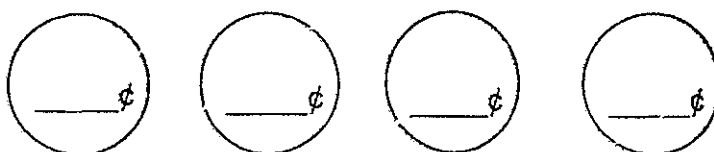


Box B

The oranges in Box _____ can be divided equally into 4 groups.

18.

A lollipop costs 50 cents.
Jenny uses 4 coins to pay for the lollipop.
What are the coins?
Fill in the blanks with the correct numbers.



Section C (3 x 3 marks = 9 marks)

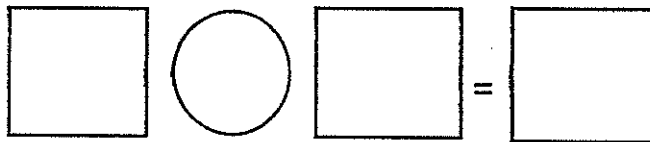
Solve the following problems. All number equations must be shown clearly.

19. Mrs Wong bought some apples.
After she ~~gave~~ gave 9 apples to her sister, she had 4 apples left.
How many apples did Mrs Wong buy?

$$\square \ominus \square = \square$$


She bought _____ apples.

20. There are 11 cookies on a tray.
There are 6 more cookies than muffins on the tray.
How many muffins are there on the tray?



There are _____ muffins on the tray.

21. Paul bought a toy train at a shop.
He gave the cashier \$20.
How much did he get back from the cashier?



$$\square \bigcirc \square = \square$$

He got _____ back from the cashier.

END OF PAPER

Answer Sheets

CHIJ Pri 1 2018 Term 3 (Tropical worksheet) 1 MATHS

1)4

2)12

3)fewer

4)least

5)Derek

6)9

7)orange

8)mangoes

Answer Sheets

CHIJ Pri 1 2018 Term 3 (Revision Paper 3) MATHS

SECTION A

1)4

2)1

3)3


4)3

5)4

6)2

7)3

SECTION B



8a)

8b)3

9)half past 8

10a)78

10b)56

11a)38


11b)60

12)9+58

13a)54

13b)6

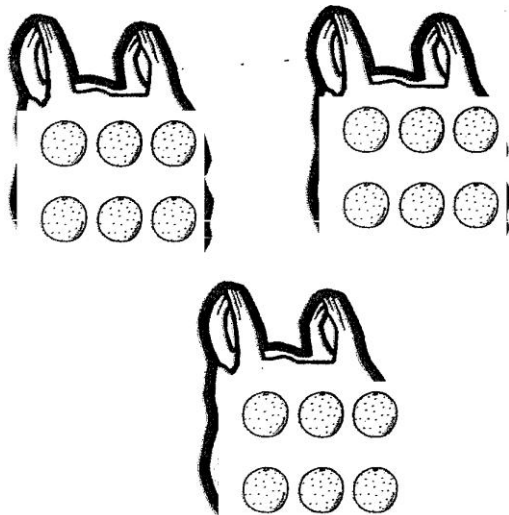
14)The amount of money in Purse B is smaller than the amount of money in Purse A



15)

16a)59

16b)81



17)

18)Sharpener and pen

SECTION C

19) $16-9=7$

Juiian has 7 cookies left

20) $8+7=15$

They have 15 files altogether

21) $17-13=4$

He need \$4 more

Answer Sheets
CHIJ Pri 1 2018 Term 4 (Topical Review 3) MATHS

SECTION A

1)4

2)2

3)3

4)2

5)1

6)1

7)4

SECTION B

8)there are 5 boxes of pizzas.

Each box has 6 slices of pizzas.

9)Ravi

10a)91

10b)42

11)60,64

12a)55


12b)100

13)66+17 match with 8 tens 3 ones

50+48 match with 9 tens 8 ones

14)38

15)



16)5

17)B

18)10cents 10cents,10cents,20 cents

SECTION C

19) $9+4=13$

She bought 13 apples

20) $11-6=5$

There are 5 muffins on the tray

21) $\$20-\$17=\$3$

He got \$3 back from the cashier.

