

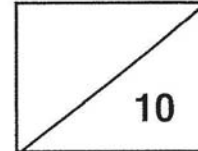
TAO NAN SCHOOL
HOLISTIC ASSESSMENT MATHEMATICS TEST (1)

Name : _____ ()

Class : _____

Date: _____

Parent's signature : _____



Read the questions carefully.

Write the correct answers in the boxes provided. (1 mark each)

(1) How many marbles are there altogether ?

Write the **answer** in the box.

The image shows a collection of marbles in jars and bags. There are three jars labeled '100', one jar labeled '100', two bags labeled '10', and one bag labeled '10'. There is also a small pile of five marbles. The total number of marbles is 100 + 100 + 100 + 100 + 10 + 10 + 5 = 425.

(2) Write in words.

793	
------------	--

(3) In 561, the value of the digit 5 is

Look at the numbers below.

Write your answers in the boxes for Questions 4 and 5.

795	308	539	684
-----	-----	-----	-----

(4) The greatest even number is

(5) The odd number smaller than 700 is

(6) - 20 = 348

(7) 10 **more** than 567 is

(8)

$$\begin{array}{r} 637 \\ + 53 \\ \hline \square \square \square \\ \hline \end{array}$$

(9)

$$\begin{array}{r} 563 \\ - 182 \\ \hline \square \square \square \\ \hline \end{array}$$

(10)

$$\begin{array}{r} 8410 \\ - 3\boxed{}4 \\ \hline 486 \\ \hline \end{array}$$

-----End Of Paper-----

TAO NAN SCHOOL

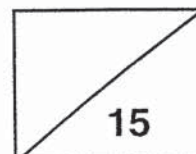
HOLISTIC ASSESSMENT MATHEMATICS TEST (3)

Name: _____

Class : _____

Date:

Parent's signature: _____



Section A (5 x 1 mark)

Choose the correct answer.

Write its number in the brackets provided.

1. What is the **value** of the digit '2' in 258 ?

(1) 2

(2) 20

(3) 200

(4) 258

()

2. Which of the following has a value **smaller than 5** ?

(1) $14 \div 2$

(2) $20 \div 5$

(3) $24 \div 4$

(4) $30 \div 3$

()

3. How many odd numbers are there between 10 and 20 ?

(1) 5

(2) 9

(3) 11

(4) 19

()

4. - 100 = 350 + 20

What is the missing number ?

(1) 270

(2) 330

(3) 370

(4) 470


()

5. The pencil below has a length of 20 cm. What could be an estimated length of the pair of scissors ?

Pencil



Scissors



- (1) 10 cm
- (2) 17 cm
- (3) 22 cm
- (4) 4 cm

()

Section B (8 x 1 mark)

Read the questions carefully.

Write the correct answers in the spaces provided.

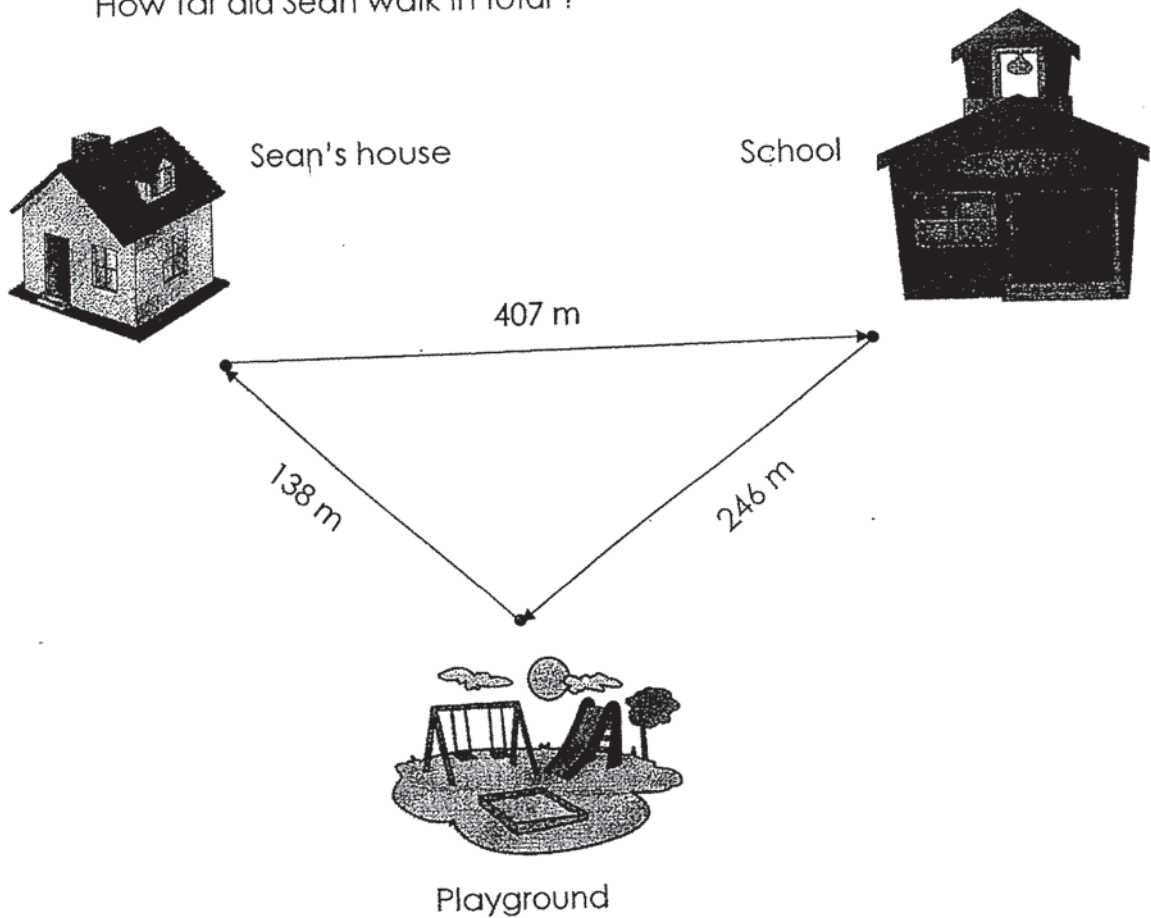
6. Write 697 in **words**.

7. Fill in the box with the correct digit.

$$\begin{array}{r} 7 \quad 1 \quad 7 \\ - 1 \quad \square \quad 9 \\ \hline 5 \quad 6 \quad 8 \end{array}$$


8. Multiply 9 by 5. The answer is

9. Last Saturday, Sean walked from his house to the school.
Then, he walked to the playground.
Finally, he walked back to his house.
How far did Sean walk in total ?



Sean walked m in total.

10. Abby has \$10. How many bottles of milk can she buy with all her money?



Abby can buy bottles of milk.

11. The digit in each of the boxes is the same. Find the missing digit.


$$\begin{array}{r} 6 \quad \square \quad 9 \\ + \quad \square \quad 8 \quad 2 \\ \hline 9 \quad 1 \quad 1 \\ \hline \end{array}$$

The missing digit is _____.

12. There are 4 boys and 3 girls on a bus.
There are 2 times as many adults as children on the same bus.
How many adults are there on the bus ?

There are adults on the bus.

13. Look at the pictures below.
What is the mass of the mango ?



The mass of the mango is g.

Section C (1 X 2 marks)

Read the questions carefully.

Show your working and number sentences clearly.

14. Nicole has \$18.
She has \$10 less than Bryan.
How much money do they have altogether ?

They have \$_____ altogether.

The End

ANSWER KEY

STATISTICS (TEST)

Q: Ninety-three
Q:
Q:
Q:
Q:
Q:

Q8) 690

Q9) 381

Q10) 5

ANSWER KEY

LEVEL : PRIMARY 2
SCHOOL : TAO NAN
SUBJECT : MATHEMATICS (TEST 3)
TERM :

SECTION A

Q1	3	Q2	2	Q3	1	Q4	4	Q5	2
----	---	----	---	----	---	----	---	----	---

SECTION B

Q6) six hundred and ninety-seven

Q7) 4

Q8) 45

Q9) 791

Q10) 5

Q11)

Q12)

Q13) 600

SECTION C

Q14) $18+10 = 28$

$28+18 = 46$

They have \$46 altogether.

END

³
END.