


CA

**NAN HUA PRIMARY SCHOOL
CONTINUAL ASSESSMENT 1 - 2005
MATHEMATICS
PRIMARY 3**

Name: _____ ()

Marks :



Class: Primary 3 _____

Date: 1st March 2005

Duration: 1 h 30 min

Parent's Signature

Section A: Mental Sums (6 x 1 mark)

Listen carefully and write down the answers in the blanks provided.

1) _____ tens

2) _____

3) _____

4) _____

5) \$ _____

6) _____ cookies

Section B: Multiple-Choice Questions (20 x 2 marks)

Choose the correct answer and write its number in the brackets provided.

7) In the numeral 7 013, the digit '1' is in the _____ place.

- 1) thousands
- 2) hundreds
- 3) tens
- 4) ones

()

8) $2\ 668 = 2\ 000 + \boxed{} + 60 + 8$

- 1) 6 000
- 2) 600
- 3) 60
- 4) 6

()

9) 6 666 is the same as _____.

- 1) 6 066 + 6
- 2) 6 606 + 6
- 3) 6 660 + 6
- 4) 666 + 6

()

10) The number that is 100 less than 3 098 is _____.

- 1) 4 098
- 2) 3 198
- 3) 2 998
- 4) 2 098

()

11) 6×5 is the same as _____.

- 1) $6 \times 6 \times 6 \times 6 \times 6$
- 2) $5 \times 5 \times 5 \times 5 \times 5 \times 5$
- 3) $6 + 6 + 6 + 6 + 6$
- 4) $5 + 5 + 5 + 5 + 5$ ()

12) When I say 144, 138, 132, 126, ... I am counting backwards in _____.

- 1) sevens
- 2) sixes
- 3) fives
- 4) fours ()

13) Which of the following is incorrect?

- 1) 4 900 = 49 hundreds
- 2) 2 096 = 2 thousands, 9 tens and 6 ones
- 3) 7 895 = Seven thousand, eight hundred and fifteen
- 4) 3 666 = 3 000 + 600 + 60 + 6 ()

14) The number that is 3 hundreds more than 6 196 is _____.

- 1) 6 199
- 2) 6 226
- 3) 6 496
- 4) 9 196 ()

15) Mary has 1 074 badges. Valynn has 798 badges. How many more badges does Mary have?

- 1) 276
- 2) 286
- 3) 1 862
- 4) 1 872

()

16) Which of the following is the smallest?

- 1) 3 796
- 2) 3 976
- 3) 3 679
- 4) 3 769

()

17) Ali and Bala had 16 marbles altogether. Ali had 4 marbles more than Bala. How many marbles did Ali have?

- 1) 12
- 2) 10
- 3) 8
- 4) 6

()

18) When  is multiply by 8, the answer is 56.

The  stands for _____.

- 1) 7
- 2) 48
- 3) 64
- 4) 448

()

19) Mrs Lee bought 8 bottles of orange juice. Each bottle contained 2 litres of orange juice. How many litres did she buy?

- 1) 16 litres
- 2) 10 litres
- 3) 6 litres
- 4) 4 litres

()

20) 18 boys are to be divided equally into groups. Which is the greatest possible number of groups?

- 1) 7 groups
- 2) 6 groups
- 3) 3 groups
- 4) 5 groups

()

21) What is the largest even number between 8 000 and 8 500?

- 1) 8 001
- 2) 8 002
- 3) 8 458
- 4) 8 459

()

22) Mr Lim bought some books. He gave away 12 books and bought another 6 more books. He had 50 books after that. How many books did he have at first?

- 1) 18 books
- 2) 32 books
- 3) 44 books
- 4) 56 books

()

23) What is the sum of all the odd numbers between 17 and 26 ?

- 1) 9
- 2) 43
- 3) 84
- 4) 88

()

24) Cheryl has 7 erasers. Her sister has 3 times as many erasers. How many more erasers has her sister?

- 1) 10
- 2) 14
- 3) 21
- 4) 28

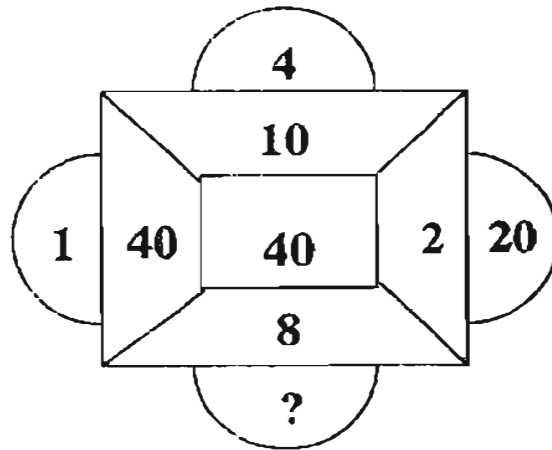
()

25) 12 apples are packed equally into 2 packets. How many apples are there in 9 such packets?

- 1) 69
- 2) 54
- 3) 45
- 4) 15

()

26)



Find the missing number?

- 1) 58
- 2) 48
- 3) 32
- 4) 5

()

Section C: Open-ended Questions (17 × 2 marks)

Write out the correct answers for the following questions in the boxes provided. Give your answers in the units stated.

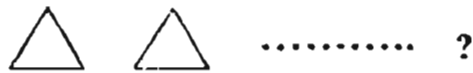
27) Write 8 179 in words.

28) Write down the greatest 4-digit number that can be formed using the digits 1, 0, 8, 7.

29) Find the difference between 1 812 and 3 897.

30) How many eights are there in 32 ?

- 31) Lilian used 3 ice-cream sticks to make one triangle.
She made _____ triangles with 27 ice-cream sticks.



- 32) The value of digit '3' in 5 132 is $3 \times$

- 33) Emmanuel and Stephanie shared 805 stickers. If Emmanuel had 377 stickers, How many stickers did Stephanie have?

 stickers


- 34) John obtained 78 marks for Mathematics, 85 marks for Higher Chinese and 82 marks for English. How many marks did he obtain for the 3 subjects?

 marks

35) A box holds 9 oranges. How many oranges can 6 such boxes hold?

oranges

36)



3 papayas for \$8

How much must Joanne pay for 9 papayas?

\$

37) Jill, Kim and Dorothy have 6 dolls each. How many dolls do they have altogether?

dolls

38)

28

35

44

13

Which two numbers when added together will give you the largest even number?

and



39)



Look at the number pattern. Then fill in the missing number.

- 40) In a school, there are 1 750 pupils. 800 of them are girls and the rest are boys. How many more boys than girls are there?

 more boys

- 41) Jim and his two friends shared 27 sweets equally. How many sweets did each child get?

 sweets

- 42) Mrs Gopal had \$50. She lost \$2 and divided the rest into 6 equal shares for her six children. How much money did each child receive?

\$

43) $\star + \star + \star = 15$

$\star \times \star = ?$

Section D: Problem Sums (5 × 4 marks)

Answer all questions. All number sentences, statements and workings must be clearly shown.

44) Jem has 3 172 stamps. Ali has 1 000 less stamps than Jem.
How many stamps do they have altogether?

45) Mark has 3 boxes of pens. Each box contains 8 pens. He repacks the pens in boxes of 4, how many boxes does he need?

46) There were 2 713 people in the zoo on Monday. There were 818 children and the rest were adults. How many adults were men if there were 751 women?

47) There were 7 boys and 2 girls. Each boy received \$5 and each girl received \$4. How much money did they receive altogether?

- 48) Julie has 53 buttons. Marcie has twice as many buttons than Julie. How many buttons did they have altogether?



ANSWER SHEETS

1. 48 42.8
2. 1999 43.25
3. 400
4. 420 44. $3172 - 1000 = 2172$
5. 24 $3172 + 2172 = 5344$
6. 9 They have 5344 stamps altogether
7. 3
8. 2 45. $3 \times 8 = 24$
9. 3 $24 / 4 = 6$
10. 3 he needs 6 boxes
11. 3
12. 2 46. $818 + 751 = 1569$
13. 3 $2713 - 1569 = 1144$
14. 3 There were 1144 men at the zoo
15. 1
16. 3 47. $7 \times \$5 = \35
17. 2 $2 \times \$4 = \8
18. 1 $\$35 + \$8 = \$43$
19. 1 They received \$43 altogether
20. 2
21. 3 48. $53 \times 2 = 106$
22. 4 $106 + 53 = 159$
23. 4 They had 159 buttons altogether
24. 2
25. 2
26. 4
27. eight thousand
one hundred and seventy-nine

28. 8710
29. 2085
30. 4
31. 9
32. 10
33. 428
34. 245
35. 54
36. 24
37. 18
38. 44 and 28
39. 27
40. 150
41. 9