



Nan Hua Primary School
Primary 3 Mathematics
Term 1 Weighted Assessment

Marks	
Section A:	/14
Section B:	/6
Total:	/20

Name: _____ ()

Class: Primary 3/ _____

Date: _____

Parent's Signature

Answer all questions.

Section A Part 1 (8 marks)

Questions 1 to 8 carry 1 mark each. For each question, four options are given.

One of them is the correct answer. Make your choice (1, 2, 3 or 4) and write your answer in the bracket provided.

1. Which of the following is six thousand, four hundred and eight in numerals?

- (1) 6048
- (2) 6400
- (3) 6408
- (4) 6480

()

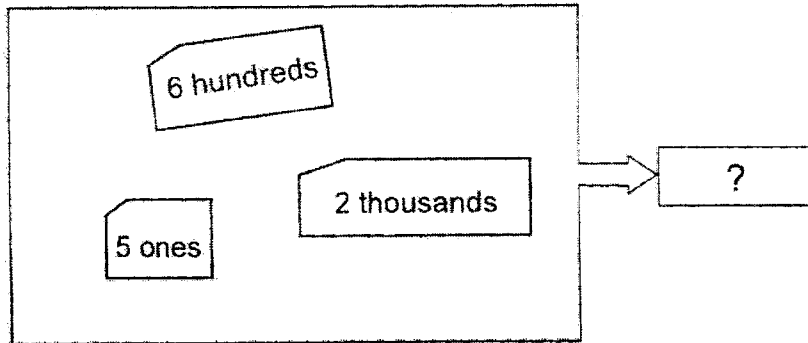
2. What is the value of digit 3 in 4379?

- (1) 30
- (2) 300
- (3) 3
- (4) 3000

()

Score	2
-------	---

3. What is the number shown below?



- (1) 2065
(2) 2506
(3) 2605
(4) 2850

()

4. Which of the following numbers is the smallest?

- (1) 8902
(2) 8931
(3) 8796
(4) 8769

()

Score	
-------	---

5. Arrange the following numbers from the smallest to the greatest.

3210

2501

3127

- | | <u>Smallest</u> | | <u>Greatest</u> |
|-----|-----------------|--------|-----------------|
| (1) | 2501 | , 3210 | , 3127 |
| (2) | 2501 | , 3127 | , 3210 |
| (3) | 3210 | , 3127 | , 2501 |
| (4) | 3127 | , 3210 | , 2501 |
- ()

6. In the number pattern below, what is the missing number?

5088, 5091, 5094, 5097, _____, 5103

- (1) 5010
- (2) 5098
- (3) 5100
- (4) 5102
- ()

7. Find the value of $3826 + 2641$.

- (1) 1185
- (2) 1285
- (3) 5467
- (4) 6467
- ()

Score	3
-------	---

8. The sum of two numbers is 4567.
One of the numbers is 2468.
What is the other number?

- (1) 2099
(2) 2119
(3) 6925
(4) 7035

()

Section A Part 2 (6 marks)

Questions 9 to 11 carry 2 marks each. Write your answers in the spaces provided.
For questions which require units, give your answers in the units stated.

9. (a) Use the following digits to form the greatest 3-digit odd number.

2 5 7

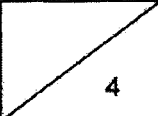
- (b) Use the following digits to form the smallest 3-digit even number.

0 2 5

Score	3
-------	---

10. 1503 people were at a book fair.
942 were children and the rest were adults.
How many adults were at the book fair?

11. There are 820 red markers and 1048 blue markers in a shop.
How many markers are there altogether?

Score	
-------	---

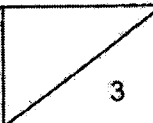
Section B (6 marks)

Questions 12 and 13 carry 3 marks each. Show your working clearly and write your answers in the spaces provided. For questions which require units, give your answers in the units stated.

12. Jack had 2000 marbles.
He had 653 more marbles than Tom.
- (a) How many marbles did Tom have? [1 mark]
- (b) Tom bought another 480 marbles.
How many marbles did Tom have in total? [2 marks]

Ans: (a) _____

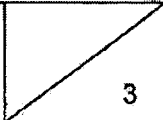
(b) _____

Score	
-------	---

13. Mary saved \$799 in February.
She saved \$253 less in February than in January.
How much did Mary save altogether in January and in February?
[3 marks]

Ans: _____

End of Paper

Score	
-------	---

NHPS P3 Mathematics
Term 1 Weighted Assessment
Answers
Section A Part 1

Qn	Answer	Qn	Answer
1	3	5	2
2	2	6	3
3	3	7	4
4	4	8	1

Section A Part 2

Qn	Answer
9	(a) 725 (b) 250
10	$1503 - 942 = 561$
11	$820 + 1048 = 1868$

Section B

Qn	Answer
12	<div style="display: flex; align-items: center;"> <div style="margin-right: 10px;">Tom</div> <div style="border: 1px solid black; padding: 5px; display: flex; align-items: center;"> <div style="border-right: 1px solid black; width: 100px; height: 20px; margin-right: 5px;">? (a)</div> <div style="width: 20px; height: 20px; margin-right: 5px;">653</div> </div> </div> <div style="display: flex; align-items: center; margin-top: 5px;"> <div style="margin-right: 10px;">Jack</div> <div style="border: 1px solid black; padding: 5px; width: 100px; height: 20px; text-align: center;">2000</div> </div> <p>(a) $2000 - 653 = 1347$ Tom has <u>1347</u> marbles.</p> <p>(b) $1347 + 480 = 1827$ Tom had <u>1827</u> in total.</p>
13	<div style="display: flex; align-items: center;"> <div style="margin-right: 10px;">Jan</div> <div style="border: 1px solid black; padding: 5px; width: 100px; height: 20px; text-align: center;">?</div> </div> <div style="display: flex; align-items: center; margin-top: 5px;"> <div style="margin-right: 10px;">Feb</div> <div style="border: 1px solid black; padding: 5px; width: 100px; height: 20px; display: flex; align-items: center;"> <div style="width: 50px; height: 20px; margin-right: 5px; text-align: center;">\$799</div> <div style="width: 20px; height: 20px; margin-right: 5px;">\$253</div> </div> </div> <div style="margin-left: 100px; margin-top: 10px;">} ?</div> <p>$799 + 253 = 1052$ $1052 + 799 = 1851$</p> <p>Mary saved <u>\$1851</u> altogether.</p>

