

SINGAPORE CHINESE GIRLS' SCHOOL
FIRST SEMESTRAL ASSESSMENT 2019

PRIMARY 6

MATHEMATICS
PAPER 1

BOOKLET A

Name : _____ ()
Class : Primary 6 SY / C / G / SE / P

10 May 2019

		Marks attained	Max Mark
Paper 1	Booklet A		20
	Booklet B		25
Paper 2			55
Total Marks			100

Parent's Signature

15 Questions
20 Marks

Total Time for Booklets A and B: 1 h

INSTRUCTIONS TO CANDIDATES

Do not open this booklet until you are told to do so.

Follow all instructions carefully.

Answer all questions.

You are **not allowed** to use a calculator

Booklet A

Questions 1 to 10 carry 1 mark each. Questions 11 to 15 carry 2 marks each.
For each question, four options are given. One of them is the correct answer.
Make your choice (1, 2, 3 or 4). Shade the correct oval (1, 2, 3 or 4) on the Optical Answer Sheet. **(20 marks)**

1. $300\ 000 + 20\ 000 + 40 + 4 = \underline{\hspace{2cm}}$.

- (1) 302 044
- (2) 302 404
- (3) 320 044
- (4) 320 440

2. Kae spent \$1 399 685 on a house. Round off this amount to the nearest thousand dollars.

- (1) \$1 398 690
- (2) \$1 399 000
- (3) \$1 399 700
- (4) \$1 400 000

3. In 6.79, what does the digit 9 stand for?

- (1) 9 ones
- (2) 9 tenths
- (3) 9 hundredths
- (4) 9 thousandths

4. Find the value of $\frac{3}{4} \div \frac{5}{12}$

(1) $\frac{16}{5}$

(2) $\frac{9}{5}$

(3) $\frac{5}{9}$

(4) $\frac{5}{16}$

5. There are red, blue and yellow beads. The ratio of the number of red beads to the number of blue beads is 2:1. The ratio of the number of red beads to yellow beads is 3 : 2. What is the ratio of the number of red beads to the number of blue beads to the number of yellow beads?

(1) 6 : 3 : 2

(2) 6 : 3 : 4

(3) 2 : 1 : 2

(4) 2 : 3 : 2

6. Amy made 7 dumplings every 3 minutes. How many dumplings can she make in an hour?

(1) 140

(2) 120

(3) 70

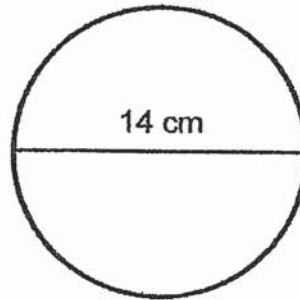
(4) 60

7. Jenny had \$50. She bought 4 notebooks and had \$ x left. What was the cost of each notebook? Express the cost of 1 notebook in terms of x .

- (1) \$ $\left(\frac{50-x}{4}\right)$
- (2) \$ $\left(50 - \frac{x}{4}\right)$
- (3) \$ $(50 - 4x)$
- (4) \$ $\left(\frac{50x}{4}\right)$

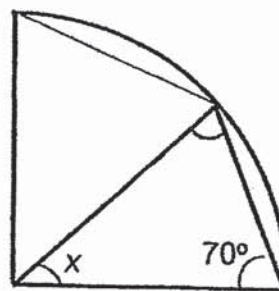
8. The diameter of the circle below (not drawn to scale) is 14 cm. Find the area of the circle. Express your answer in terms of π .

- (1) $7\pi \text{ cm}^2$
- (2) $14\pi \text{ cm}^2$
- (3) $49\pi \text{ cm}^2$
- (4) $196\pi \text{ cm}^2$



9. The figure below is made up of a quadrant and a triangle. Find $\angle x$.

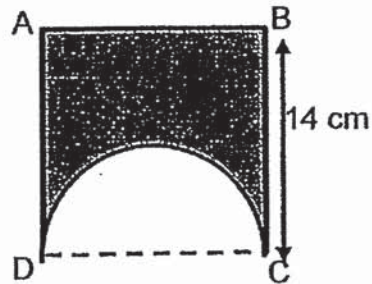
- (1) 40°
- (2) 45°
- (3) 70°
- (4) 140°



10. ABCD is a square with a semicircle cut from the side CD as shown. Given that BC = 14 cm, find the perimeter of the shaded portion.

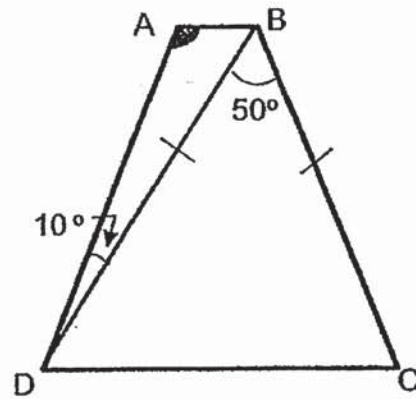
(Take $\pi = \frac{22}{7}$)

- (1) 86 cm
 (2) 64 cm
 (3) 53 cm
 (4) 44 cm



11. The figure shows a trapezium ABCD and an isosceles triangle BCD. Given that $BD = BC$, $AB \parallel DC$ and $\angle CBD = 50^\circ$ and $\angle ADB = 10^\circ$. Find $\angle BAD$.

- (1) 65°
 (2) 75°
 (3) 105°
 (4) 115°



12. Jeremy has 6 kg of flour. He gave $\frac{1}{2}$ of it to his friend and used $\frac{1}{4}$ kg to bake some cookies. How much flour had he left?

- (1) $\frac{3}{4}$ kg
 (2) $2\frac{3}{4}$ kg
 (3) $3\frac{3}{4}$ kg
 (4) $5\frac{1}{4}$ kg

13. Amanda has forty 20-cent coins and Betty has sixty 50-cent coins.
Which of the following statement shows the-difference between the amount of money Betty and Amanda has?

- (1) $(60 - 40) \times (50 - 20)$
- (2) $(50 \times 60 - 40 \times 20)$
- (3) $(60 \times 40 - 50 \times 20)$
- (4) $(60 + 40) \times (50 - 20)$

14. There were 120 members in Club Aloha last year. This year, there are 300 members. What is the percentage increase from last year?

- (1) 40%
- (2) 60%
- (3) 150%
- (4) 250%

15. A repeat pattern is formed using the numbers 0, 1 and 2 as shown below.

0	1	2	1	0	0	1	2	1	0	0	1	2	1
1 st	2 nd	3 rd											14 th

What is the sum of the first 203 numbers?

- (1) 160
- (2) 161
- (3) 162
- (4) 163

End of Booklet A

SINGAPORE CHINESE GIRLS' SCHOOL
FIRST SEMESTRAL ASSESSMENT 2019

PRIMARY 6
MATHEMATICS
PAPER 1
BOOKLET B

Name : _____ ()

Class : Primary 6 SY / C / G / SE / P

10 May 2019

Paper 1	Mark attained	Max Mark
Booklet B		25

15 Questions
25 Marks

Total Time for Booklets A and B: 1 h

INSTRUCTIONS TO CANDIDATES

Do not open this booklet until you are told to do so.

Follow all instructions carefully.

Answer all questions.

You are not allowed to use a calculator

Booklet B

Questions 16 to 20 carry 1 mark each. Write your answers in the spaces provided. For questions which require units, give your answers in the units stated. (5 marks)

Do not write
in this
column

16. Use all the numbers below to form the smallest odd number.



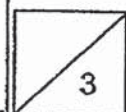
Ans: _____

17. Express $\frac{3}{8}$ as a decimal correct to the nearest 2 decimal places.

Ans: _____

18. 2 pizzas were shared equally among 5 people. What fraction of a pizza did each person get?

Ans: _____



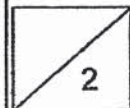
19. Mei Ling and John has pocket money in the ratio of 2 : 5 respectively. John gave \$9 to Mei Ling and the ratio of the amount of pocket money Mei Ling to John became 3 : 4. How much money do they have altogether?

Do not write
in this
column

Ans: \$ _____

20. The price of a dress without GST is \$50. The GST is 7%, how much will Georgina pay for the dress inclusive of GST?

Ans: \$ _____



Questions 21 to 30 carry 2 marks each. Show your working clearly in the space for each question and write your answers in the space provided.
For questions which require units, give your answers in the units stated.

(20 marks)


Do not write
in this
column

21. Helen's score for the first two tests are listed in the table below. How much must Helen score for the 3rd test in order for her to get an average score of 80 marks for all 3 tests?

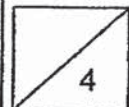
Test	Marks
1	75
2	70
3	?

Ans: _____

22. The figure below is made up of 4 identical quadrants with a radius of 10 cm inside a square. What is the area of the shaded figure below?
(Take $\pi = 3.14$)



Ans: _____ cm²



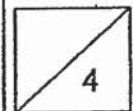
23. Tom bought 2 erasers for x cents each. He also bought an exercise book. He spent \$6 altogether. What is the cost of the exercise book?

Do not write
in this
column

Ans: _____ cents

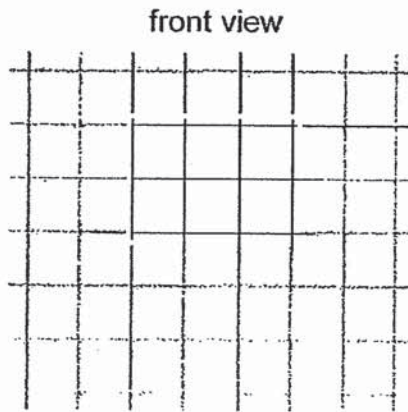
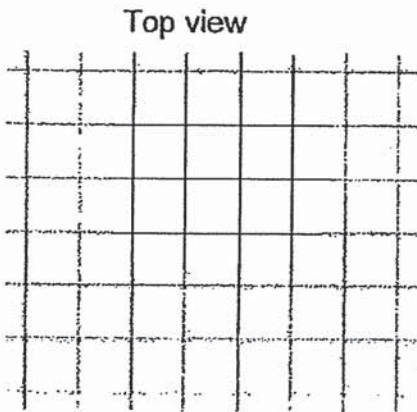
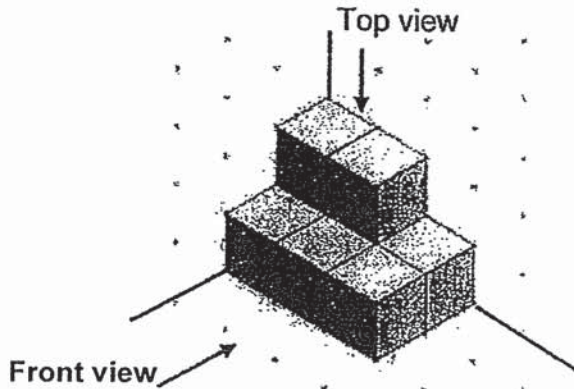
-
24. A toy wheel of radius 7 cm was rolled along a straight line on a table. What was the distance covered if it made a total of 10 complete revolutions?
(Take $\pi = \frac{22}{7}$)

Ans: _____ cm

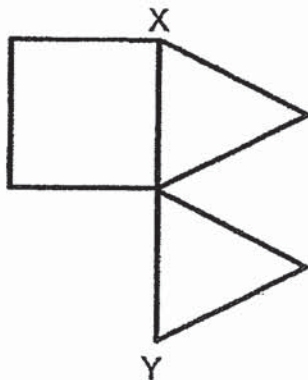


25. In the grid below, draw the top and front view of the solid shown in the grid below.

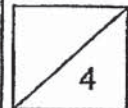
Do not write in this column



26. John had a 1m long wire. He used some of it to form a square and 2 identical equilateral triangles as shown below. The length of XY is 16 cm, find the length of the remaining unused wire.

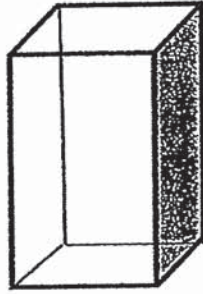


Ans: _____ cm



27. Tank A has a square base area of 144 cm^2 . Given that the ratio of the height of the tank to the breadth of the tank is 5:3, what is the capacity of Tank A?

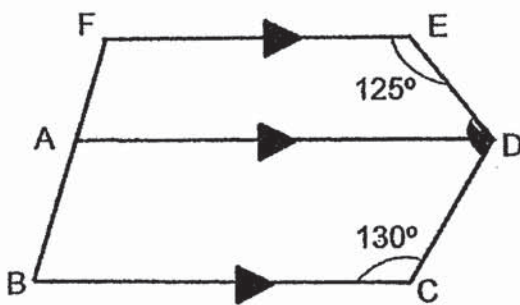
Do not write
in this
column



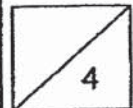
144 cm^2

Ans: _____ cm^3

28. The figure below, not drawn to scale, is made up of two trapeziums ABCD and ADEF. Given that $FE \parallel AD \parallel BC$, find $\angle CDE$.

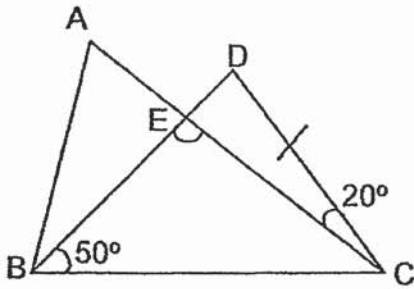


Ans: _____ $^\circ$



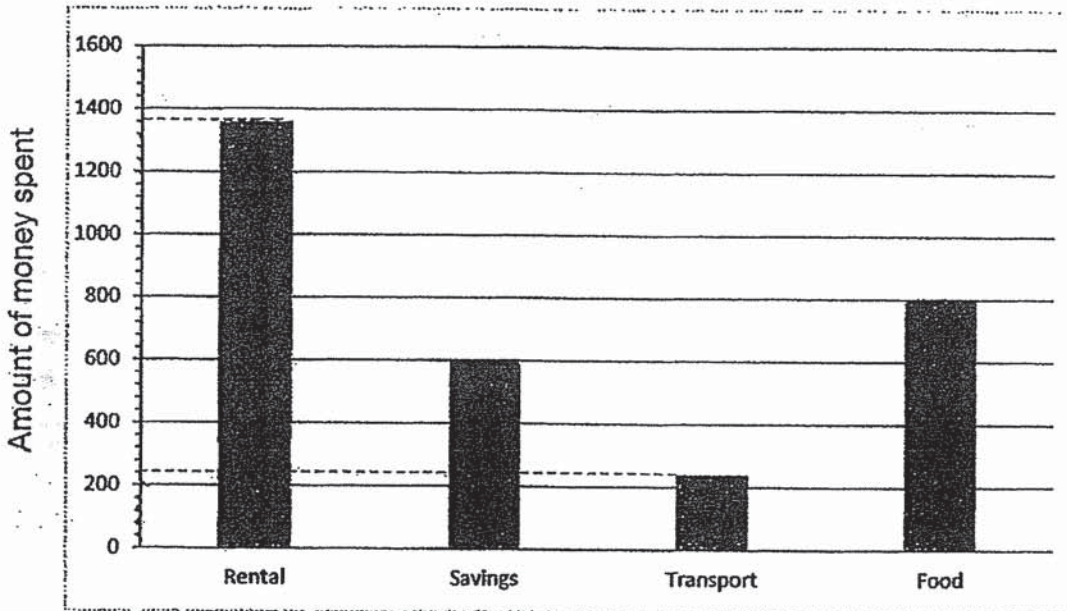
29. The figure below is made up of 2 triangles, ABC and BCD. BCD is an isosceles triangle. Find $\angle BEC$.

Do not write
in this
column



Ans: _____ °

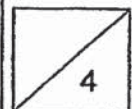
30. The bar graph below shows how Ellie spends her monthly salary.



What percentage of the salary did she spend on transport?

Ans : _____ %

End of Booklet B



SINGAPORE CHINESE GIRLS' SCHOOL
FIRST SEMESTRAL ASSESSMENT 2019

PRIMARY 6
MATHEMATICS
PAPER 2

Name : _____ ()

Class : Primary 6 SY / C / G / SE / P

10 May 2019

	Mark	Max Mark
Paper 2		55

Parent's Signature

17 Questions
55 Marks

Total Time for Paper 2: 1 h 30 min

INSTRUCTIONS TO CANDIDATES

Do not open this booklet until you are told to do so.
Follow all instructions carefully.
Answer all questions.

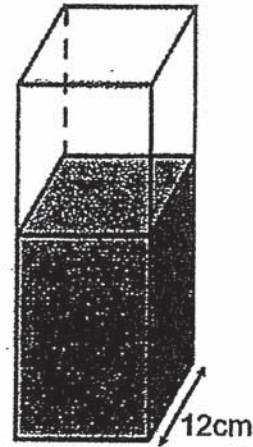
Questions 1 to 5 carry 2 marks each. Show your working clearly in the space below each question and write your answers in the space provided. For questions which require units, give your answers in the units stated. (10 marks)

Do not write in this column

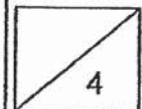
1. At a baking class, 5.04 kg of flour was shared among 8 students. How much flour did each student get? Express your answer in grams

Ans: _____ g

2. The container below has a square base. It is $\frac{3}{5}$ - filled. The volume of water in the container is 1296 cm^3 . What is the height of the container?



Ans: _____ cm



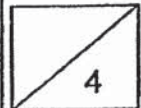
3. A shop sells chocolate and vanilla cakes. 40% of the cakes are vanilla cakes. She sold 100 chocolate cakes. In the end, 60% of the cakes left are vanilla cakes. How many vanilla cakes are there?

Do not
write in this
column

Ans: _____

-
4. Machine A and Machine B were switched on at the same time for 10 minutes. Machine A prints 120 pages per minute. After 10 minutes, Machine A printed 300 more pages than Machine B. What is Machine B's printing rate per minute?

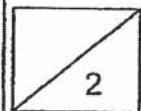
Ans: _____



5. A 2-digit number has a remainder of 5 when it is divided by 9. It has a remainder of 2 when it is divided by 11. Find the 2-digit number.

Do not
write in this
column

Ans: _____



For questions 6 to 18, show your working clearly in the space below each question and write your answers in the space provided. The number of marks awarded is shown in the brackets [] at the end of the question or part-question. (50 marks)

Do not write in this column

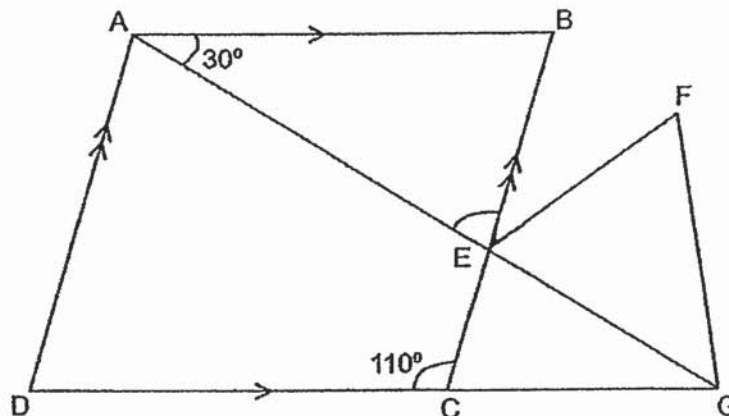
6. Benjamin has $\$8m$. He has twice as much money as Cathy. Alice has $\$5$ more than Cathy.
- (a) How much money does Alice have? Express your answer in terms of m .
- (b) Find the total amount of money they have if $m = 10$.

Ans: (a) _____ [1]

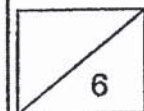
(b) _____ [2]

7. In the diagram below, not drawn to scale, ABCD is a parallelogram.

Find $\angle BEG$.

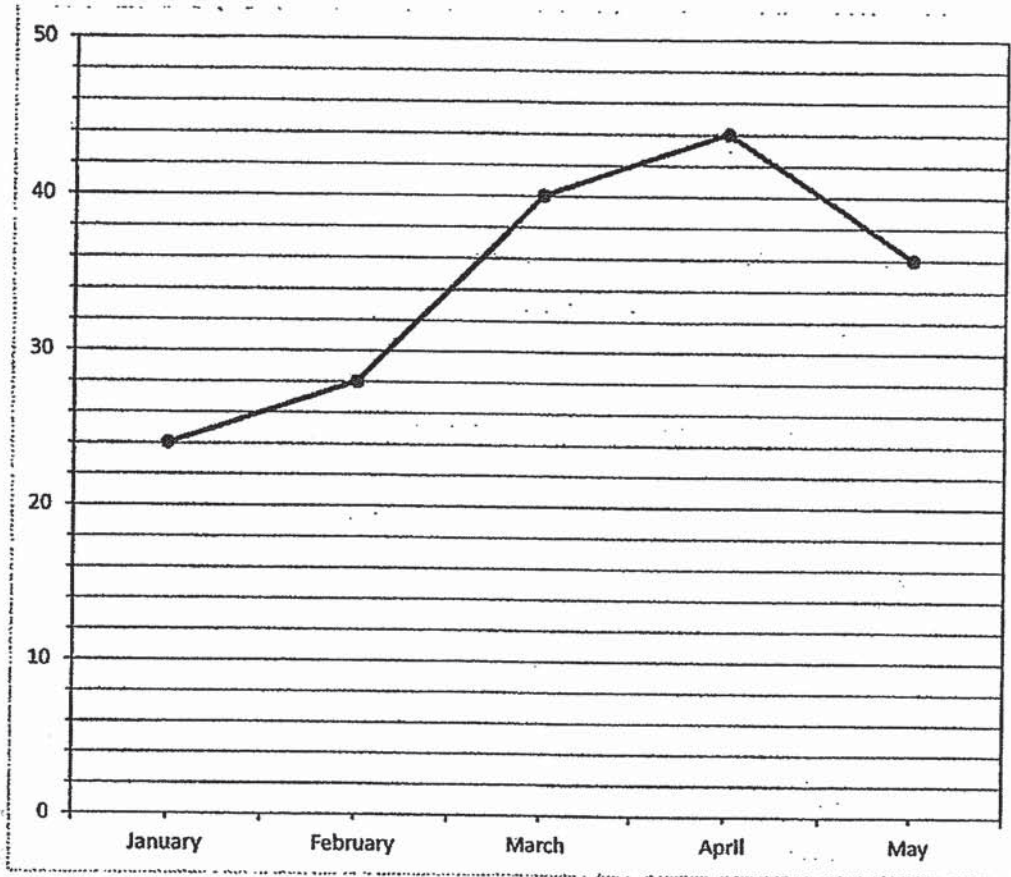


Ans : _____ [3]



8. The graph below shows the number of pens sold at a bookshop at the end of each month over 5 months last year.

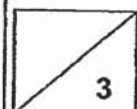
Do not write in this column



- (a) Which 1-month interval has the greatest increase in the number of pens sold?
- (b) Find the ratio of the number of pens sold in January to the total number of pens sold in 5 months. Leave your answer in the simplest form.

Ans : (a) _____ to _____ [1]

(b) _____ [2]



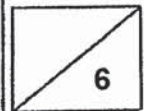
9. Brenda and Joe had \$420 altogether. After Brenda spent $\frac{5}{8}$ of her money and Joe spent $\frac{1}{4}$ of his money, the amount of money Joe had became thrice as much as Brenda. How much money did Joe have at first?

Do not
write in this
column

Ans : _____ [3]

-
10. Rachel spent \$1200 of her salary on a television set and 60% of the remainder on an oven. She had $\frac{1}{4}$ of her salary left. How much was her salary?

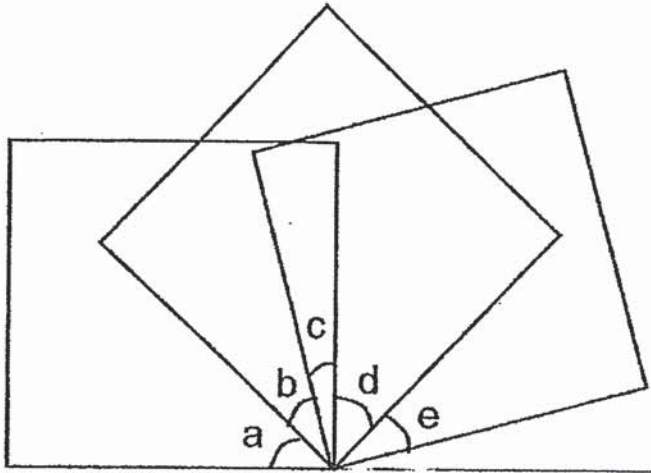
Ans : _____ [3]



11. The figure below, not drawn to scale, consist of 3 identical squares.

(a) Which 2 pairs of angles are equal?

(b) If $\angle c = 15^\circ$, find the sum of $\angle a$, $\angle b$, $\angle c$, $\angle d$ and $\angle e$.

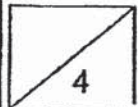


Do not
write in this
column

Ans : (a) \angle ___ and \angle ___ [1]

\angle ___ and \angle ___ [1]

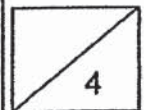
(b) _____ [2]



12. Shanice needs to score 90 marks for her last Mathematics test in this semester so as to improve on her average score from 75 to 78. How many Mathematics tests were there altogether in a semester?

Do not
write in this
column

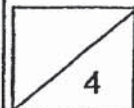
Ans: _____ [4]



13. Daniel had some apples and oranges. He threw away $\frac{1}{5}$ of the apples and bought some oranges to replace the number of apples thrown away. He then gave $\frac{1}{4}$ of the apples and 25 oranges to his neighbours. In the end, he had 54 apples and 81 oranges left. How many oranges did he have at first?

Do not
write in this
column

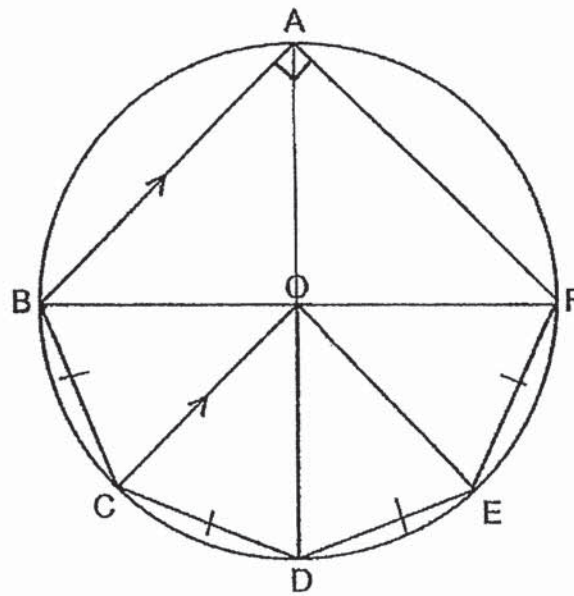
Ans: _____ [4]



14. In the figure below, BF is the diameter of the circle with centre O.

$BC = CD = DE = EF$.

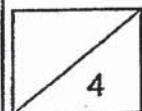
- (a) Find $\angle FBC$
- (b) Find $\angle BFA$



Do not
write in this
column

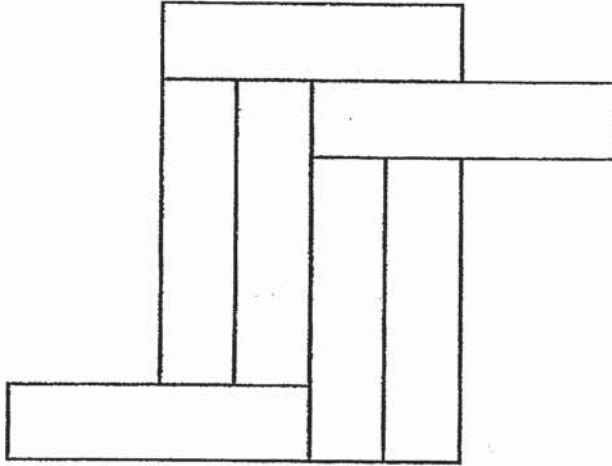
Ans : (a) _____ [2]

(b) _____ [2]



15. The diagram below is made up of 7 identical rectangular blocks.
The area of 1 block is 64cm^2 .

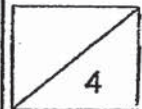
- (a) What is the length of 1 rectangular block?
- (b) What is the perimeter of the whole figure?



Do not
write in this
column

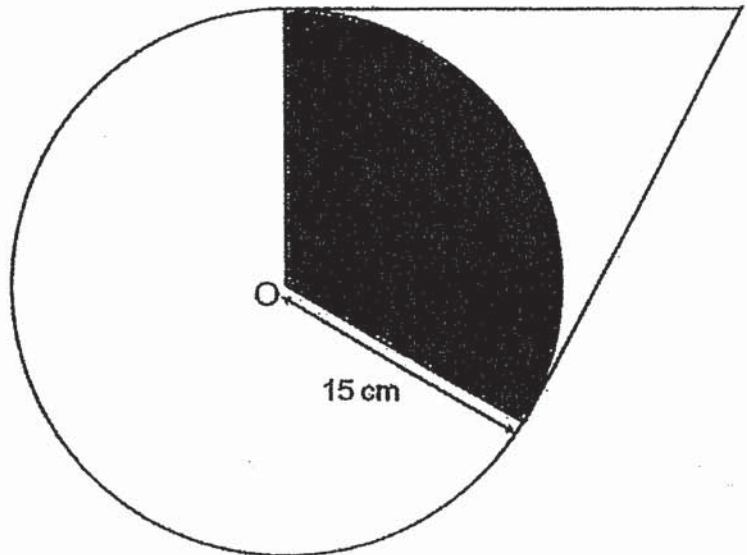
Ans: (a) _____ [2]

(b) _____ [2]

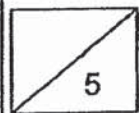


16. The figure below is not drawn to scale. It is made up of a circle, with centre O, and a four-sided figure $\frac{1}{3}$ of the circle and $\frac{3}{5}$ of the four-sided figure is shaded. Find the area of the whole figure. Leave your answer correct to 2 decimal places.

Do not write in this column



Ans: _____ [5]



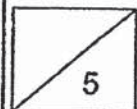
17. Benedict and Calvin each have some money. If Benedict spends \$36 and Calvin spends \$12 daily, Calvin will have \$260 left after Benedict spends all his money. If Calvin spends \$36 and Benedict spends \$12 daily, Calvin will have \$20 left after Benedict spends all of his money. How much do they have respectively?

Do not
write in this
column

Ans: Benedict: _____

Calvin: _____ [5]

End of Paper 2



SCHOOL : SCGS PRIMARY SCHOOL
 LEVEL : PRIMARY 6
 SUBJECT : MATH
 TERM : 2019 SA1

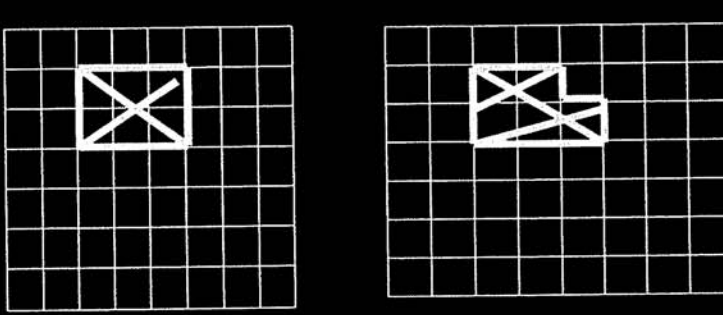
PAPER 1 BOOKLET A

Q 1	Q2	Q3	Q4	Q5	Q6	Q7	Q8	Q9	Q10
3	4	3	2	2	1	1	3	1	2

Q 11	Q12	Q13	Q14	Q15
3	2	2	3	4

PAPER 1 BOOKLET B

Q16)	23685								
Q17)	$3 \div 8 = 0.375 \approx 0.38$								
Q18)	$2 \div 5 = \frac{2}{1} \times \frac{1}{5} = \frac{2}{5}$								
Q19)	<table style="width: 100%; border: none;"> <tr> <td style="width: 50%; border: none;">M: J :Total</td> <td style="width: 50%; border: none;">M : J : Total</td> </tr> <tr> <td style="border: none;">2 : 5 : 7</td> <td style="border: none;">3 : 4 : 7</td> </tr> <tr> <td style="border: none;">5 - 4 = 1</td> <td style="border: none;"></td> </tr> <tr> <td style="border: none;">1U → \$9 × 7 = \$63</td> <td style="border: none;"></td> </tr> </table>	M: J :Total	M : J : Total	2 : 5 : 7	3 : 4 : 7	5 - 4 = 1		1U → \$9 × 7 = \$63	
M: J :Total	M : J : Total								
2 : 5 : 7	3 : 4 : 7								
5 - 4 = 1									
1U → \$9 × 7 = \$63									
Q20)	$1\% \rightarrow 50 \div 100 = 0.50$ $107\% \rightarrow 0.50 \times 107 = \53.50								
Q21)	$240 - 145 = 95$								
Q22)	$10 \times 2 = 20$ $20 \times 20 = 400$ (area of 8) $400 - (3.14 \times 10 \times 10)$ $400 - 314 = 86\text{cm}^2$								
Q23)	$(600 - 2x)$								
Q24)	$7 \times 2 = 14$ $\frac{22}{7} \times \frac{14}{1} = 44$ $44 \times 10 = 440$								

Q25)	
Q26)	$16 \div 2 = 8$ $8 \times 9 = 72$ $100\text{cm} - 72\text{cm} = 28\text{cm}$
Q27)	$H : B : L$ $5 : 3 : 3$ $12 \times 12 = 144$ $3U \rightarrow 12$ $1U \rightarrow 12 \div 3 = 4$ $5U \rightarrow 5 \times 4 = 20$ $20 \times 12 \times 12 = 2880\text{cm}^3$
Q28)	$180^\circ - 125^\circ = 55^\circ$ $180^\circ - 130^\circ = 50^\circ$ $55^\circ + 50^\circ = 105^\circ$
Q29)	100°
Q30)	$1360 + 600 + 240 + 800 = 3000$ $\frac{240}{3000} \times \frac{100}{1}$ $= 8\%$

PAPER 2

Q1)	$5.04\text{kg} \rightarrow 6040\text{g}$ $5040 \div 8 = 630\text{g}$
Q2)	$12 \times 12 = 144$ $1296 \div 144 = 9$ $9 \div 3 = 3$ $3 \times 5 = 15\text{cm}$
Q3)	$3 \times 5 = 15$ $2 \times 5 = 10$ $15 - 10 = 5$ $5u \rightarrow 100$ $1u \rightarrow 100 \div 5 = 20$ $20 \times 6 = 120$

Q4)	<p>A : 1 min \rightarrow 120 10min \rightarrow $120 \times 10 = 1200$ B: 10min \rightarrow $1200 - 300 = 900$ 1min \rightarrow $900 \div 10 = 90$ Ans: 90</p>
Q5)	<p>9: 9, 18, 27, 36, 45, 54, <u>63</u>, 72, 81, 90 (14)(23)(32)(41)(50)(59)(<u>68</u>)(77)(86)(95)</p> <p>11: 11, 22, 33, 44, 55, <u>66</u>, 77, 88, 99, 110 (13)(24)(35)(46)(57)(<u>68</u>)(79)(90)(101)(112)</p> <p>Ans:68</p>
Q6)	<p>a) Ben \rightarrow \$8m cathy \rightarrow \$4m Alice \rightarrow \$(4m+5)</p> <p>b) $(8 \times 10) + (4 \times 10) + (4 \times 10) + 5 = \\165</p>
Q7)	<p>$180^\circ - 110^\circ = 70^\circ$ $110^\circ - 30^\circ = 80^\circ$ $180^\circ - 70^\circ - 30^\circ = 80^\circ$ $180^\circ - 80^\circ = 100^\circ$</p>
Q8)	<p>a) February to March b) $(24+28+40+44+36 = 172)$ 24 : 172 6 : 43</p>
Q9)	<p>$4 \times 3 = 12$ $12 + 8 = 20$ $420 \div 20 = 21$ $21 \times 12 = \\$252$</p>
Q10)	<p>$2 \times 4 = 8$ $8 - 5 = 3$ $3u \rightarrow 1200$ $1u \rightarrow 1200 \div 3 = 400$ $8u \rightarrow 400 \times 8 = \\3200</p>
Q11)	<p>a) $\angle d$ and $\angle e$ $\angle a$ and $\angle b$</p> <p>b) $90^\circ + 90^\circ - 15^\circ = 165^\circ$</p>

Q12)	$90 - 78 = 12$ $12 \div 3 = 4$ $4 + 1 = 5$																						
Q13)	$81 + 25 = 106$ $54 \div 3 = 18$ $106 - 18 = 88$																						
Q14)	$180 \div 4 = 45$ $180 - 45 = 135$ $135 \div 2 = 67.5$ $180 - 90 - 45 = 45^\circ$ a) 67.5° b) 45°																						
Q15)	a) $64 \div 4 = 16$ $4 \times 4 = 16\text{cm}$ b) $4+16+4+8+4+8+16+8+16+4+8+16 = 112\text{cm}$																						
Q16)	Area of circle = πr^2 $= \pi (15)^2 = 706.86\text{cm}^2$ Area of shaded region = $\frac{1}{3}(706.86) = 235.62\text{cm}^2$ Area of four-sided figure = $235.62 \times \frac{3}{5} = 392.70\text{cm}^2$ Area of whole figure = $706.86 + 392.70 - 235.62 = 863.94\text{cm}^2$																						
Q17)	<table style="width: 100%; border: none;"> <tr> <td style="text-align: center;">B : C</td> <td style="text-align: center;">B : C</td> </tr> <tr> <td style="text-align: center;">$36 \times U : 12 \times U + 260$</td> <td style="text-align: center;">$12 \times P : 36 \times P + 20$</td> </tr> <tr> <td style="text-align: center;">$36U = 12P$</td> <td style="text-align: center;">$12U = 4P$</td> </tr> <tr> <td style="text-align: center;">$3U = 1P$</td> <td></td> </tr> <tr> <td style="text-align: center;">$12U + 260 = 36P + 20$</td> <td></td> </tr> <tr> <td style="text-align: center;">$12U + 240 = 36P$</td> <td></td> </tr> <tr> <td style="text-align: center;">$36 - 4 = 32$</td> <td></td> </tr> <tr> <td style="text-align: center;">$32P \rightarrow 240$</td> <td></td> </tr> <tr> <td style="text-align: center;">$1P \rightarrow 240 \div 32 = 7.5$</td> <td></td> </tr> <tr> <td style="text-align: center;">Benedict $\rightarrow 12 \times 7.5 = 90$</td> <td></td> </tr> <tr> <td style="text-align: center;">Calvin $\rightarrow 36 \times 7.5 = 270 + 20 = 290$</td> <td></td> </tr> </table>	B : C	B : C	$36 \times U : 12 \times U + 260$	$12 \times P : 36 \times P + 20$	$36U = 12P$	$12U = 4P$	$3U = 1P$		$12U + 260 = 36P + 20$		$12U + 240 = 36P$		$36 - 4 = 32$		$32P \rightarrow 240$		$1P \rightarrow 240 \div 32 = 7.5$		Benedict $\rightarrow 12 \times 7.5 = 90$		Calvin $\rightarrow 36 \times 7.5 = 270 + 20 = 290$	
B : C	B : C																						
$36 \times U : 12 \times U + 260$	$12 \times P : 36 \times P + 20$																						
$36U = 12P$	$12U = 4P$																						
$3U = 1P$																							
$12U + 260 = 36P + 20$																							
$12U + 240 = 36P$																							
$36 - 4 = 32$																							
$32P \rightarrow 240$																							
$1P \rightarrow 240 \div 32 = 7.5$																							
Benedict $\rightarrow 12 \times 7.5 = 90$																							
Calvin $\rightarrow 36 \times 7.5 = 270 + 20 = 290$																							