

ROSYTH SCHOOL
PRIMARY 1
MATHEMATICS
TOPICAL TEST 1

Name : _____ ()

Marks :  20

Class : P 1 -

Date : 21.2.2013

Duration : 30 minutes

Parent's Signature : _____

Read the questions carefully. Answer all questions.
(10 × 2 = 20 marks)

1. Match the numbers and words.

five •





• 7

seven •


• 4

• 5

2. Fill in the missing numbers in the boxes.



3. Study the picture below carefully.
Circle the correct answer.



The number of flowers is ~~the same as~~ / ~~greater than~~ / ~~smaller than~~ the number of butterflies.


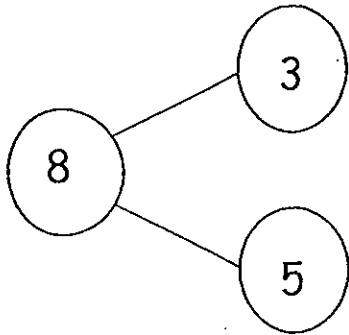
4. May is thinking of a number.
It is between 7 and 10.
It is not 8.

The number is

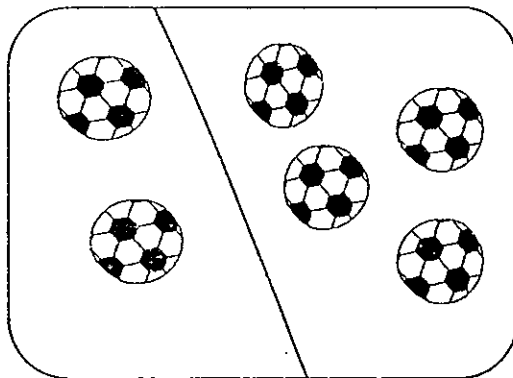
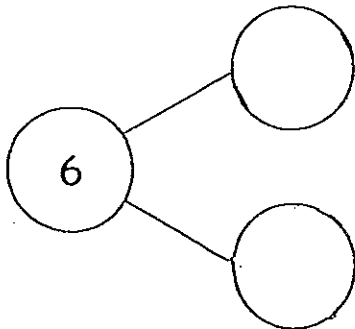


7, 8, 9, 10


5. Study the number bond carefully.
Draw a line in the picture to show the two parts.



6. Study the picture carefully. Complete the number bond.



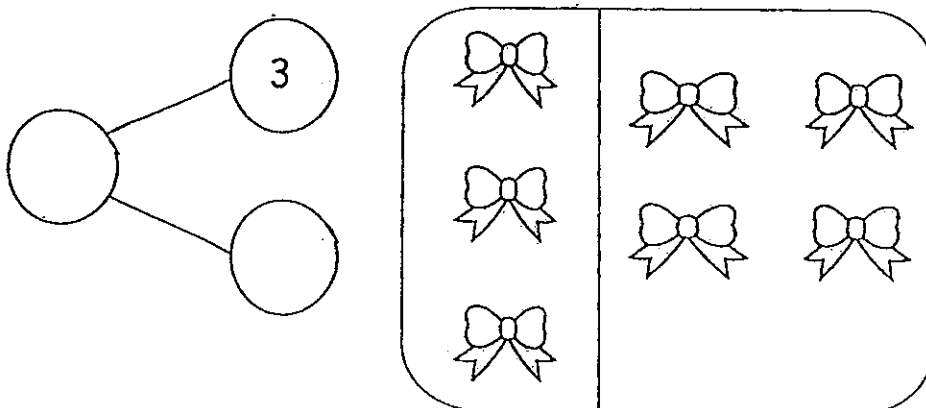
Use the picture below to answer questions 7 and 8.



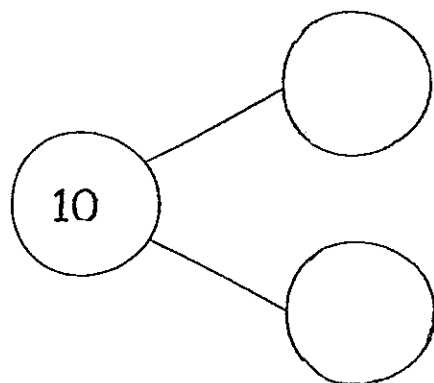
7. 2 and make 9.

8. and 4 make 9.

9. Study the picture carefully. Complete the number bond.



10. Two numbers make up the number bond of 10.
One of the numbers is smaller than 1.
What are the two numbers?
Complete the number bond below.



- End of paper -



ANSWER SHEET

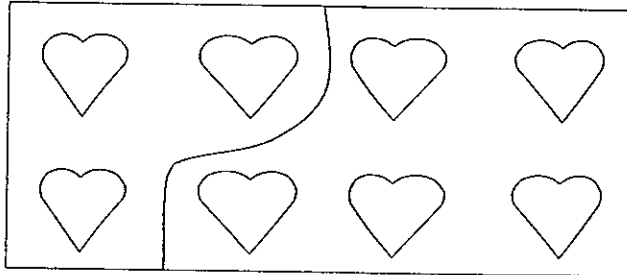
EXAM PAPER 2013

SCHOOL : ROSYTH SCHOOL

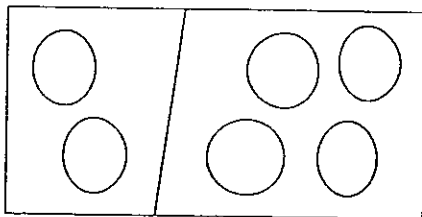
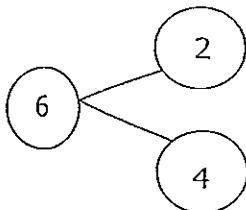
SUBJECT : PRIMARY 1 MATHEMATICS

TERM : CA1 (TEST 1)

1. Five - 5
Seven - 7
2. 9, 7
3. Greater than
4. 9
- 5.



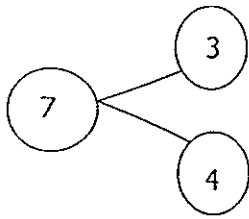
6.



7. 7

8. 5

9.



10.

