

Nanyang Primary School
Mathematics
Primary 1
Term 4 Practice Paper 1
(1B Units 11 to 19 except Unit 16 Money)

Name: _____ ()

Marks: / 50

Class: P1 _____

Parent's Signature: _____

Date: _____

Duration: 1 hour

Section A

Questions 1 to 14 carry 1 mark each.

For each question, four options are given.

One of them is the correct answer.

Choose the correct answer and write its number (1, 2, 3 or 4) in the brackets () provided. (Total: 14 marks)

1. What is the missing number in the box?

$$34 + 3 = \boxed{?}$$

(1) 31

(2) 36

(3) 37

(4) 38

()

2. What is the difference between 56 and 21?

(1) 3 tens 5 ones

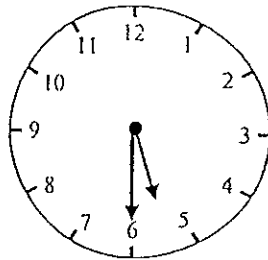
(2) 3 tens 7 ones

(3) 4 tens 4 ones

(4) 7 tens 7 ones

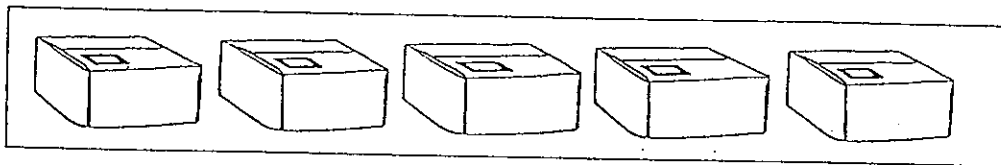
()

3. What is the time shown on the clock?



- (1) 5 o'clock (2) Half past 5
(3) 6 o'clock (4) Half past 6 ()

4. There are 6 dolls in each box.
Anne has to find the total number of dolls in all the 5 boxes.
Which one of the following is incorrect ?

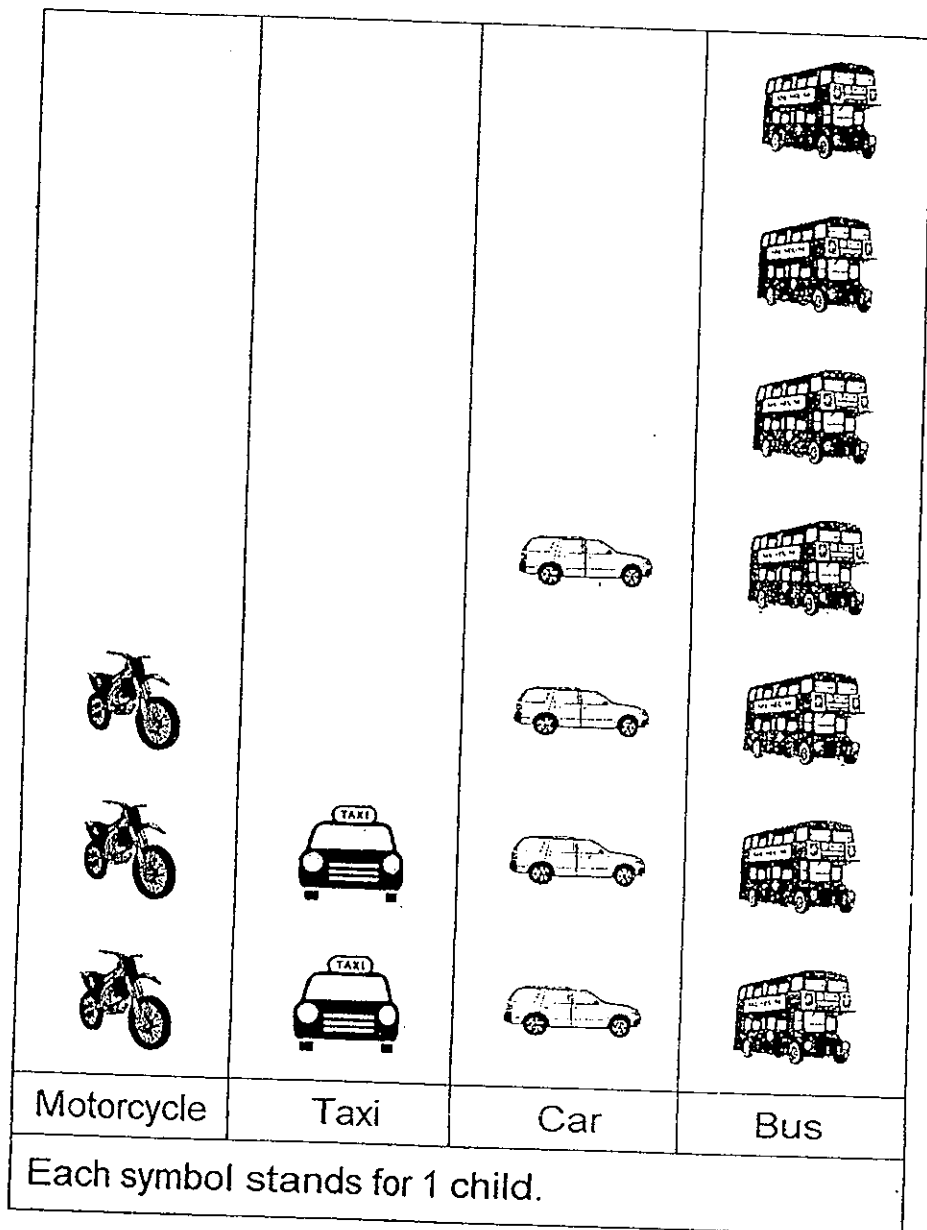


- (1) $6 \times 6 \times 6 \times 6 \times 6$ (2) 5 groups of six
(3) $6 + 6 + 6 + 6 + 6$ (4) 5 sixes ()

5. Mr Loh caught 8 fish on Monday.
He caught 9 fish on Tuesday and 4 fish on Wednesday.
How many fish did he catch altogether?

- (1) 13 (2) 17
(3) 20 (4) 21 ()

14. Ali made a graph to show how his friends go to school.



How many more children go to school by bus than by taxi?

- (1) 5
(3) 7

- (2) 2
(4) 9

()

Section B

Questions 15 to 24 carry 2 marks each.


Show your working clearly in the space provided for each question and write your answer in the blank provided.

(Total: 20 marks)

15. a) Write 4 tens 8 ones in numerals.


b) Write 97 in words.

16. Arrange the numbers below in order, beginning with the smallest.

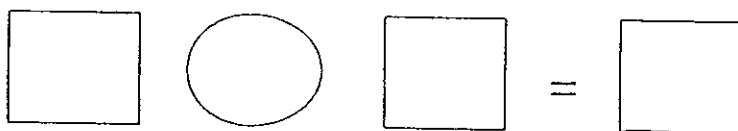



Smallest

17. Ring the frogs below into 6 equal groups.



18. Study the pictures below.
Write a multiplication sentence.




19. There are 3 different coloured trains lined up on a track, a red, a blue and a green.
The red train is between the blue and the green train.
The blue train is behind the red train.
Which train is the first in the line?

Ans: _____

20. Madam Rosnah had 90 hats.
After selling some hats, she had 27 hats left.
How many hats did she sell?


Ans: _____

21. Kennedy started playing computer games at the time shown below. He played for half an hour.




Starting Time


Which clock below shows the time he finished playing?



Clock P









Clock Q



Clock R

Ans: _____




22. The graph shows the number of books Melvin read in 5 days.

| | |
|---|--|
| Monday |  |
| Tuesday |  |
| Wednesday |  |
| Thursday |  |
| Friday |  |
| Each  stands for 1 book. | |

What was the total number of books he read on Tuesday Thursday and Friday?

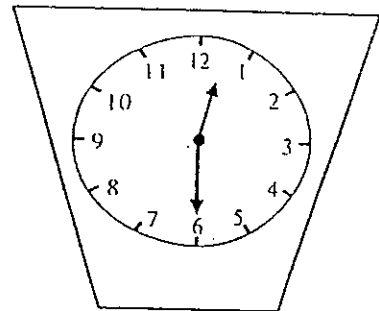

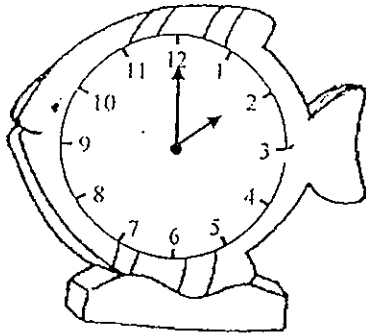
Ans: _____

23. Mr Lim has 3 sons.
He bought 9 toy cars for each son.
How many toy cars did he buy in all?



Ans: _____

24. Gerald reached the library at half past 1.
He left the library before 3 o'clock.
Circle the clock that shows the time Gerald left the library.



Section C

Questions 25 to 28 carry 4 marks each.

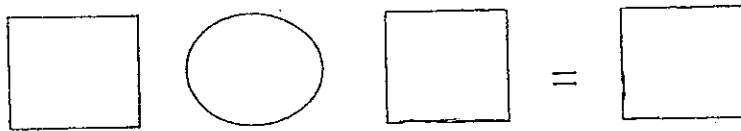
Do these word problems carefully.

Show your working clearly in the space provided for each question.

(Total: 16 marks)


25. Mr Tan picked 40 oranges.
He threw away 28 rotten oranges.

- a) How many oranges had he left?




He had _____ oranges left.

- b) Mr Tan packed the remaining oranges into the bags below.
Draw an equal number of oranges in each bag to show the number of oranges Mr Tan packed into each bag.



Mr Tan packed _____ oranges into each bag.

26. Mr Tan baked some muffins.
He packed 8 muffins in each box.



- a) Joanne bought 2 boxes of muffins from Mr Tan on Monday.
How many muffins did Joanne buy on Monday?

$$\square \circ \square = \square$$

Joanne bought _____ muffins on Monday.


- b) Joanne bought 5 boxes of muffins from Mr Tan on Tuesday.
How many muffins did Joanne buy on Tuesday?

$$\square \circ \square = \square$$

Joanne bought _____ muffins on Tuesday.

27. There are 6 cows in a barn.


a) How many legs do the cows have altogether?



$$\square \quad \bigcirc \quad \square = \square$$

They have _____ legs altogether.

b) There is also a duck in the barn.
How many more legs do **all the cows** have than the duck?



$$\square \quad \bigcirc \quad \square = \square$$

The cows have _____ more legs than the duck.

28. Mrs Chew did a survey with her 30 pupils.
She asked them which country they would like to visit during the December holidays.

| | |
|----------------------------|-----------------|
| America | |
| Brazil | △ △ |
| China | △ △ △ △ △ △ △ △ |
| Denmark | △ △ △ △ △ △ |
| England | △ △ △ △ |
| France | |
| Each △ stands for 1 pupil. | |

- a) 2 more pupils would like to visit France than America.
Draw in the triangles (△) to show the number of pupils who chose America and France. (2m)
- b) more pupils would like to visit China than England. (1m)
- c) 14 pupils chose to visit Brazil, China and _____ (1m)

☺ End of Paper ☺
Please Check Carefully

ANSWER SHEET

EXAM PAPER 2013

SCHOOL : NANYANG PRIMARY SCHOOL

SUBJECT : PRIMARY 1 MATHEMATICS

TERM : TERM 4 PRACTICE (Paper 1)

| | | | | | | | | | | | | | |
|----|----|----|----|----|----|----|----|----|-----|-----|-----|-----|-----|
| Q1 | Q2 | Q3 | Q4 | Q5 | Q6 | Q7 | Q8 | Q9 | Q10 | Q11 | Q12 | Q13 | Q14 |
| 3 | 1 | 2 | 1 | 4 | 3 | 3 | 1 | 4 | 3 | 3 | 1 | 3 | 1 |

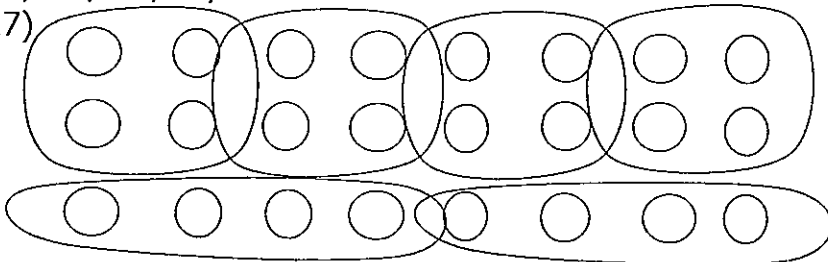
Section B

Q15) a) 48

b) Ninety-seven

Q16) 27, 56, 65, 71

Q17)



Q18) $6 \times 5 = 30$

Q19) green

Q20) 63

Q21) Q

Q22) 12

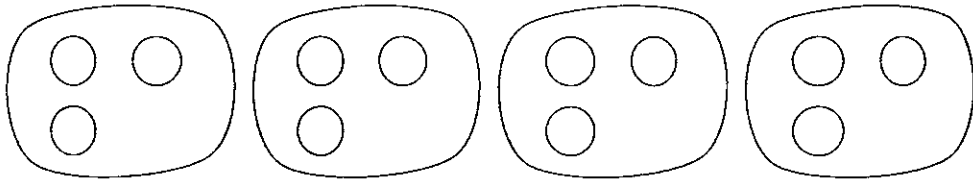
Q23) $3 \times 9 = 27$

Q24) 2 o'clock

Section C

Q25) a) $40 - 28 = 12$

b) 3 oranges in each bag



- Q26) a) $2 \times 8 = 16$
b) $5 \times 8 = 40$

- Q27) a) $6 \times 4 = 24$
b) $24 - 2 = 22$

Q28) a)

| | |
|---------|--|
| America | |
| France | |

- b) 4
c) England